


Group in Pairs: Odd & Even

Sheet 1

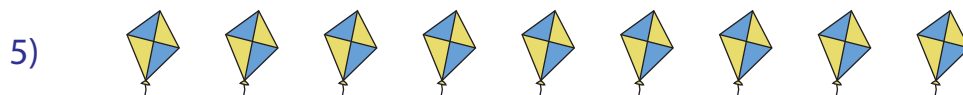
Circle the pictures into groups of two. Write whether the total is odd or even.












Group in Pairs: Odd & Even


Sheet 1

Circle the pictures into groups of two. Write whether the total is odd or even.

1)

odd

2)

even

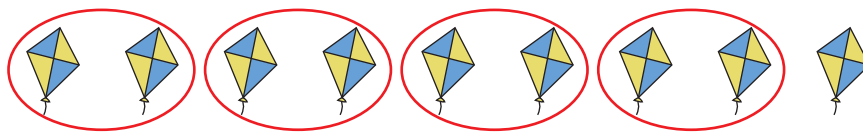
3)

odd

4)

even

5)

odd