

Group in Pairs: Odd & Even

Sheet 2

Circle the pictures into groups of two. Write whether the total is odd or even.











PREVIEW

Gain complete access to the largest collection of worksheets in all subjects!

Members, please log in to download this worksheet.

Not a member? Please sign up to gain complete access.

www.mathworksheets4kids.com

Group in Pairs: Odd & Even


Sheet 2

Circle the pictures into groups of two. Write whether the total is odd or even.

1)

even

2)

odd


PREVIEW

Gain complete access to the largest
collection of worksheets in all subjects!

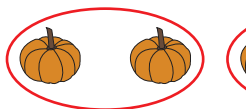
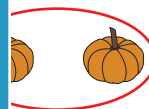
Members, please
log in to
download this
worksheet.

Not a member?
Please sign up to
gain complete
access.


www.mathworksheets4kids.com




3)

even

4)

odd

5)

even