

Grouping the Items

Sheet 1

Group all the items into odd or even.

- 1) Two groups of odd number of onions.



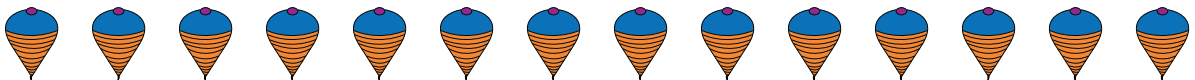
- 2) One even group and one odd group of staplers.



- 3) Two groups of even number of papayas.




- 4) Two groups of odd number of spinning tops.



- 5) One odd group and one even group of flowers.



- 6) Two groups of even number of candles.

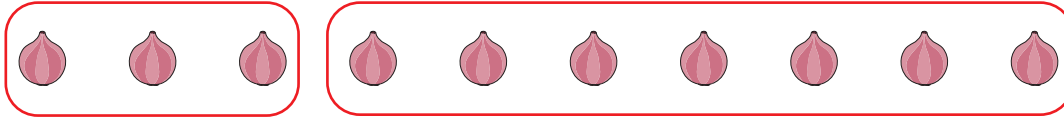


Grouping the Items

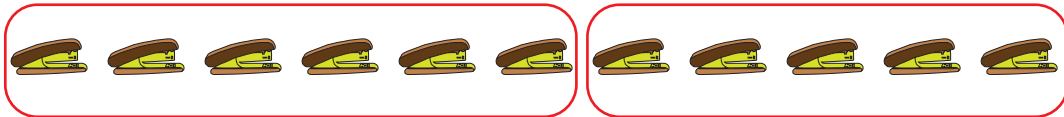
Sheet 1

Group all the items into odd or even. (Answers may differ by the way you group them)

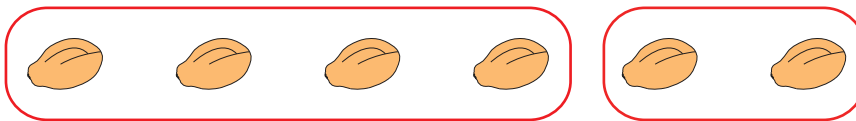
- 1) Two groups of odd number of onions.



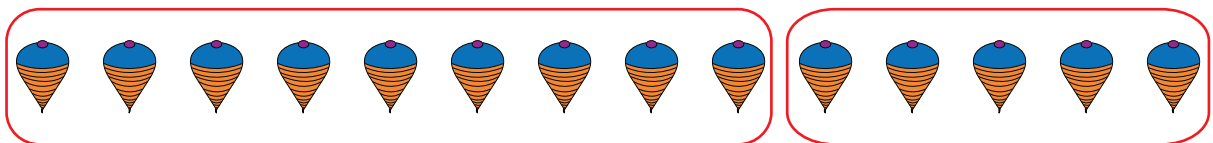
- 2) One even group and one odd group of staplers.




- 3) Two groups of even number of papayas.



- 4) Two groups of odd number of spinning tops.



- 5) One odd group and one even group of flowers.



- 6) Two groups of even number of candles.

