

Name : _____

Identifying Ordered Pairs

All quadrants: S2

A) Write the point that is located at each ordered pair.

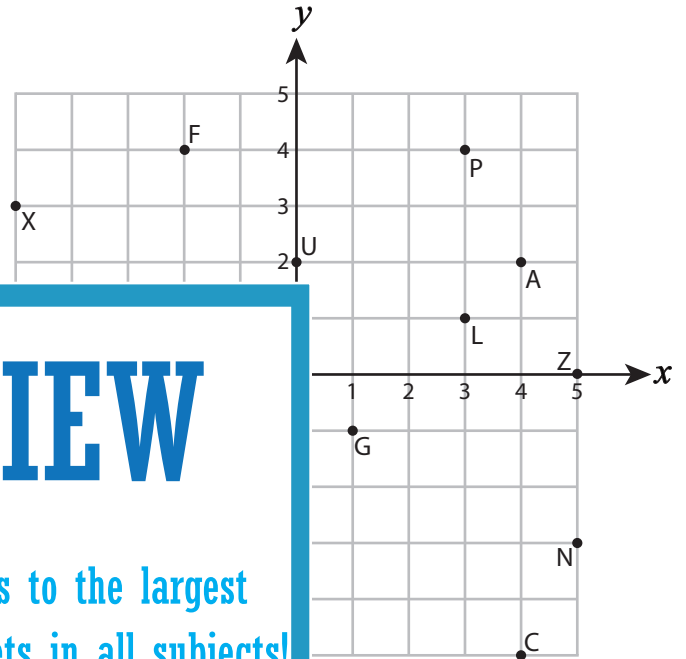
1) $(4, -5)$ _____ 2) $(3, 4)$ _____

3) $(-5, -4)$ _____ 4) $(5, 0)$ _____

5) $(1, -1)$ _____

7) $(0, 2)$ _____

9) $(5, -3)$ _____



PREVIEW

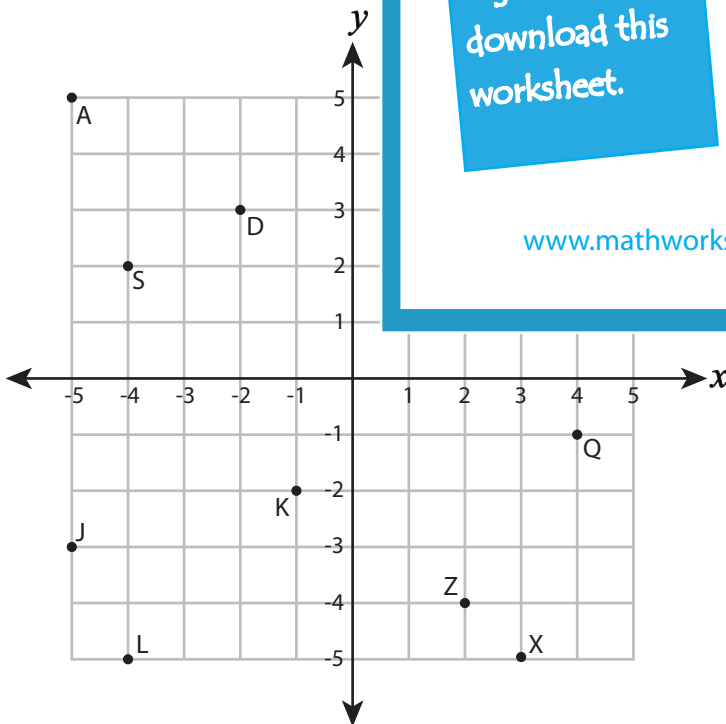
Gain complete access to the largest collection of worksheets in all subjects!

Members, please log in to download this worksheet.

Not a member? Please sign up to gain complete access.

www.mathworksheets4kids.com

B) Write the ordered pair for



- 12) Q (_____ , _____)
- 14) G (_____ , _____)
- 15) S (_____ , _____)
- 16) J (_____ , _____)
- 17) Z (_____ , _____)
- 18) D (_____ , _____)
- 19) A (_____ , _____)
- 20) L (_____ , _____)

Name : _____

Answer Key

Identifying Ordered Pairs

All quadrants: S2

A) Write the point that is located at each ordered pair.

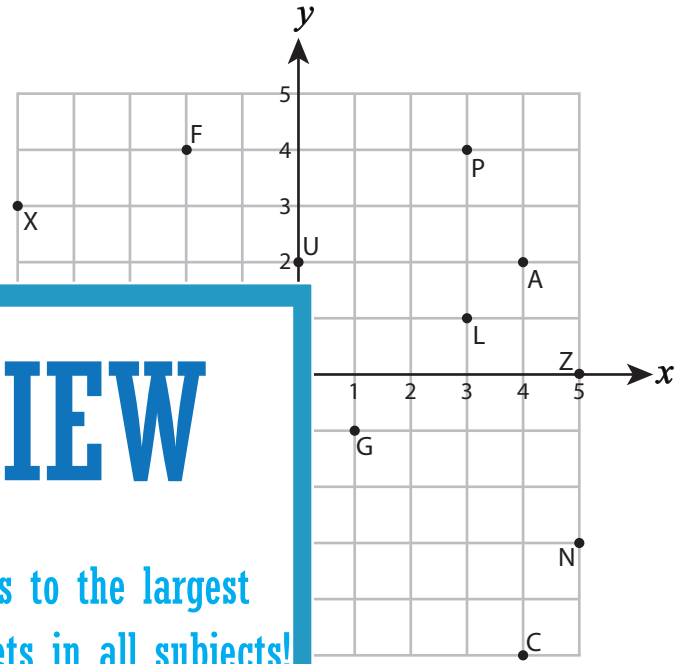
1) $(4, -5)$ C 2) $(3, 4)$ P

3) $(-5, -4)$ H 4) $(5, 0)$ Z

5) $(1, -1)$ G

7) $(0, 2)$ U

9) $(5, -3)$ N



PREVIEW

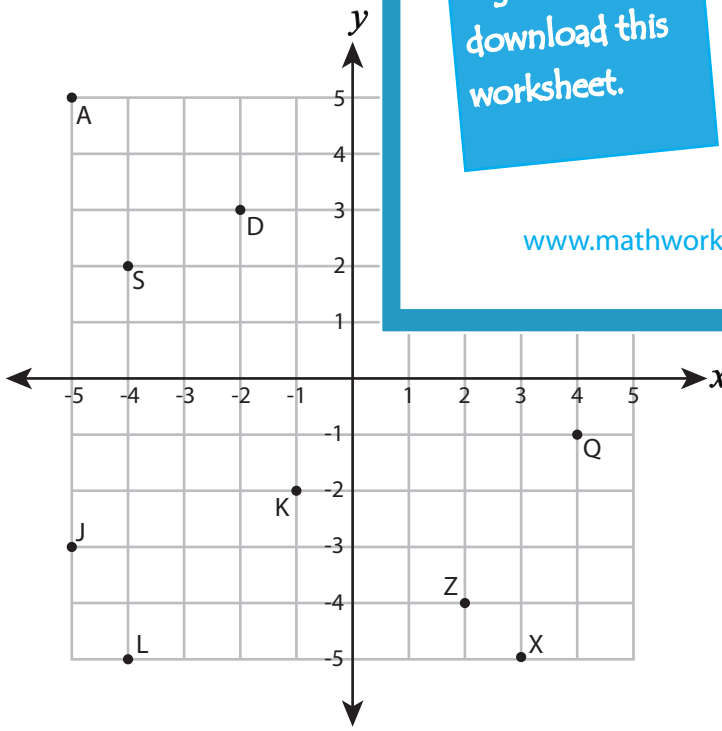
Gain complete access to the largest collection of worksheets in all subjects!

Members, please log in to download this worksheet.

Not a member? Please sign up to gain complete access.

www.mathworksheets4kids.com

B) Write the ordered pair for



12) Q (4 , -1)

14) G (1 , 3)

15) S (-4 , 2)

16) J (-5 , -3)

17) Z (2 , -4)

18) D (-2 , 3)

19) A (-5 , 5)

20) L (-4 , -5)