

Name : _____

Identifying Ordered Pairs

All quadrants: S4

A) Write the point that is located at each ordered pair.

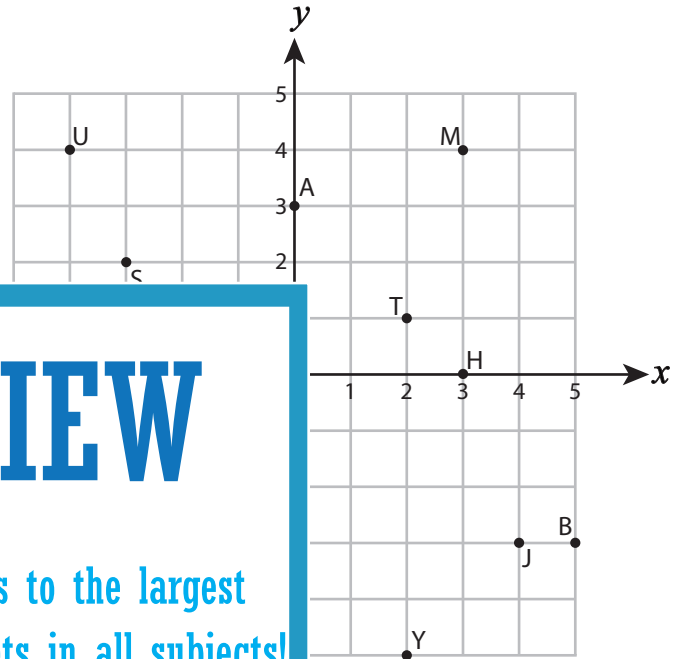
1) $(5, -3)$ _____ 2) $(3, 0)$ _____

3) $(-4, 4)$ _____ 4) $(2, -5)$ _____

5) $(0, 3)$ _____

7) $(-1, -4)$ _____

9) $(-2, -1)$ _____



PREVIEW

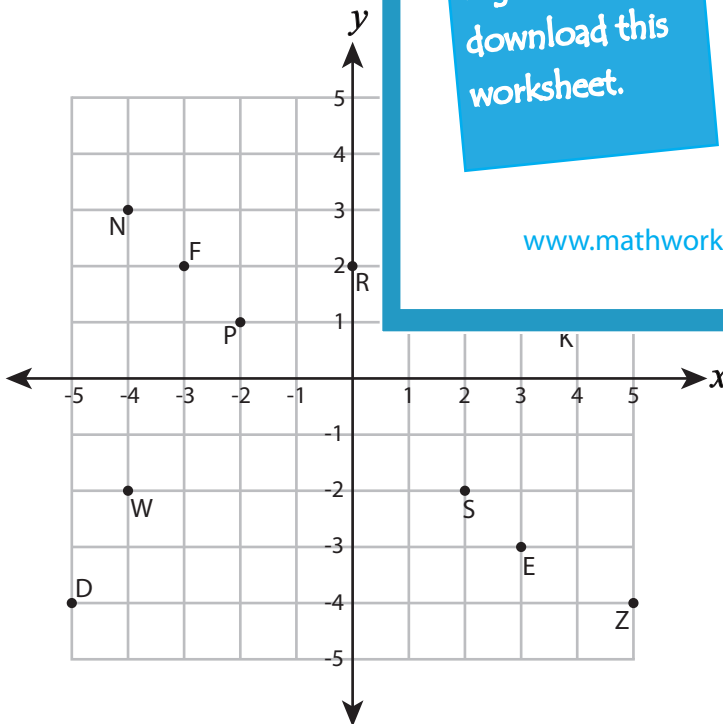
Gain complete access to the largest collection of worksheets in all subjects!

Members, please log in to download this worksheet.

Not a member? Please sign up to gain complete access.

www.mathworksheets4kids.com

B) Write the ordered pair for



12) D(_____ , _____)

14) N(_____ , _____)

15) K(_____ , _____)

16) I(_____ , _____)

17) P(_____ , _____)

18) F(_____ , _____)

19) L(_____ , _____)

20) Z(_____ , _____)

Name : _____

Answer Key

Identifying Ordered Pairs

All quadrants: S4

A) Write the point that is located at each ordered pair.

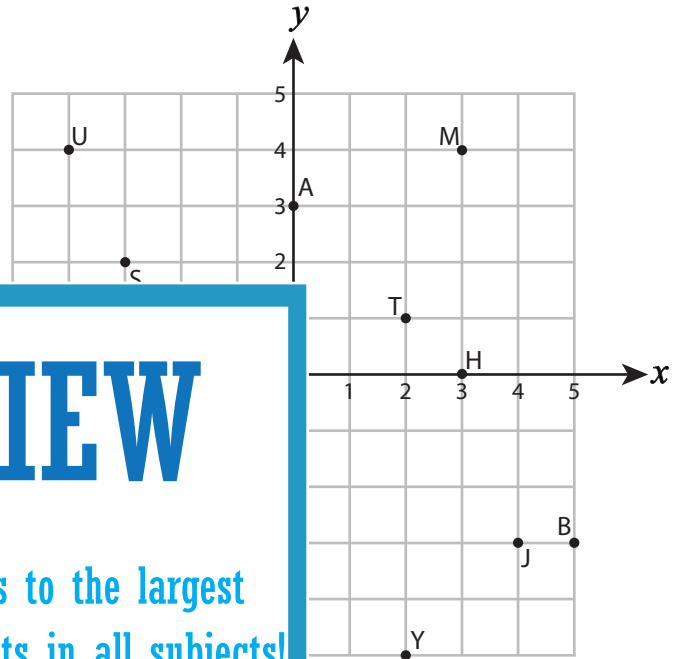
1) $(5, -3)$ **B** 2) $(3, 0)$ **H**

3) $(-4, 4)$ **U** 4) $(2, -5)$ **Y**

5) $(0, 3)$ **A**

7) $(-1, -4)$ **R**

9) $(-2, -1)$ **L**



PREVIEW

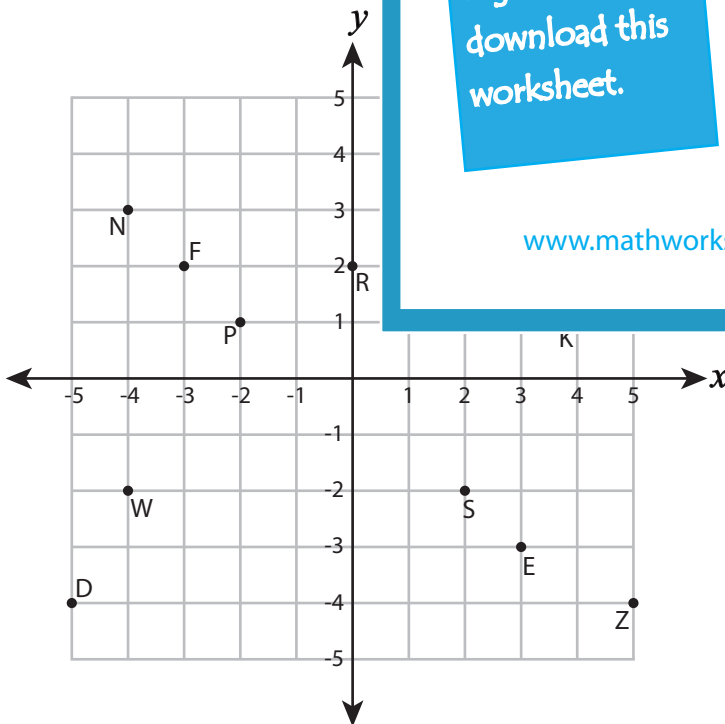
Gain complete access to the largest collection of worksheets in all subjects!

Members, please log in to download this worksheet.

Not a member? Please sign up to gain complete access.

www.mathworksheets4kids.com

B) Write the ordered pair for



12) D(-5 , -4)

14) N(-4 , 3)

15) K(4 , 1)

16) I(4 , 5)

17) P(-2 , 1)

18) F(-3 , 2)

19) L(2 , 3)

20) Z(5 , -4)