

Identifying Ordered Pairs

A) Write the point that is located at each ordered pair.

1) (2, 5) _____

2) (4, 6) _____

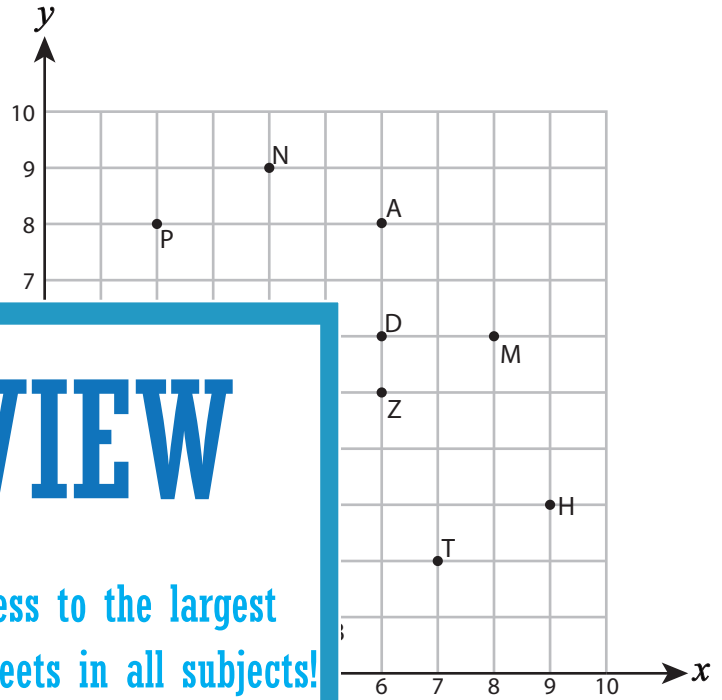
3) (9, 3) _____

4) (7, 2) _____

5) (6, 6) _____

7) (4, 9) _____

9) (5, 1) _____



PREVIEW

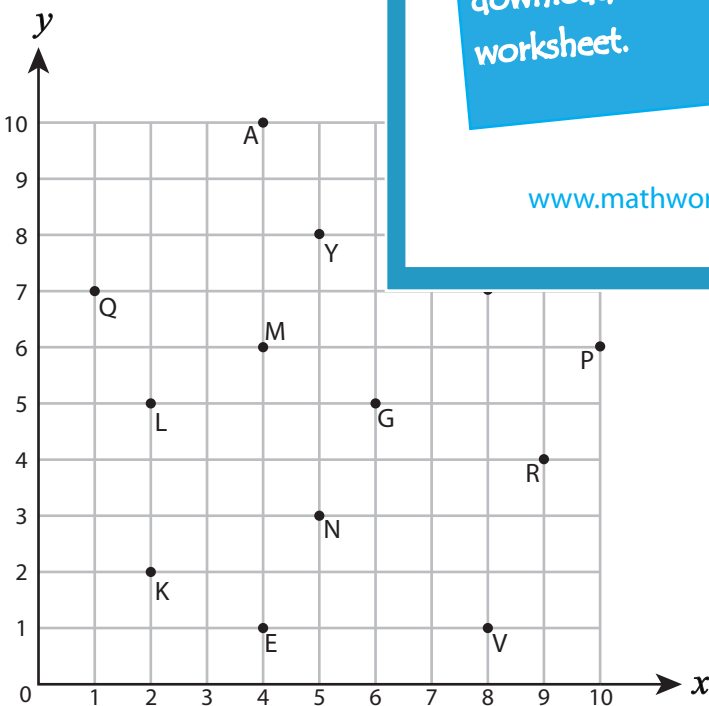
Gain complete access to the largest collection of worksheets in all subjects!

Members, please log in to download this worksheet.

Not a member? Please sign up to gain complete access.

www.mathworksheets4kids.com

B) Write the ordered pair for



15) E (_____ , _____)

17) Q (_____ , _____)

19) Y (_____ , _____)

12) V (_____ , _____)

14) C (_____ , _____)

16) L (_____ , _____)

18) A (_____ , _____)

20) K (_____ , _____)

Name : _____

Answer Key

Identifying Ordered Pairs

Positive: S1

A) Write the point that is located at each ordered pair.

1) (2, 5) **U**

2) (4, 6) **R**

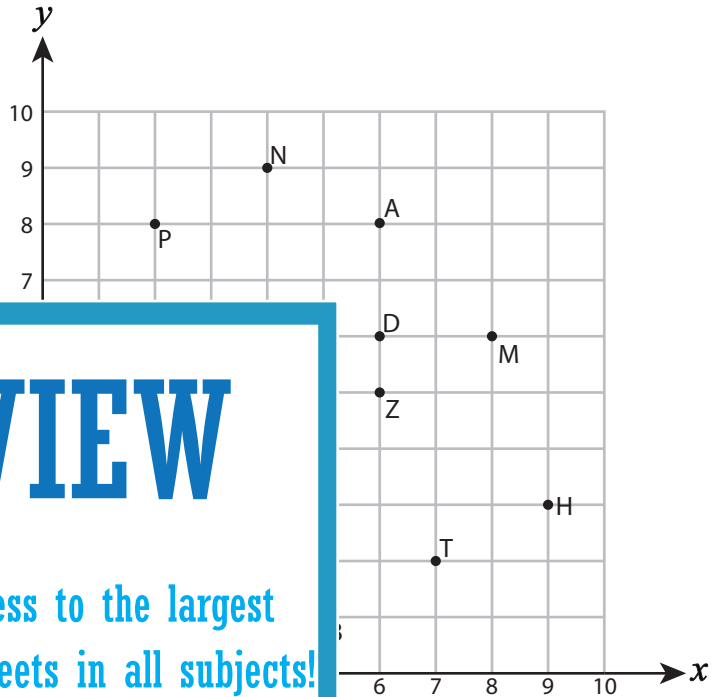
3) (9, 3) **H**

4) (7, 2) **T**

5) (6, 6) **D**

7) (4, 9) **N**

9) (5, 1) **B**



PREVIEW

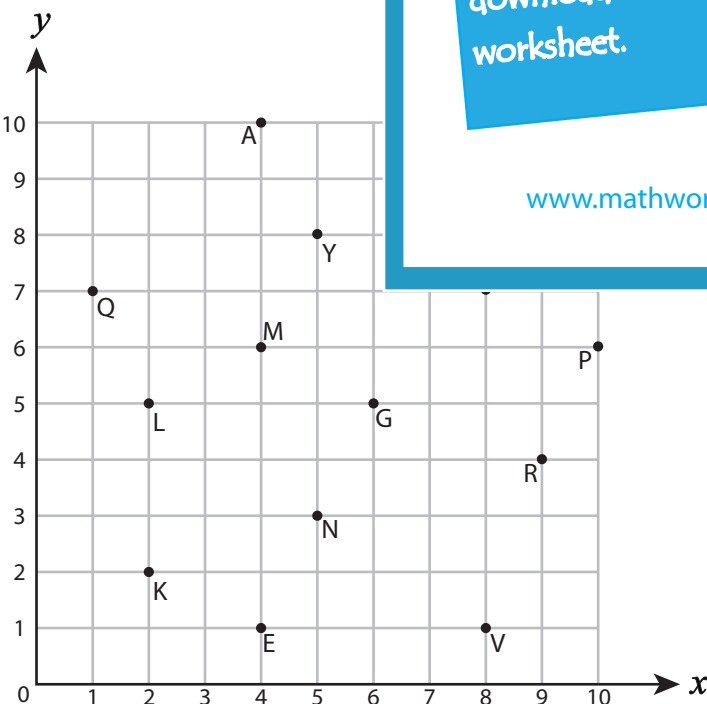
Gain complete access to the largest collection of worksheets in all subjects!

Members, please log in to download this worksheet.

Not a member? Please sign up to gain complete access.

www.mathworksheets4kids.com

B) Write the ordered pair for



12) V (**8** , **1**)

14) C (**8** , **7**)

15) E (**4** , **1**)

16) L (**2** , **5**)

17) Q (**1** , **7**)

18) A (**4** , **10**)

19) Y (**5** , **8**)

20) K (**2** , **2**)