

Identifying Ordered Pairs

A) Write the point that is located at each ordered pair.

1) (6, 2) _____

2) (6, 8) _____

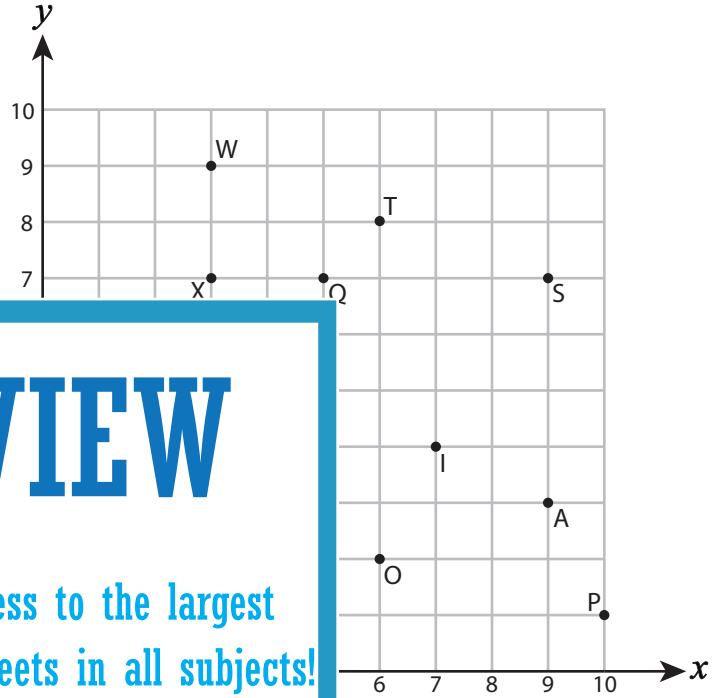
3) (10, 1) _____

4) (4, 5) _____

5) (9, 7) _____

7) (1, 6) _____

9) (2, 1) _____



PREVIEW

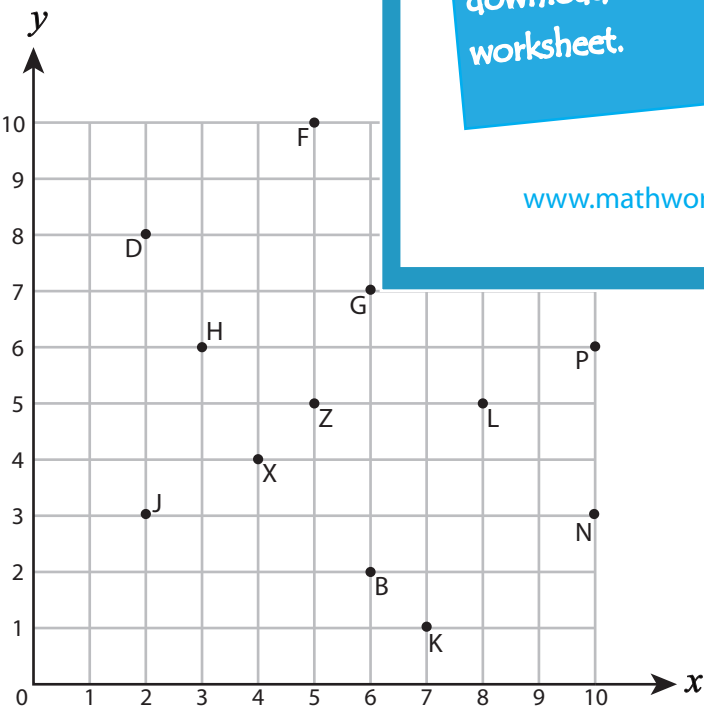
Gain complete access to the largest collection of worksheets in all subjects!

Members, please log in to download this worksheet.

Not a member? Please sign up to gain complete access.

www.mathworksheets4kids.com

B) Write the ordered pair for



12) X (_____ , _____)

14) L (_____ , _____)

15) Z (_____ , _____)

16) P (_____ , _____)

17) D (_____ , _____)

18) M (_____ , _____)

19) J (_____ , _____)

20) H (_____ , _____)

Name : _____

Answer Key

Identifying Ordered Pairs

Positive: S2

A) Write the point that is located at each ordered pair.

1) $(6, 2)$ O

2) $(6, 8)$ T

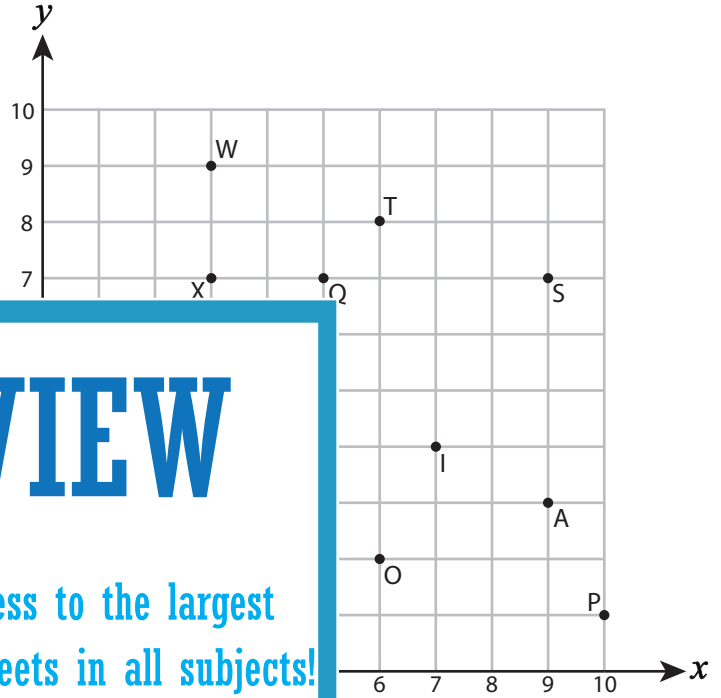
3) $(10, 1)$ P

4) $(4, 5)$ E

5) $(9, 7)$ S

7) $(1, 6)$ J

9) $(2, 1)$ U



PREVIEW

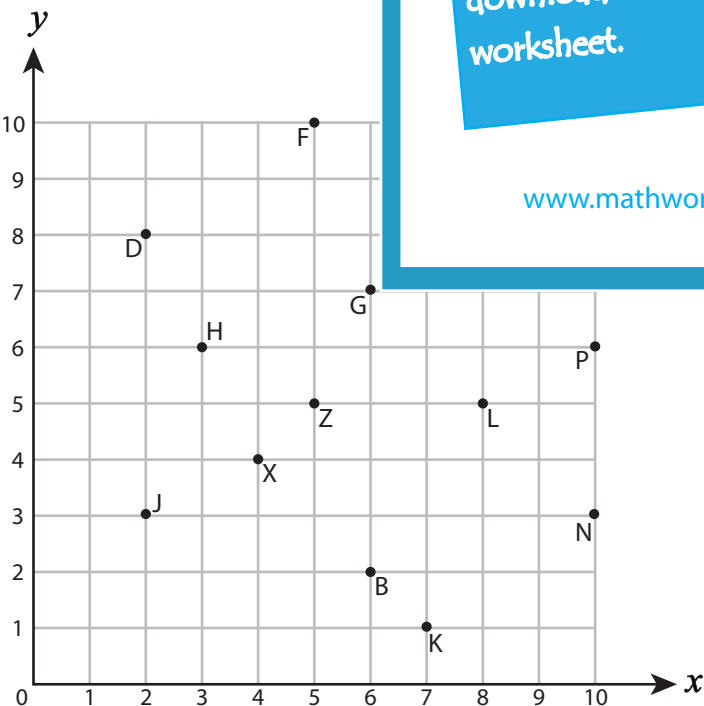
Gain complete access to the largest collection of worksheets in all subjects!

Members, please log in to download this worksheet.

Not a member? Please sign up to gain complete access.

www.mathworksheets4kids.com

B) Write the ordered pair for



12) X (4 , 4)

14) L (8 , 5)

15) Z (5 , 5)

16) P (10 , 6)

17) D (2 , 8)

18) M (7 , 9)

19) J (2 , 3)

20) H (3 , 6)