

Identifying Ordered Pairs

A) Write the point that is located at each ordered pair.

1) (2, 8) _____

2) (9, 10) _____

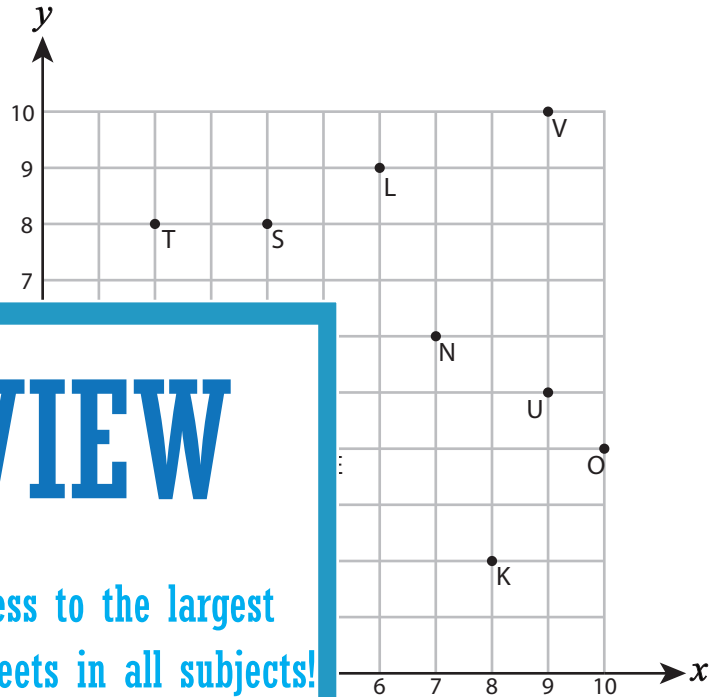
3) (2, 5) _____

4) (1, 1) _____

5) (1, 4) _____

7) (4, 2) _____

9) (4, 8) _____



PREVIEW

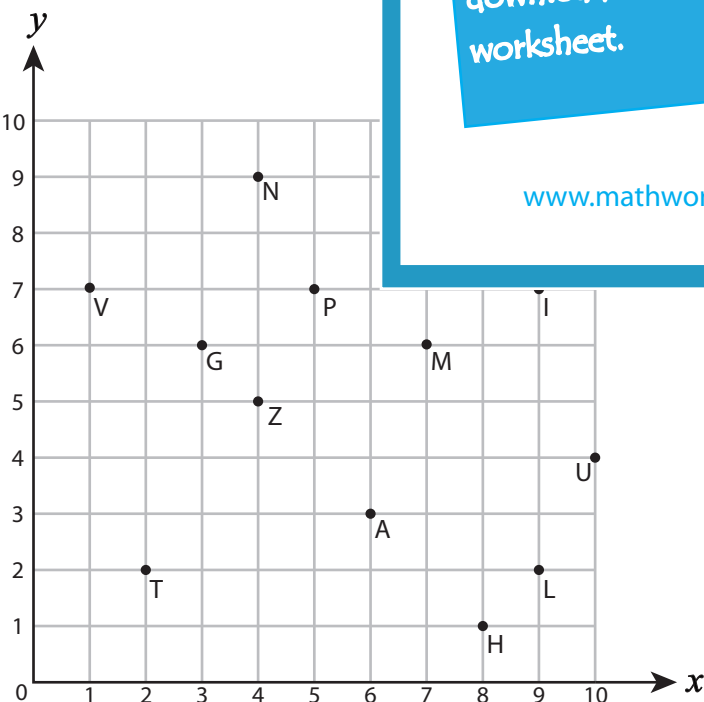
Gain complete access to the largest collection of worksheets in all subjects!

Members, please log in to download this worksheet.

Not a member? Please sign up to gain complete access.

www.mathworksheets4kids.com

B) Write the ordered pair for



12) H (_____ , _____)

14) U (_____ , _____)

15) N (_____ , _____)

16) G (_____ , _____)

17) I (_____ , _____)

18) Z (_____ , _____)

19) T (_____ , _____)

20) P (_____ , _____)

Name : _____

Answer Key

Identifying Ordered Pairs

Positive: S3

A) Write the point that is located at each ordered pair.

1) (2, 8) T

2) (9, 10) V

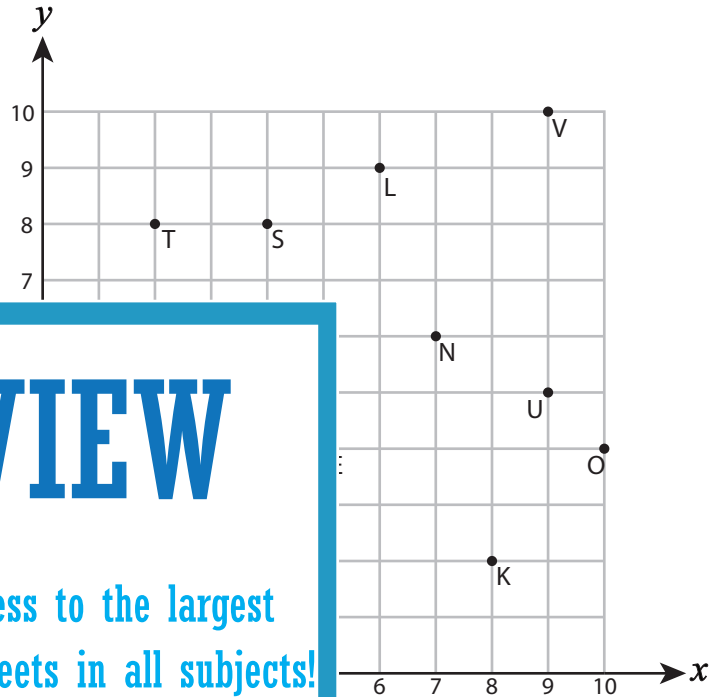
3) (2, 5) H

4) (1, 1) I

5) (1, 4) A

7) (4, 2) M

9) (4, 8) S



PREVIEW

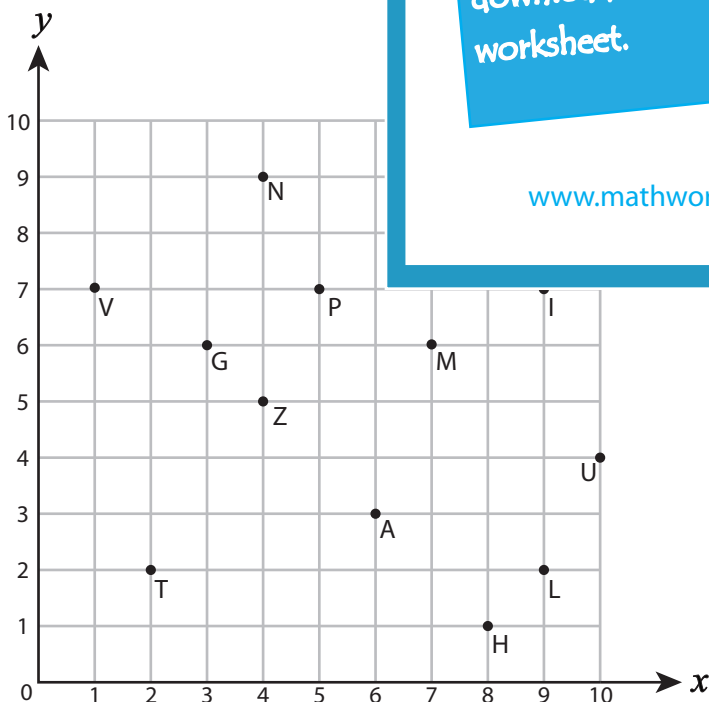
Gain complete access to the largest collection of worksheets in all subjects!

Members, please log in to download this worksheet.

Not a member? Please sign up to gain complete access.

www.mathworksheets4kids.com

B) Write the ordered pair for



12) H (8 , 1)

14) U (10 , 4)

15) N (4 , 9)

16) G (3 , 6)

17) I (9 , 7)

18) Z (4 , 5)

19) T (2 , 2)

20) P (5 , 7)