

Identifying Ordered Pairs

A) Write the point that is located at each ordered pair.

1) (1, 4) _____

2) (9, 8) _____

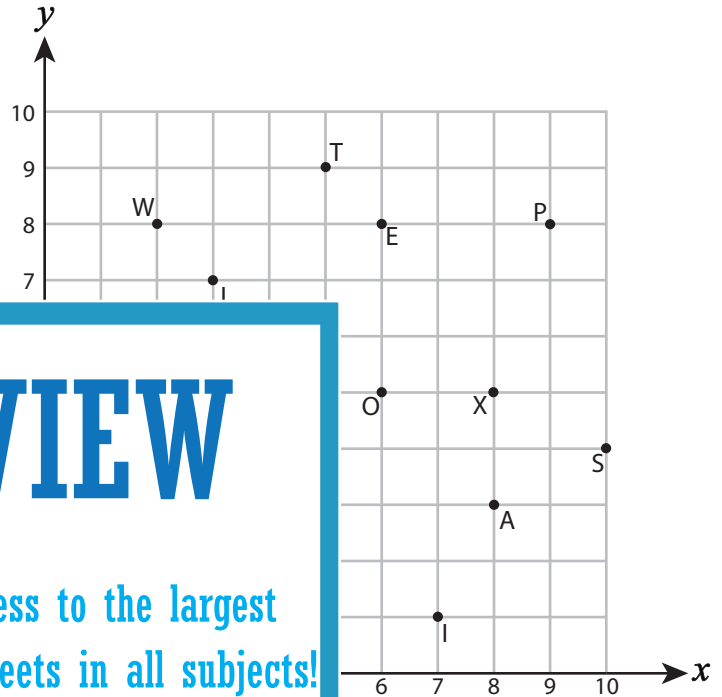
3) (5, 9) _____

4) (5, 2) _____

5) (6, 8) _____

7) (6, 5) _____

9) (10, 4) _____



PREVIEW

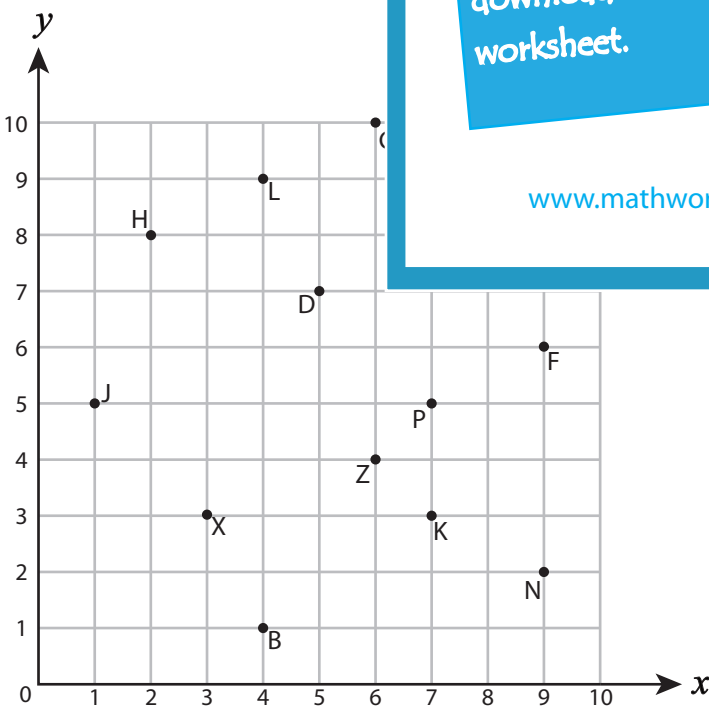
Gain complete access to the largest collection of worksheets in all subjects!

Members, please log in to download this worksheet.

Not a member? Please sign up to gain complete access.

www.mathworksheets4kids.com

B) Write the ordered pair for



12) Z (_____ , _____)

14) L (_____ , _____)

15) M (_____ , _____)

16) J (_____ , _____)

17) N (_____ , _____)

18) B (_____ , _____)

19) D (_____ , _____)

20) X (_____ , _____)

Name : _____

Answer Key

Identifying Ordered Pairs

Positive: S4

A) Write the point that is located at each ordered pair.

1) (1, 4) Y

2) (9, 8) P

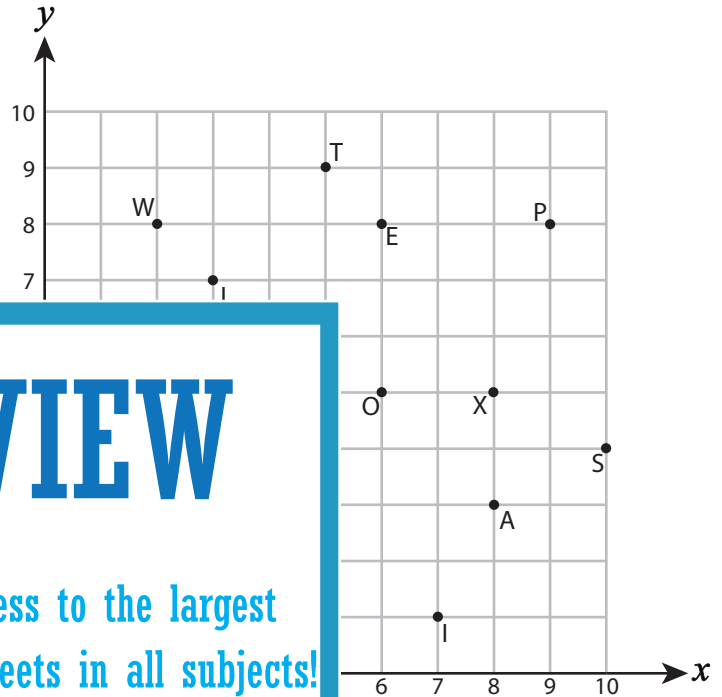
3) (5, 9) T

4) (5, 2) U

5) (6, 8) E

7) (6, 5) O

9) (10, 4) S



PREVIEW

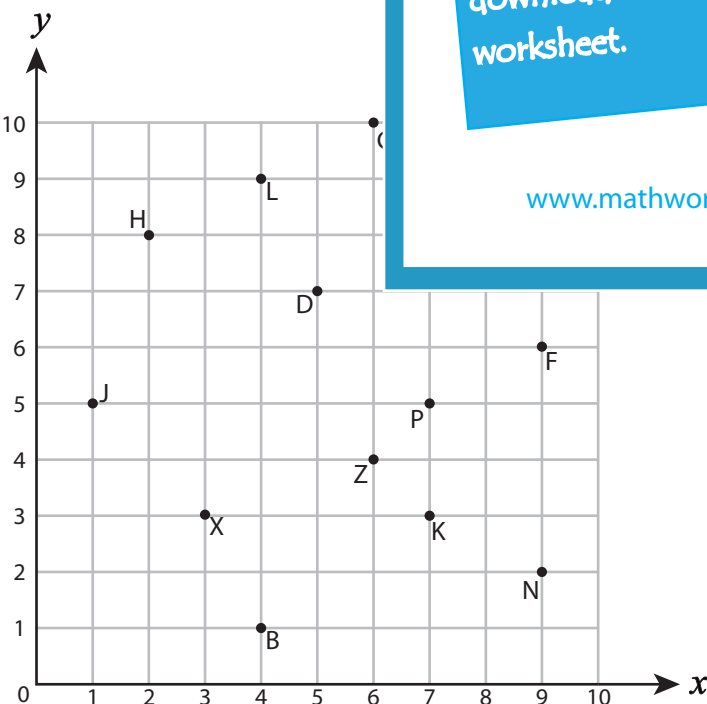
Gain complete access to the largest collection of worksheets in all subjects!

Members, please log in to download this worksheet.

Not a member? Please sign up to gain complete access.

www.mathworksheets4kids.com

B) Write the ordered pair for



12) Z (6 , 4)

14) L (4 , 9)

15) M (8 , 9)

16) J (1 , 5)

17) N (9 , 2)

18) B (4 , 1)

19) D (5 , 7)

20) X (3 , 3)