

Identifying Ordered Pairs

A) Write the point that is located at each ordered pair.

1) (6, 8) _____

2) (4, 1) _____

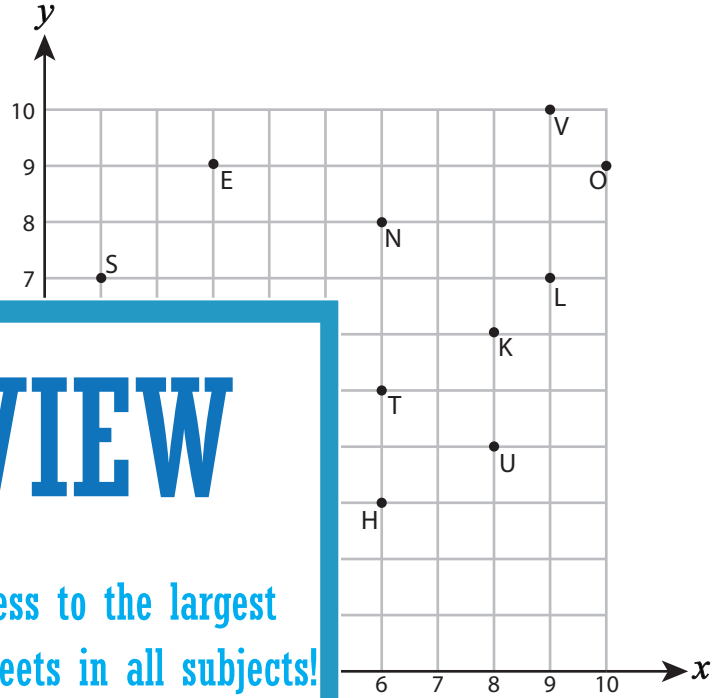
3) (1, 7) _____

4) (6, 3) _____

5) (3, 6) _____

7) (6, 5) _____

9) (2, 4) _____



PREVIEW

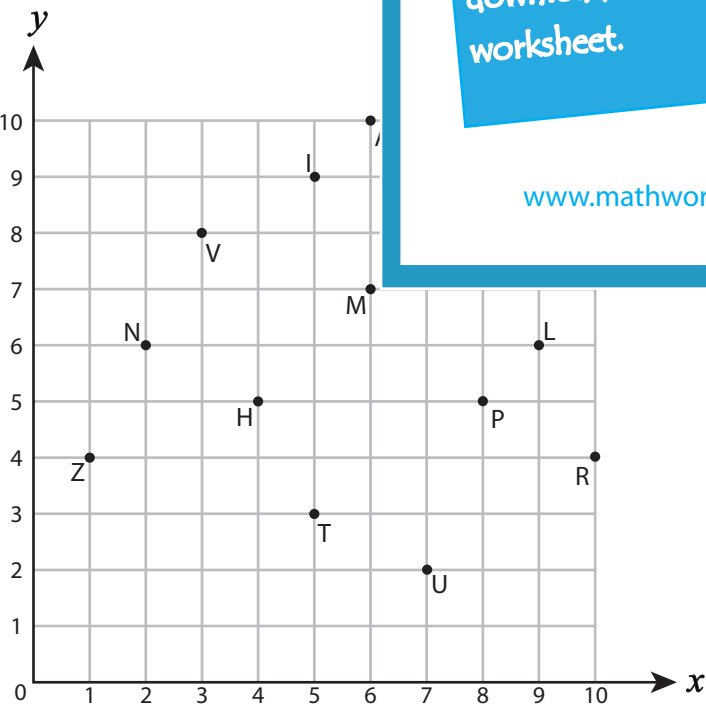
Gain complete access to the largest collection of worksheets in all subjects!

Members, please log in to download this worksheet.

Not a member? Please sign up to gain complete access.

www.mathworksheets4kids.com

B) Write the ordered pair for



- 12) T (_____ , _____)
- 14) Z (_____ , _____)
- 15) U (_____ , _____)
- 16) H (_____ , _____)
- 17) A (_____ , _____)
- 18) N (_____ , _____)
- 19) G (_____ , _____)
- 20) I (_____ , _____)

Name : _____

Answer Key

Identifying Ordered Pairs

Positive: S5

A) Write the point that is located at each ordered pair.

1) (6, 8) N

2) (4, 1) A

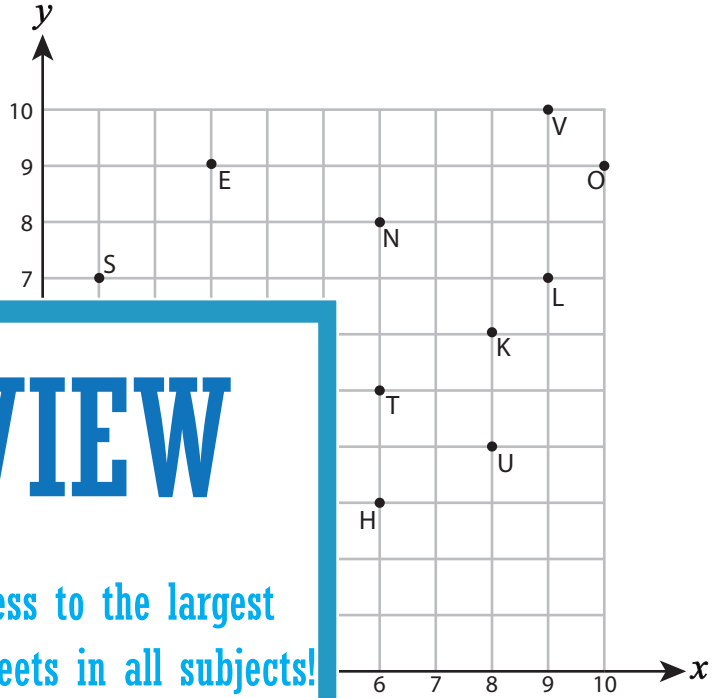
3) (1, 7) S

4) (6, 3) H

5) (3, 6) M

7) (6, 5) T

9) (2, 4) I



PREVIEW

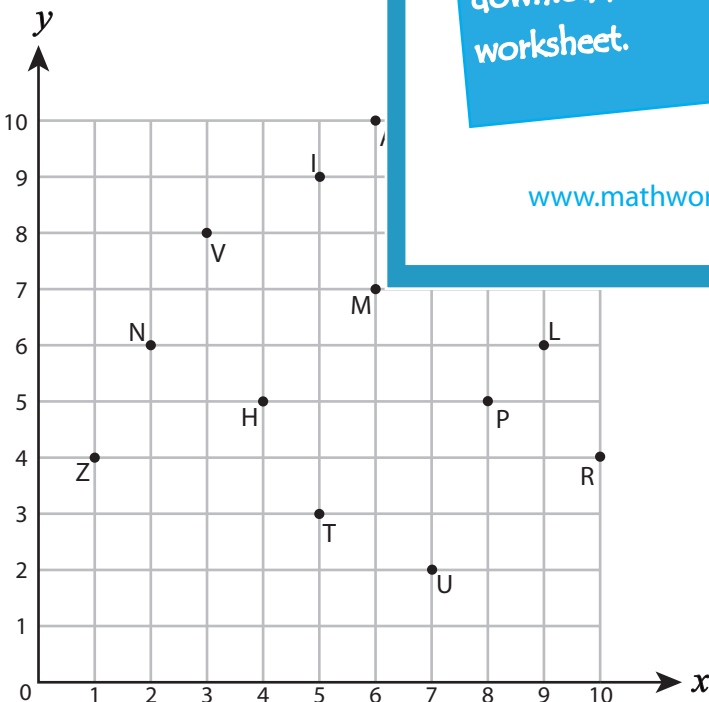
Gain complete access to the largest collection of worksheets in all subjects!

Members, please log in to download this worksheet.

Not a member? Please sign up to gain complete access.

www.mathworksheets4kids.com

B) Write the ordered pair for



12) T (5 , 3)

14) Z (1 , 4)

15) U (7 , 2)

16) H (4 , 5)

17) A (6 , 10)

18) N (2 , 6)

19) G (8 , 9)

20) I (5 , 9)