

A) Write the ordered pair for each sea creature located at each ordered pair.

1)  \_\_\_\_\_ /) ( 1, 6 ) \_\_\_\_\_

2)  \_\_\_\_\_

3)  \_\_\_\_\_

4)  \_\_\_\_\_

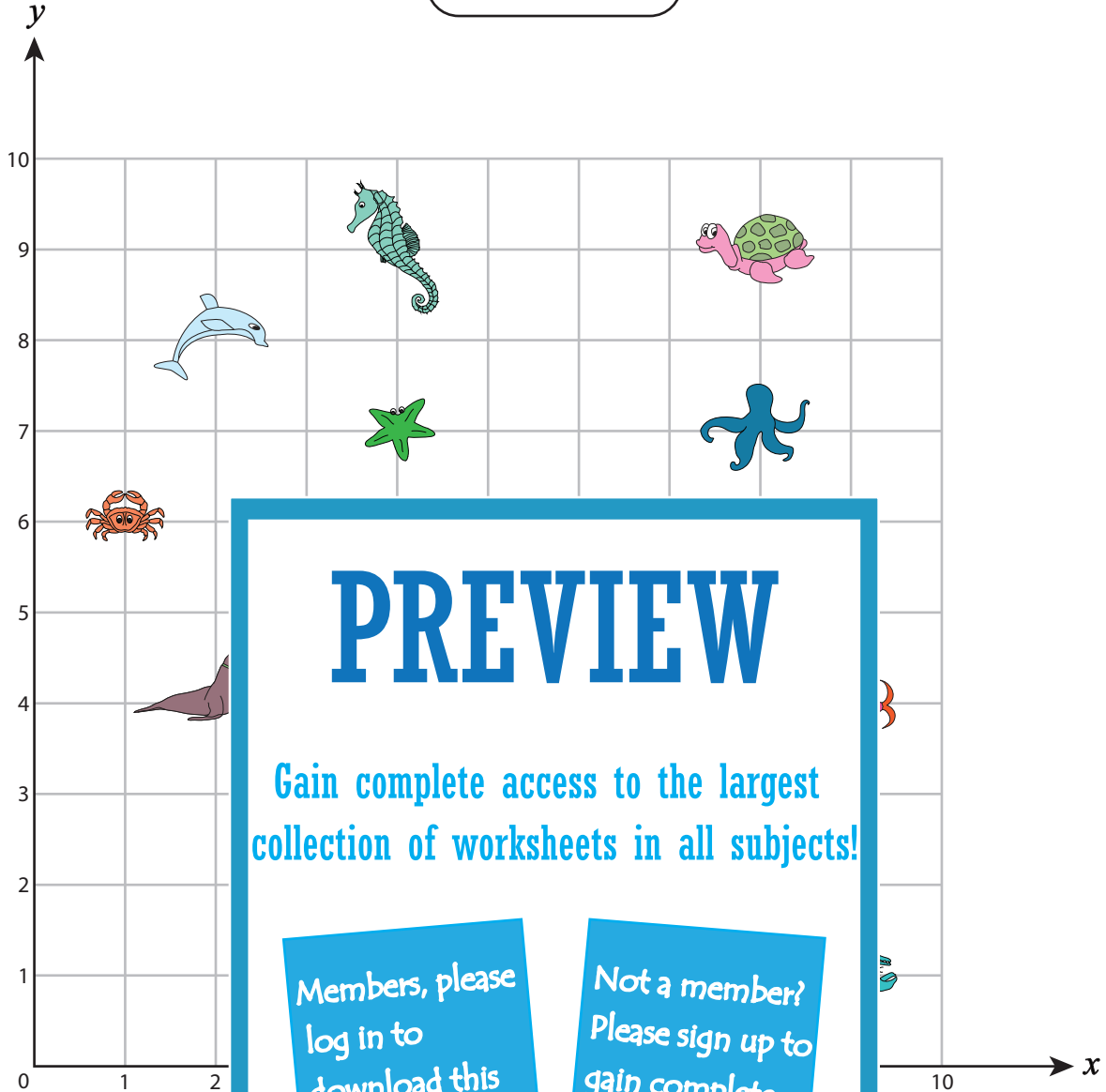
5)  \_\_\_\_\_

Name : \_\_\_\_\_






Answer key

Positive: S2

Ordered Pairs



A) Write the ordered pair for each sea creature located at each ordered pair.

- 1)  \_\_\_\_\_ ( 8, 7 ) \_\_\_\_\_ Jelly fish
- 2)  \_\_\_\_\_ ( 9, 1 ) \_\_\_\_\_ /) ( 1, 6 ) \_\_\_\_\_ Crab
- 3)  \_\_\_\_\_ ( 7, 3 ) \_\_\_\_\_ 8) ( 4, 7 ) \_\_\_\_\_ Star fish
- 4)  \_\_\_\_\_ ( 8, 7 ) \_\_\_\_\_ 9) ( 8, 9 ) \_\_\_\_\_ Turtle
- 5)  \_\_\_\_\_ ( 2, 4 ) \_\_\_\_\_ 10) ( 9, 4 ) \_\_\_\_\_ Fish