

PREVIEW

Gain complete access to the largest collection of worksheets in all subjects!






Members, please log in to download this worksheet.

Not a member? Please sign up to gain complete access.

www.mathworksheets4kids.com

A) Write the ordered pair for

each bird at each ordered pair.

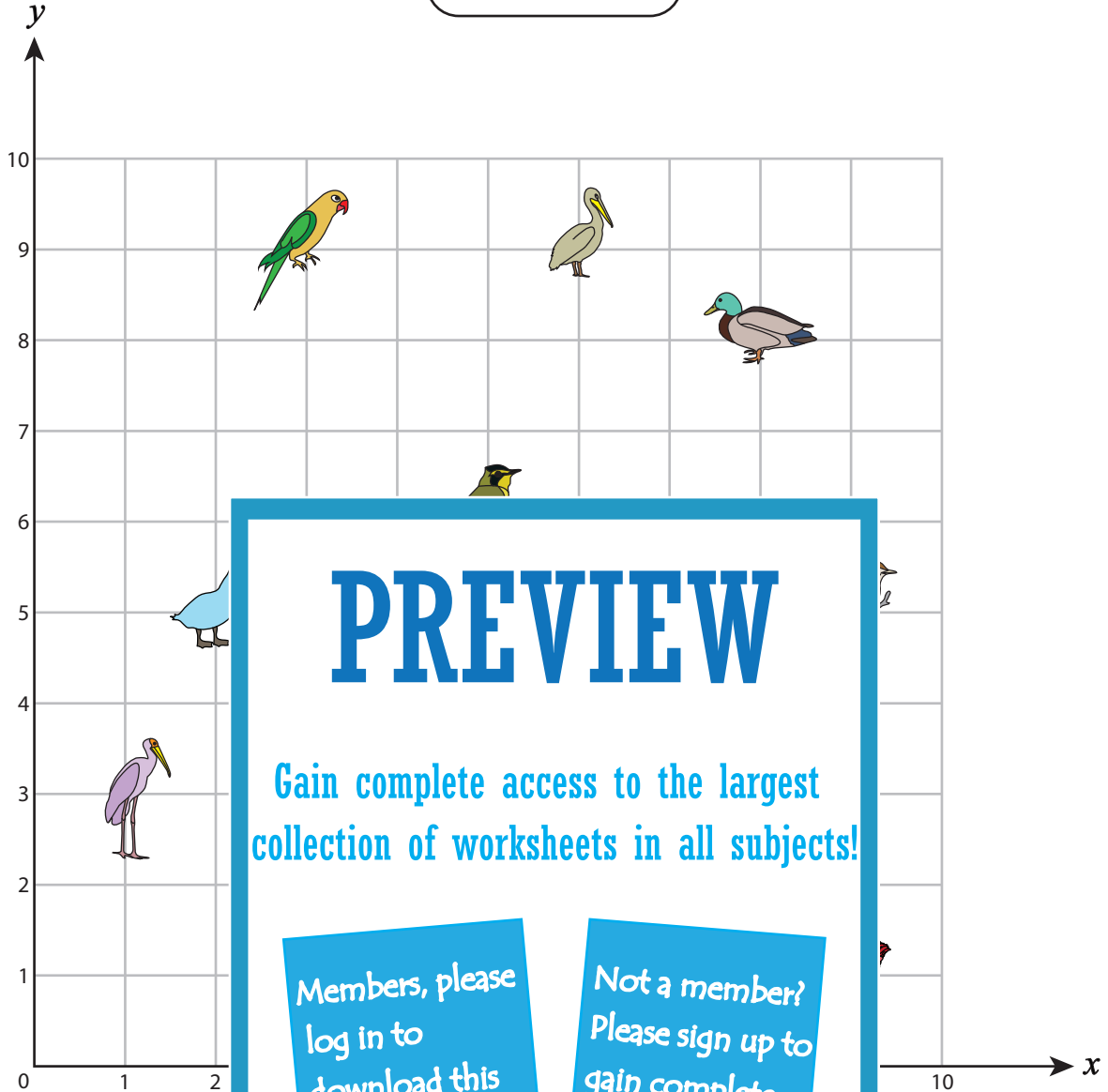
- | | | | | | |
|----|---|-------|-----|----------|-------|
| 1) |  | _____ | | _____ | _____ |
| 2) |  | _____ | 7) | (2, 5) | _____ |
| 3) |  | _____ | 8) | (9, 1) | _____ |
| 4) |  | _____ | 9) | (3, 9) | _____ |
| 5) |  | _____ | 10) | (5, 3) | _____ |

Name : _____

Answer key






Positive: S3

Ordered Pairs



A) Write the ordered pair for

each bird at each ordered pair.

- 1)  _____ (_____) _____ **Ostrich**
- 2)  _____ **(5, 6)** _____ 7) (2, 5) _____ **Duck**
- 3)  _____ **(8, 3)** _____ 8) (9, 1) _____ **Hen**
- 4)  _____ **(6, 1)** _____ 9) (3, 9) _____ **Parrot**
- 5)  _____ **(6, 9)** _____ 10) (5, 3) _____ **Eagle**