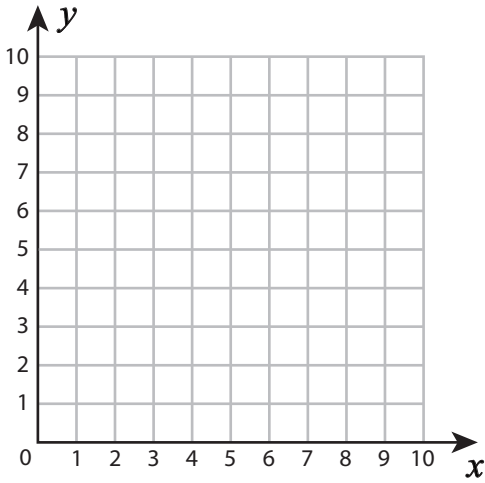


Plotting Points - Shapes

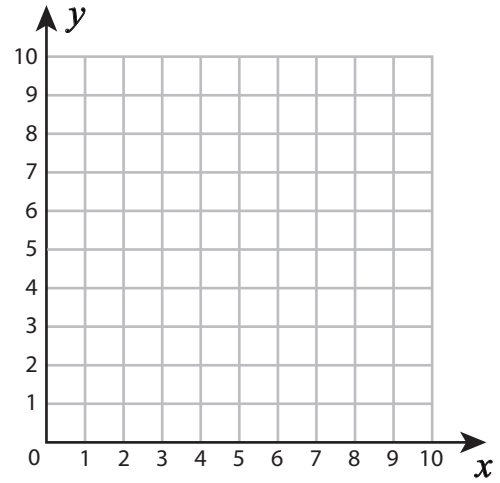
Plot and join the points in the given order. Complete the figure by joining the end points. Identify the shape.

1) $(2, 8), (3, 9), (5, 9), (6, 8), (5, 7), (3, 7)$



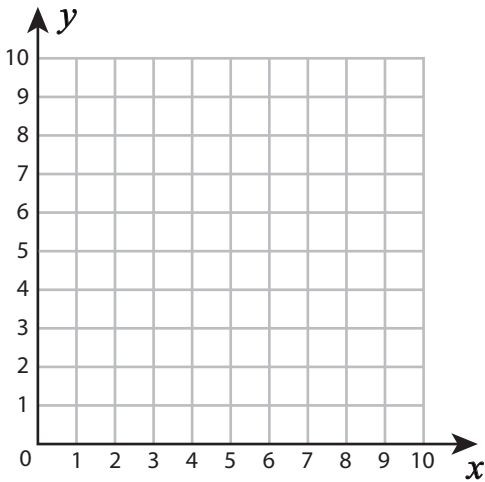
Shape: _____

2) $(5, 5), (9, 5), (9, 1), (5, 1)$



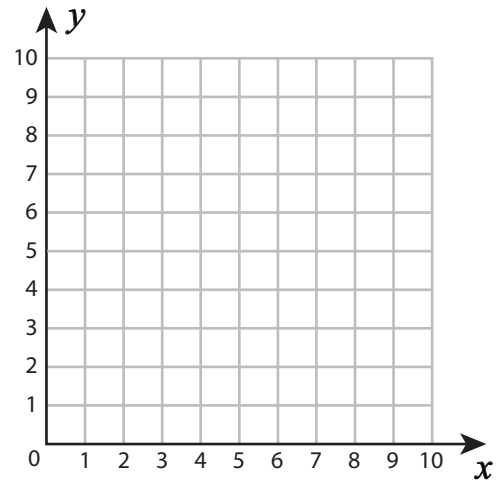
Shape: _____

3) $(2, 4), (3, 7), (7, 7), (6, 4)$



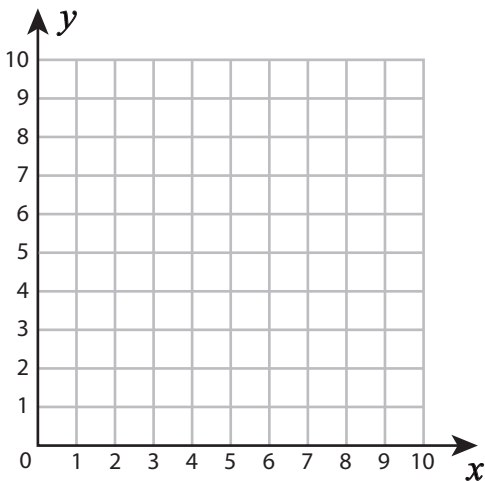
Shape: _____

4) $(3, 9), (7, 5), (3, 2)$



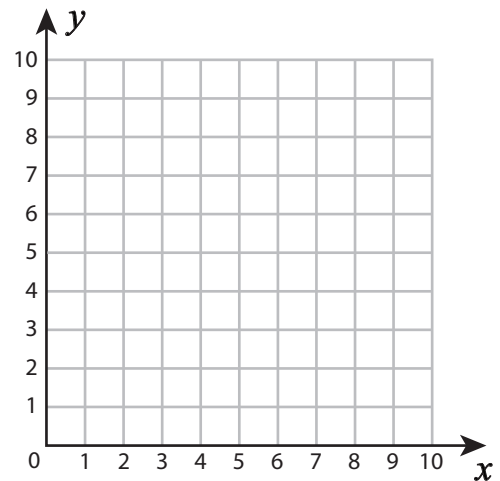
Shape: _____

5) $(2, 7), (8, 7), (8, 3), (2, 3)$



Shape: _____

6) $(4, 7), (7, 7), (10, 4), (1, 4)$

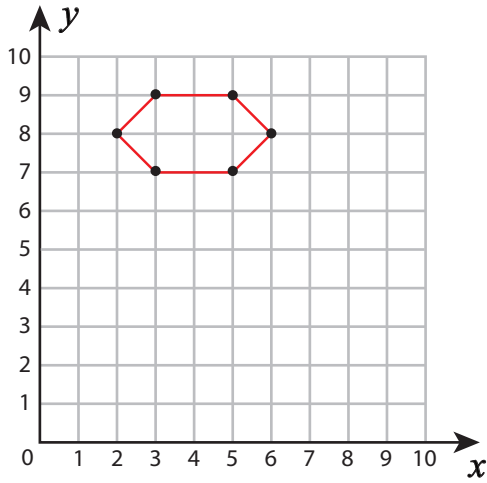


Shape: _____

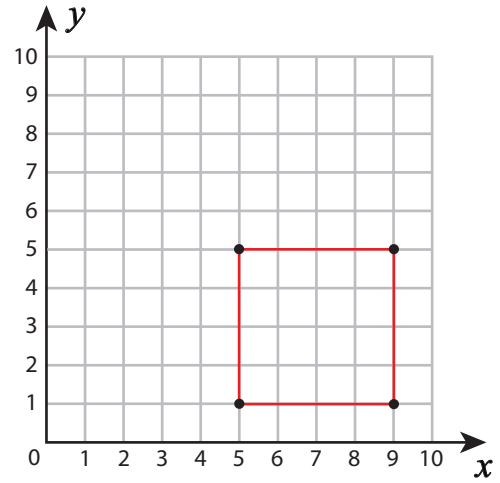
Plotting Points - Shapes

Plot and join the points in the given order. Complete the figure by joining the end points. Identify the shape.

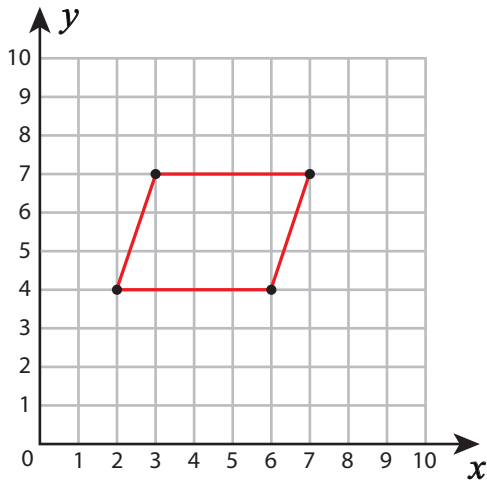
1) $(2, 8), (3, 9), (5, 9), (6, 8), (5, 7), (3, 7)$

Shape: Hexagon

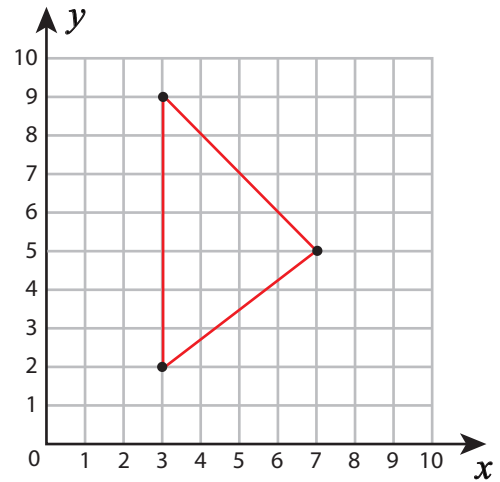
2) $(5, 5), (9, 5), (9, 1), (5, 1)$

Shape: Square

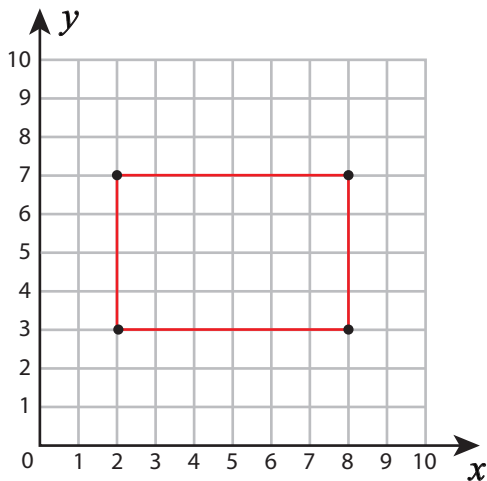
3) $(2, 4), (3, 7), (7, 7), (6, 4)$

Shape: Parallelogram

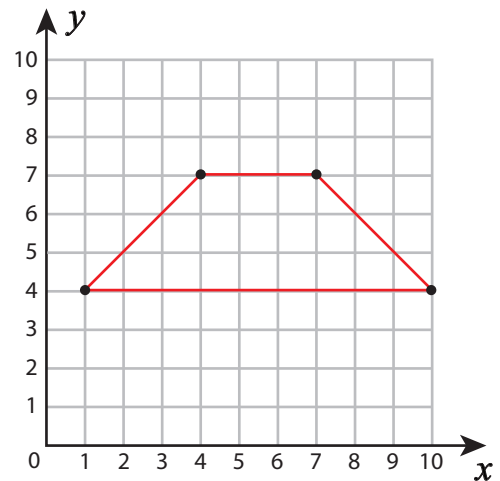
4) $(3, 9), (7, 5), (3, 2)$

Shape: Triangle

5) $(2, 7), (8, 7), (8, 3), (2, 3)$

Shape: Rectangle

6) $(4, 7), (7, 7), (10, 4), (1, 4)$

Shape: Trapezoid