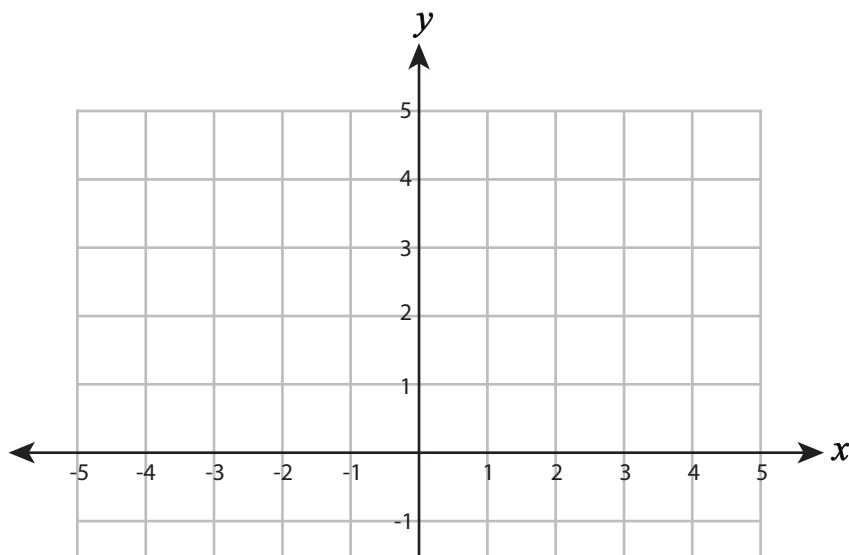
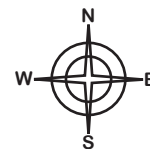


Name : _____

Moving the Points

Sheet 1



PREVIEW

Gain complete access to the largest collection of worksheets in all subjects!

Members, please log in to download this worksheet.

Not a member? Please sign up to gain complete access.

www.mathworksheets4kids.com

Find the coordinate

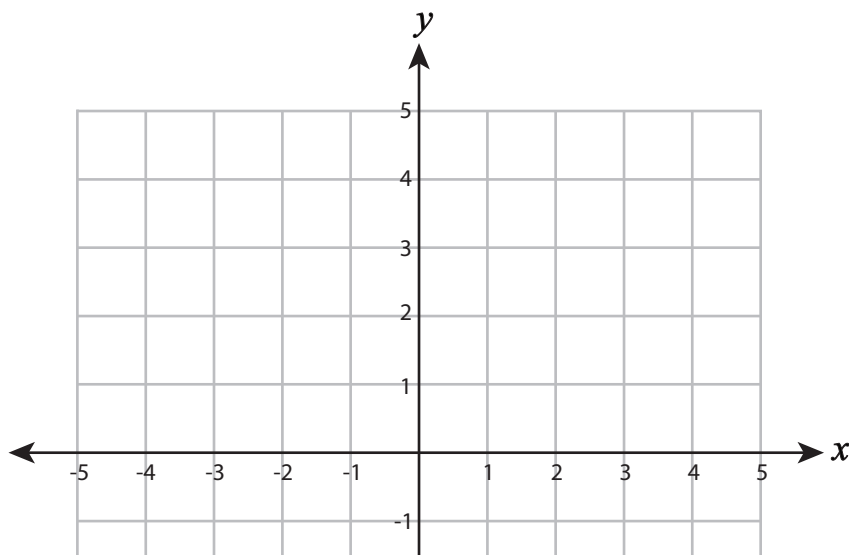
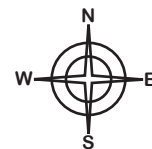
Start		End
(0, 3)		
(-2, 4)		
(-1, -5)		
(3, 4)	4 units west and 2 units south	
(5, -1)	6 units north and 3 units west	

1) You are at (2, 1). Move 2 units west and 3 units north. Where do you land?

2) You are at (-5, -4). Move 4 units east and 2 units north. Where do you land?

Name : _____

Moving the Points



PREVIEW

Gain complete access to the largest collection of worksheets in all subjects!

Members, please log in to download this worksheet.

Not a member? Please sign up to gain complete access.

www.mathworksheets4kids.com

Find the coordinate

Start		End
(0, 3)		(3, 0)
(-2, 4)		(-4, -3)
(-1, -5)		(1, 0)
(3, 4)	4 units west and 2 units south	(-1, 2)
(5, -1)	6 units north and 3 units west	(2, 5)

1) You are at (2, 1). Move 2 units west and 3 units north. Where do you land? **(0, 4)**

2) You are at (-5, -4). Move 4 units east and 2 units north. Where do you land? **(-1, -2)**