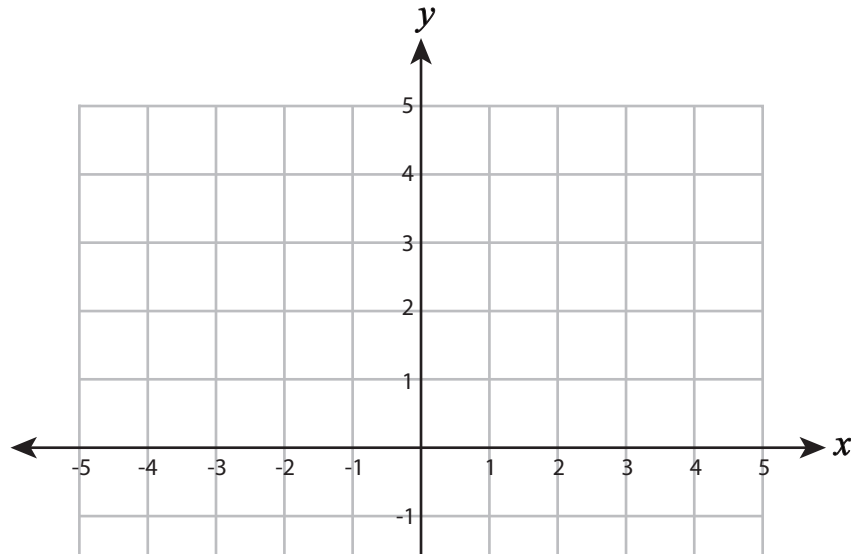
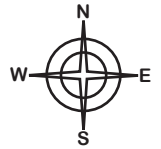


Name : \_\_\_\_\_

## Moving the Points

Sheet 2



# PREVIEW

Gain complete access to the largest collection of worksheets in all subjects!

Members, please log in to download this worksheet.

Not a member? Please sign up to gain complete access.

[www.mathworksheets4kids.com](http://www.mathworksheets4kids.com)

Find the coordinate

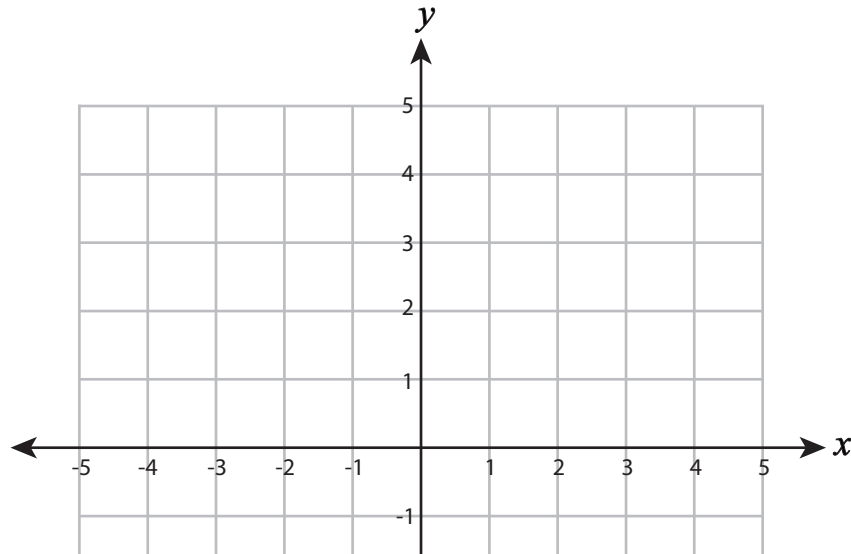
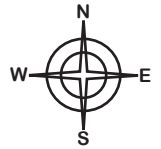
Start		End
(-5, -5)		
(3, 2)		
(0, -5)		
(1, -2)	3 units east and 2 units south	
(-3, -2)	5 units east and 4 units north	

1) You are at  $(-1, 3)$ . Move 3 units west and 2 units north. Where do you land? \_\_\_\_\_

2) You are at  $(4, 4)$ . Move 5 units south and 5 units west. Where do you land? \_\_\_\_\_

Name : \_\_\_\_\_

Moving the Points



# PREVIEW

Gain complete access to the largest collection of worksheets in all subjects!

Members, please log in to download this worksheet.

Not a member? Please sign up to gain complete access.

[www.mathworksheets4kids.com](http://www.mathworksheets4kids.com)

Find the coordinate

Start		End
(-5, -5)		(-3, 1)
(3, 2)		(-4, -2)
(0, -5)		(5, 3)
(1, -2)	3 units east and 2 units south	(4, -4)
(-3, -2)	5 units east and 4 units north	(2, 2)

1) You are at (-1, 3). Move 3 units west and 2 units north. Where do you land?           (-4, 5)          

2) You are at (4, 4). Move 5 units south and 5 units west. Where do you land?           (-1, -1)