


Identifying Quadrant

A) Write at which quadrant each insect is.











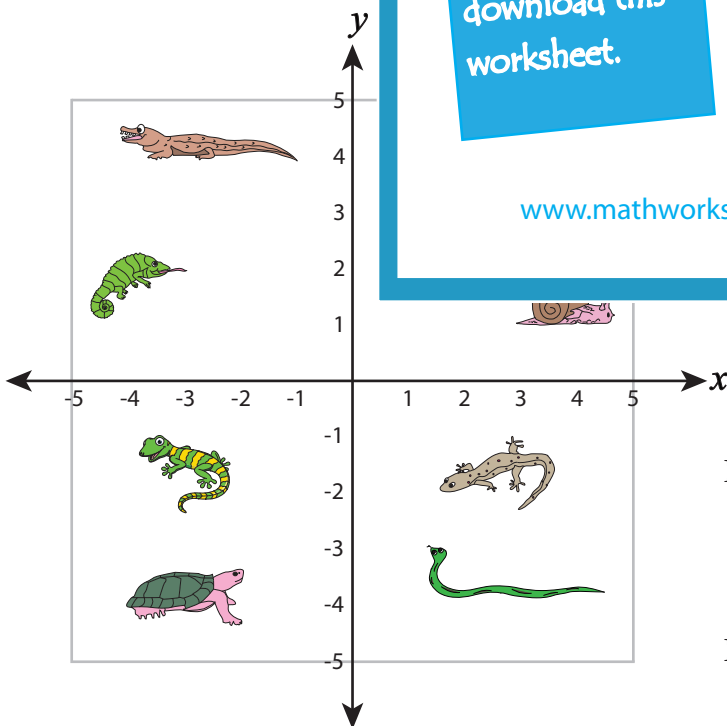
PREVIEW
Gain complete access to the largest collection of worksheets in all subjects!

Members, please log in to download this worksheet.

Not a member? Please sign up to gain complete access.

www.mathworksheets4kids.com

B) Write which reptile is at each point.




III - quadrant : _____ , _____

IV - quadrant : _____ , _____

Identifying Quadrant

A) Write at which quadrant each insect is.



IV - quadrant



I - quadrant



III - quadrant



II - quadrant



I - quadrant

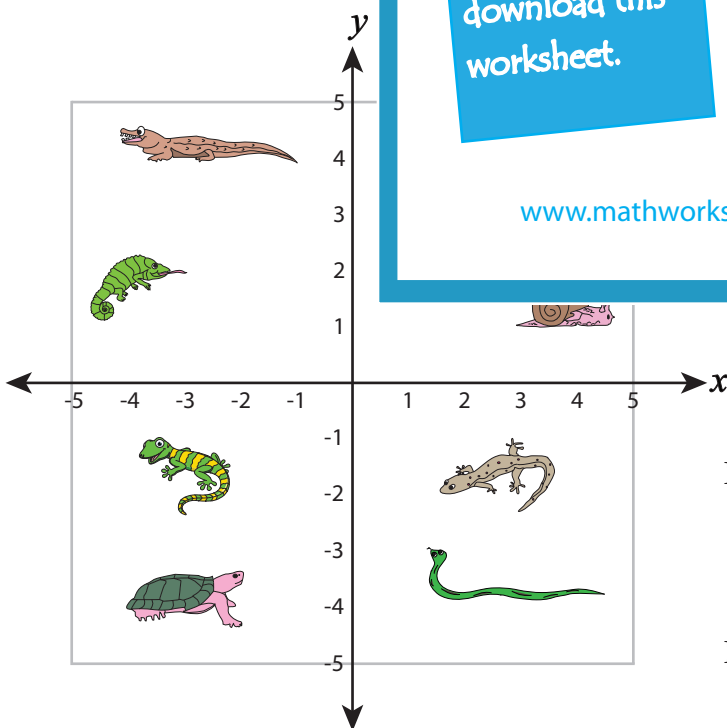
PREVIEW
Gain complete access to the largest collection of worksheets in all subjects!

Members, please log in to download this worksheet.

Not a member? Please sign up to gain complete access.

www.mathworksheets4kids.com

B) Write which reptile is at each point.



Lizard

Snail

Chameleon

Chameleon

III - quadrant : Gecko , Turtle

IV - quadrant : Lizard , Snake