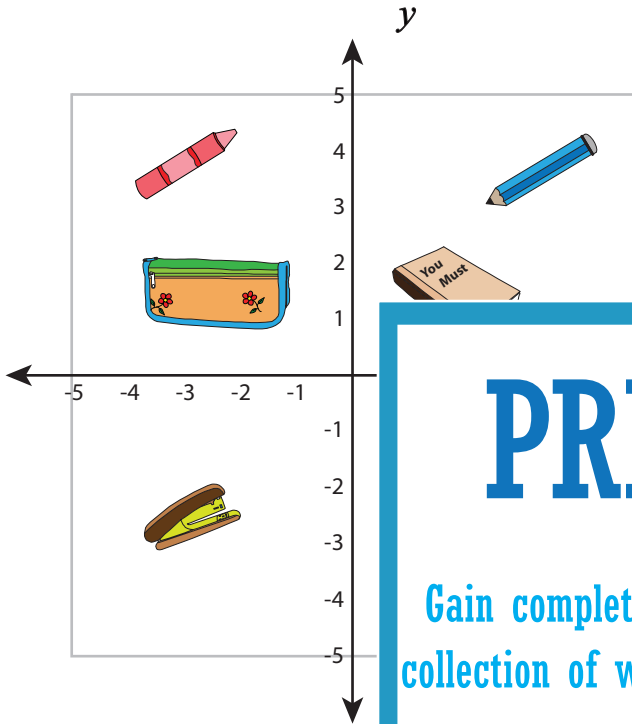
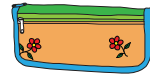


**Identifying Quadrant**

A) Write at which quadrant each stationery item is.



\_\_\_\_\_



\_\_\_\_\_

# PREVIEW

Gain complete access to the largest collection of worksheets in all subjects!

Members, please log in to download this worksheet.

Not a member? Please sign up to gain complete access.

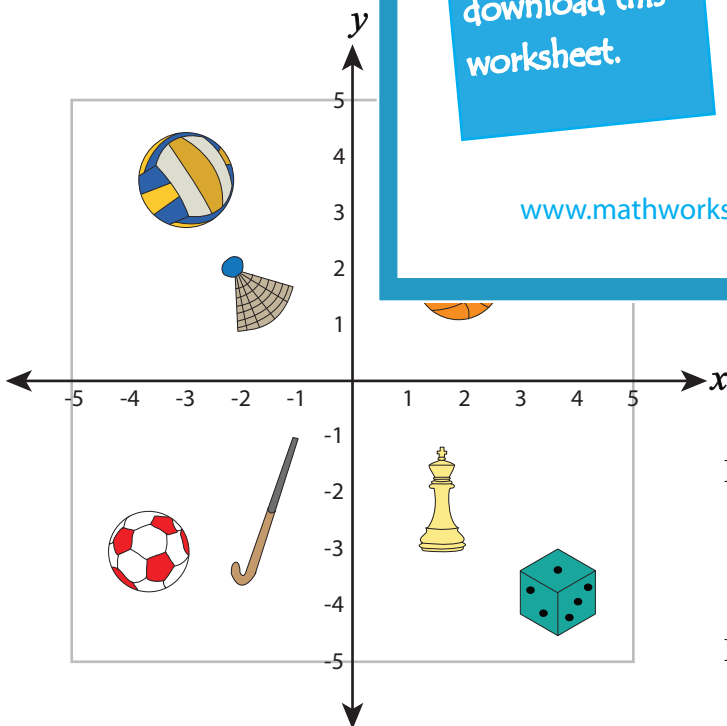
www.mathworksheets4kids.com

\_\_\_\_\_

\_\_\_\_\_

\_\_\_\_\_

B) Write which sports equipment



III - quadrant : \_\_\_\_\_ / \_\_\_\_\_

IV - quadrant : \_\_\_\_\_ / \_\_\_\_\_

Name : \_\_\_\_\_

**Answer Key**

**Identifying Quadrant**

A) Write at which quadrant each stationery item is.

**IV - quadrant**

**II - quadrant**

**II - quadrant**

**I - quadrant**

**III - quadrant**

B) Write which sports equipment is in which quadrant.

**II Bat** , **Basketball**

**Shuttlecock**

**III - quadrant :** **Hockey Stick** , **Soccer Ball**

**IV - quadrant :** **Chess piece** , **Dice**