

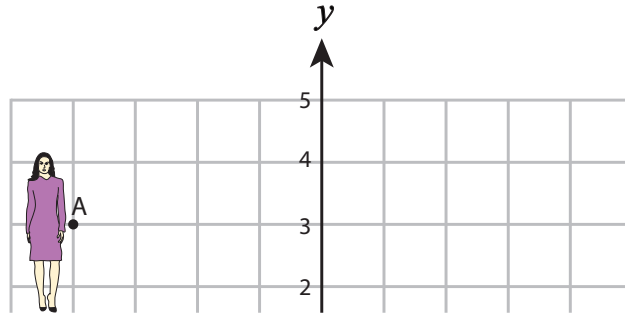
Name : \_\_\_\_\_

## Showing Route

All quadrants: S3

Help each person find the missing item by plotting the points and connecting them.

1)  $(-2, 2), (0, 3), (3, 3), (5, 2), (3, 1), (0, 1), (-2, -1), (1, 0), (2, -2), (2, -3)$



← **PREVIEW** →

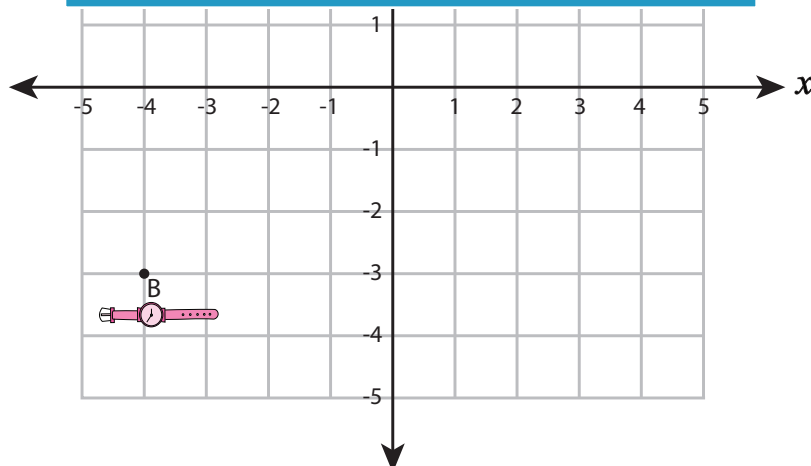
Gain complete access to the largest collection of worksheets in all subjects!

Members, please log in to download this worksheet.

Not a member? Please sign up to gain complete access.

[www.mathworksheets4kids.com](http://www.mathworksheets4kids.com)

2)  $(4, 1), (2, 3), (1, 1), (3, -$



Name : \_\_\_\_\_

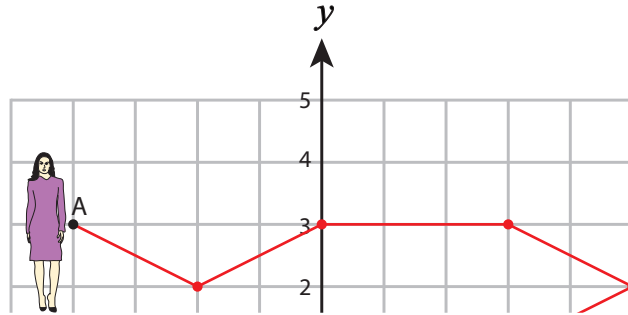
**Answer Key**

**Showing Route**

All quadrants: S3

Help each person find the missing item by plotting the points and connecting them.

- 1)  $(-2, 2), (0, 3), (3, 3), (5, 2), (3, 1), (0, 1), (-2, -1), (1, 0), (2, -2), (2, -3)$



**PREVIEW**

Gain complete access to the largest collection of worksheets in all subjects!

Members, please log in to download this worksheet.

Not a member? Please sign up to gain complete access.

[www.mathworksheets4kids.com](http://www.mathworksheets4kids.com)

- 2)  $(4, 1), (2, 3), (1, 1), (3, -$

