

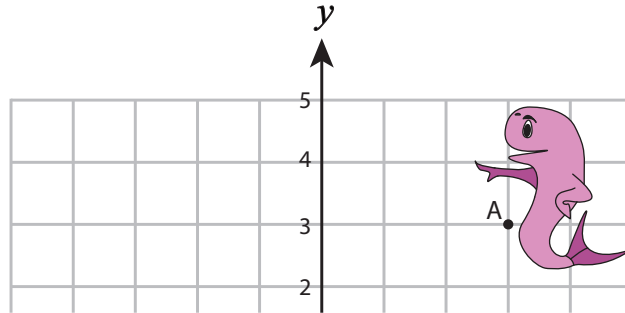
Name : _____

Showing Route

All quadrants: S5

Help each animal find its friend by plotting the points and connecting them.

1) $(2, 2), (1, 3), (0, 3), (-3, 3), (-1, 1), (1, 0), (3, -1), (3, -2), (1, -3), (-1, -1)$



← **PREVIEW** →

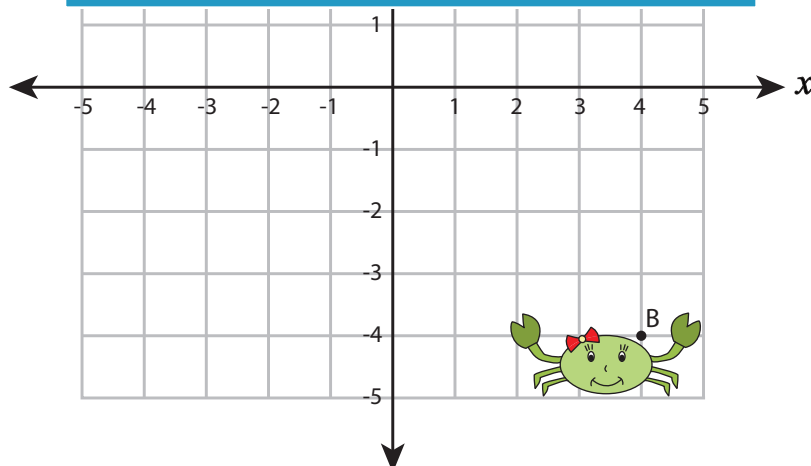
Gain complete access to the largest collection of worksheets in all subjects!

Members, please log in to download this worksheet.

Not a member? Please sign up to gain complete access.

www.mathworksheets4kids.com

2) $(-3, 2), (-3, 0), (-2, -2), ($



Name : _____

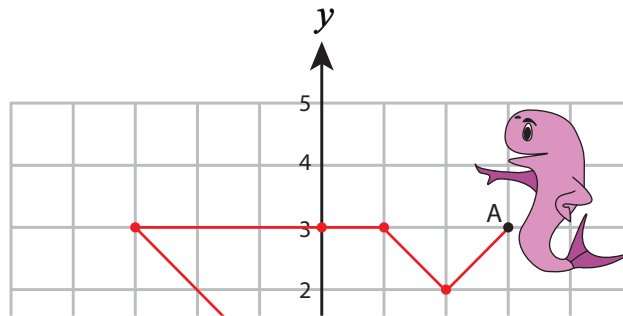
Answer Key

All quadrants: S5

Showing Route

Help each animal find its friend by plotting the points and connecting them.

1) $(2, 2), (1, 3), (0, 3), (-3, 3), (-1, 1), (1, 0), (3, -1), (3, -2), (1, -3), (-1, -1)$



PREVIEW

Gain complete access to the largest collection of worksheets in all subjects!

Members, please log in to download this worksheet.

Not a member? Please sign up to gain complete access.

www.mathworksheets4kids.com

2) $(-3, 2), (-3, 0), (-2, -2), (0, 1), (2, 0), (3, -2), (4, -3), (4, -4), (2, -3), (1, -1), (-1, -2), (-3, -2)$

