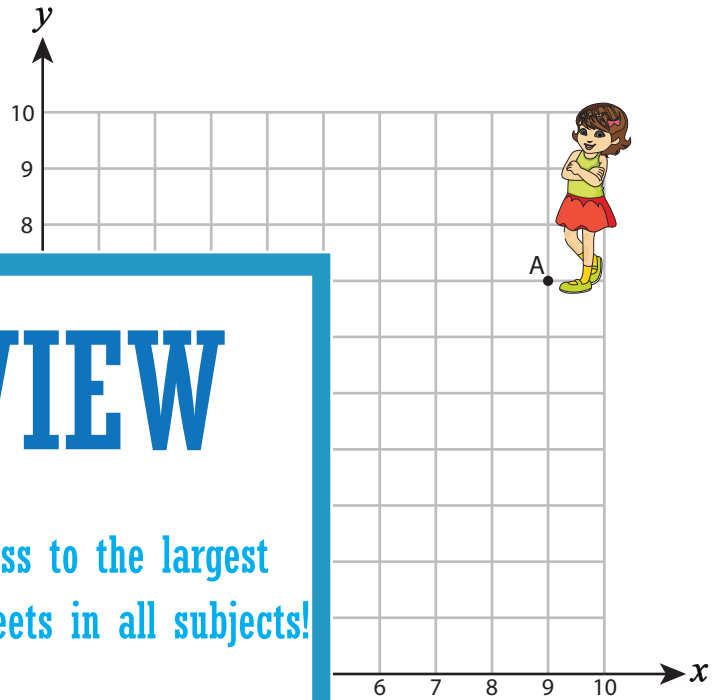
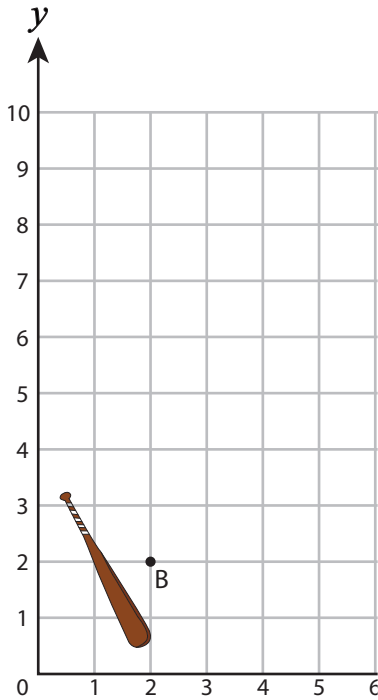


Showing Route

Help the players find their sports equipment by plotting the points and connecting them.

1) $(8, 6), (6, 6), (6, 4), (4, 4), (4, 2)$

2) $(1, 4), (3, 4), (3, 6), (6, 6), (6, 7)$



PREVIEW

Gain complete access to the largest collection of worksheets in all subjects!

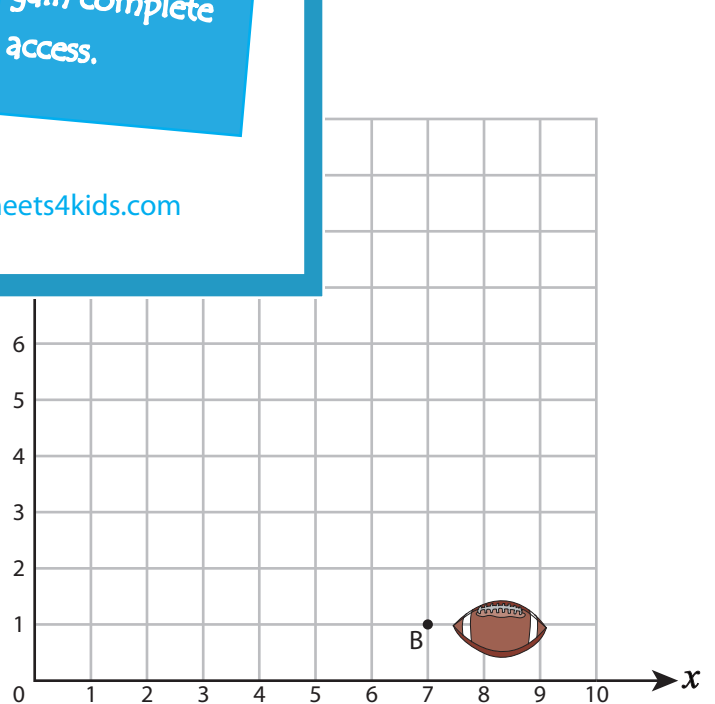
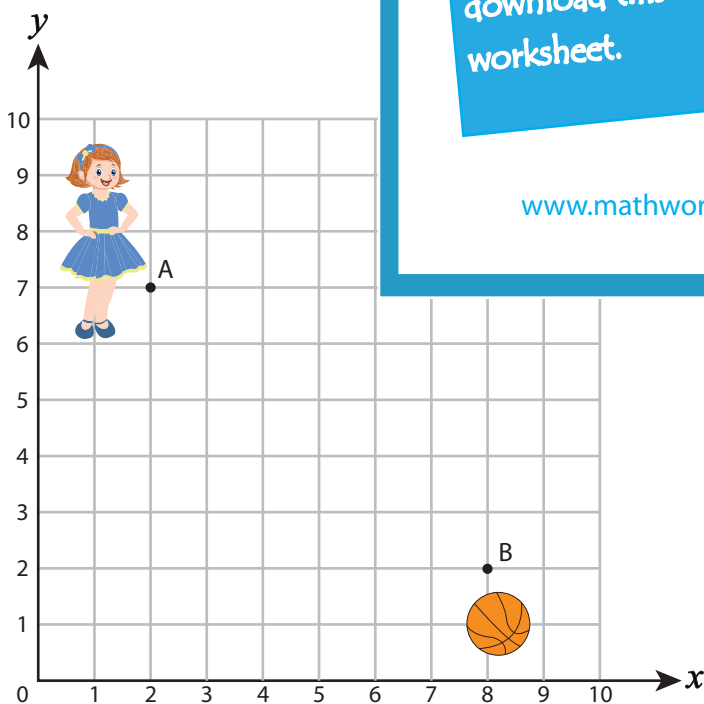
Members, please log in to download this worksheet.

Not a member? Please sign up to gain complete access.

www.mathworksheets4kids.com

3) $(4, 7), (4, 5), (6, 5), (6, 3)$

$(6, 4), (7, 4)$



Name : _____

Answer Key

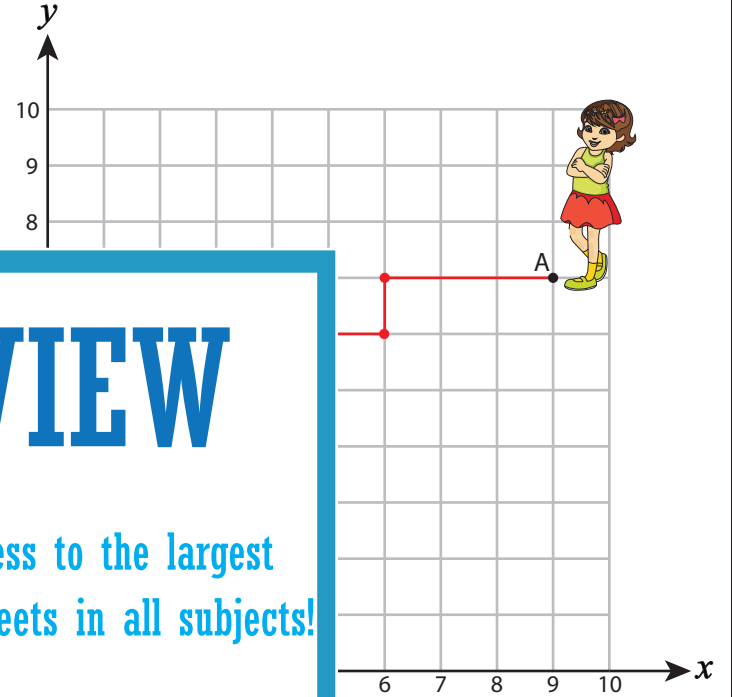
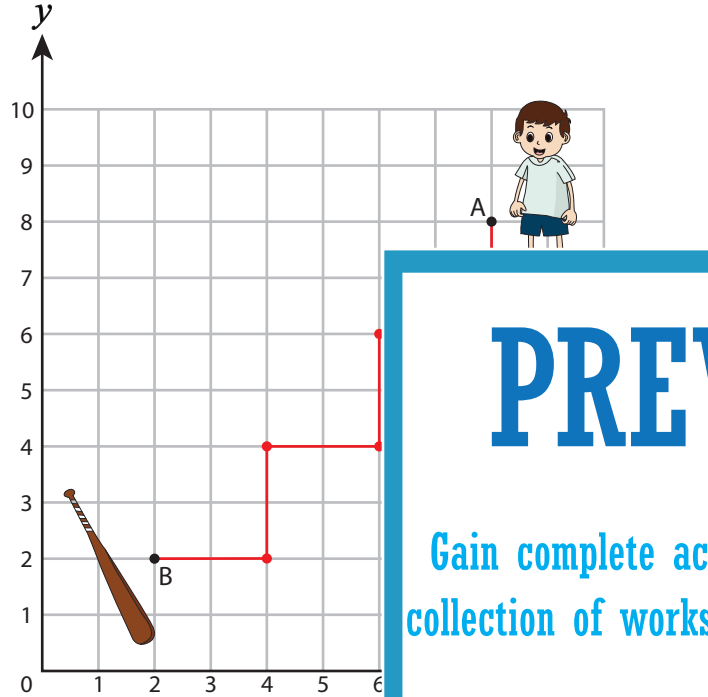
Showing Route

Positive: S4

Help the players find their sports equipment by plotting the points and connecting them.

1) $(8, 6), (6, 6), (6, 4), (4, 4), (4, 2)$

2) $(1, 4), (3, 4), (3, 6), (6, 6), (6, 7)$



PREVIEW

Gain complete access to the largest collection of worksheets in all subjects!

Members, please log in to download this worksheet.

Not a member? Please sign up to gain complete access.

www.mathworksheets4kids.com

3) $(4, 7), (4, 5), (6, 5), (6, 3)$

$(6, 4), (7, 4)$

