




# Ordering Numbers

1)

| Butterflies in a Garden |   |
|-------------------------|---|
| Day                     | Number of Butterflies   |
| Day 1                   |  |
| Day 2                   |  |
| Day 3                   |  |
| Day 4                   |   |




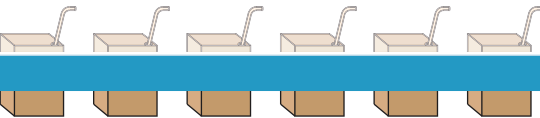
- i) Arrange the numbers of butterflies visiting the garden each day from highest to lowest.

# PREVIEW

Gain complete access to the largest collection of worksheets in all subjects!

 = 5 butterflies

2)

| Juice      |   |
|------------|---|
| Grape      |  |
| Apple      |  |
| Strawberry |  |
| Pineapple  |  |

Members, please log in to download this worksheet.

Not a member? Please sign up to gain complete access.

[www.mathworksheets4kids.com](http://www.mathworksheets4kids.com)



**Key**

= 10 people