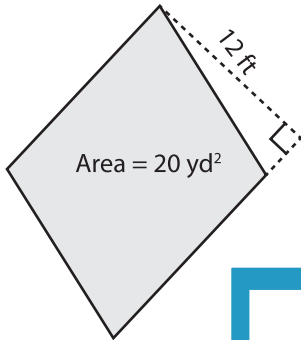


## Parallelogram - Finding Base/Height

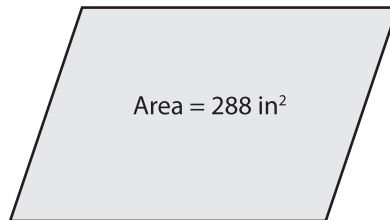
Find the base or height of each parallelogram.

1)

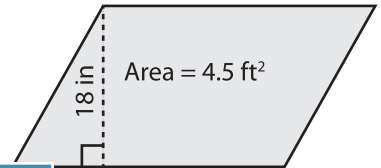


Base = \_\_\_\_\_

2)

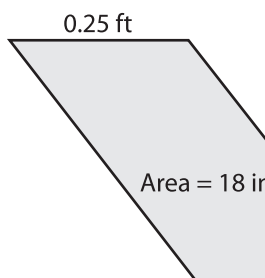


3)



Base = \_\_\_\_\_ ft

4)



Height = \_\_\_\_\_

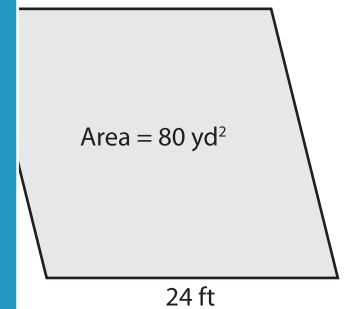
# PREVIEW

Gain complete access to the largest collection of worksheets in all subjects!

Members, please log in to download this worksheet.

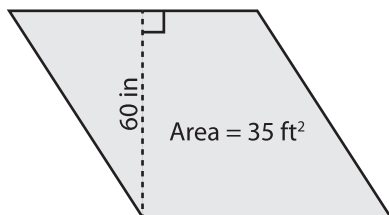
Not a member? Please sign up to gain complete access.

[www.mathworksheets4kids.com](http://www.mathworksheets4kids.com)

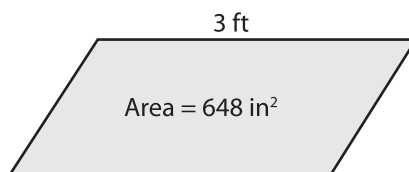


Height = \_\_\_\_\_ yd

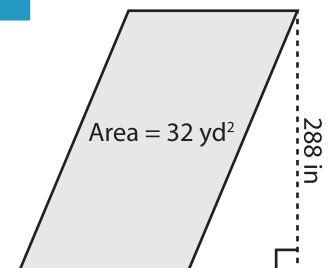
7)



Base = \_\_\_\_\_ ft



Height = \_\_\_\_\_ in



Base = \_\_\_\_\_ yd