

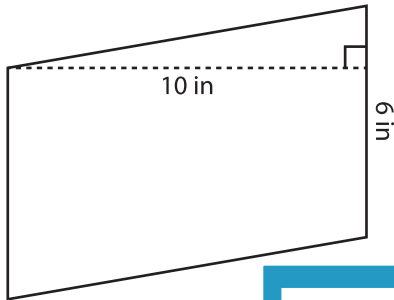
Name : _____

T1L1S3

Parallelogram - Area

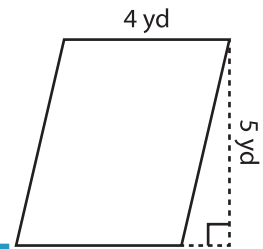
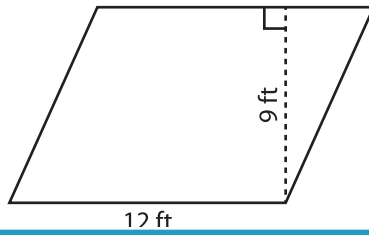
Find the area of each parallelogram.

1)



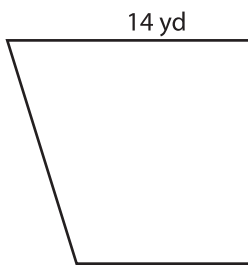
Area =

2)

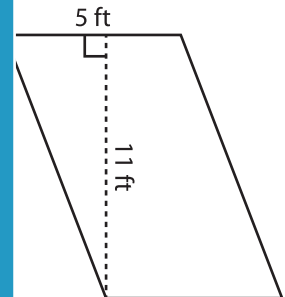


Area =

4)

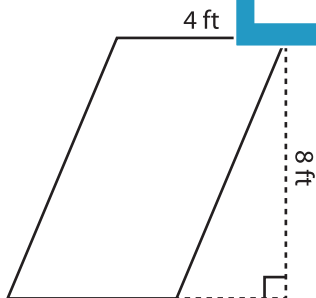


Area =

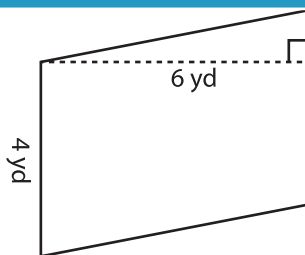


Area =

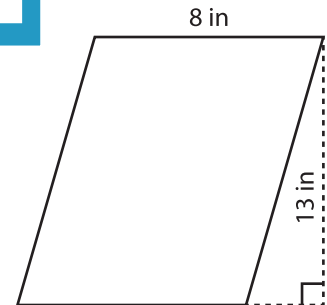
7)



Area =



Area =



Area =

PREVIEW

Gain complete access to the largest collection of worksheets in all subjects!

Members, please log in to download this worksheet.

Not a member? Please sign up to gain complete access.

www.mathworksheets4kids.com