

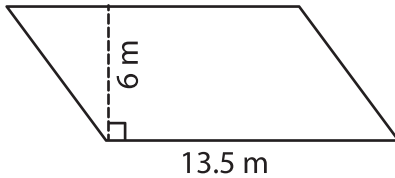
Name : _____

Parallelogram – Area

T2S1

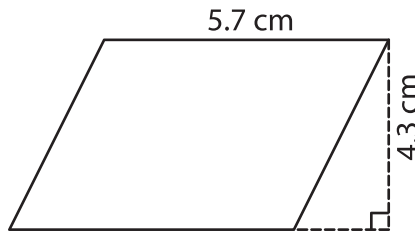
A) Find the area of each parallelogram.

1)



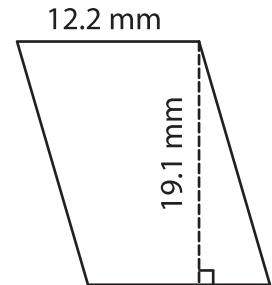
Area = _____

2)



Area = _____

3)



B) Find the area of each parallelogram.

4) base = 9.4 mm , height = 14 m

Area = _____

6) base = 11.1 cm , height = 7.2 mm

Area = _____

8) What is the area of a parallelogram with base 10 cm and height 7 cm?

Area = _____

PREVIEW

Gain complete access to the largest collection of worksheets in all subjects!

Members, please log in to download this worksheet.

Not a member? Please sign up to gain complete access.

www.mathworksheets4kids.com

9) The height and base of a parallelogram are 20 m and 15.3 m respectively. Find the area of the parallelogram.