

Name : _____

Perimeter of a Parallelogram

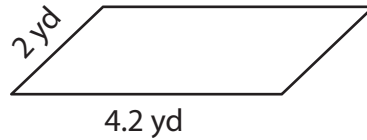
Find the perimeter of each parallelogram.

1)

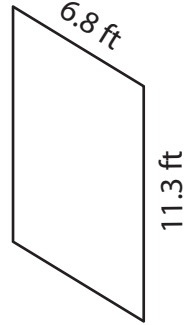


Perimeter = _____

2)

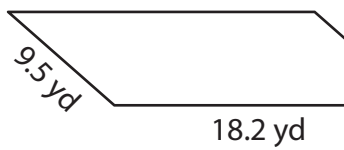


3)




Perimeter = _____

4)



Perimeter = _____



Perimeter = _____

7) The adjacent sides of a parallelogram.

Find the perimeter of the

8) What is the perimeter of the parallelogram, if its adjacent sides measure 15.3 feet and 19 feet?

PREVIEW

Gain complete access to the largest collection of worksheets in all subjects!

Members, please log in to download this worksheet.

Not a member? Please sign up to gain complete access.

www.mathworksheets4kids.com

Name : _____

Answer key

Sheet 3

Perimeter of a Parallelogram

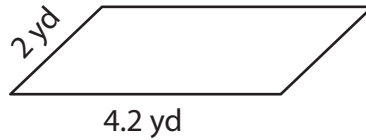
Find the perimeter of each parallelogram.

1)

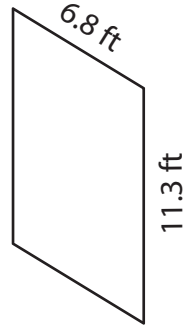


Perimeter = 50.4 in

2)

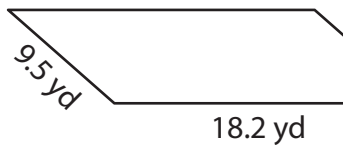


3)



Perimeter = 36.2 ft

4)



Perimeter = 55.4 yd

7) The adjacent sides of a parallelogram.

81 inches

8) What is the perimeter of the parallelogram, if its adjacent sides measure 15.3 feet and 19 feet?

68.6 feet

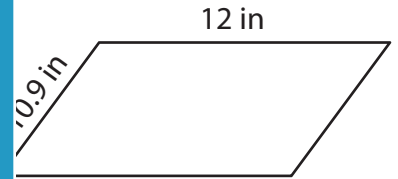
PREVIEW

Gain complete access to the largest collection of worksheets in all subjects!

Members, please log in to download this worksheet.

Not a member? Please sign up to gain complete access.

www.mathworksheets4kids.com



Perimeter = 45.8 in

Find the perimeter of the