

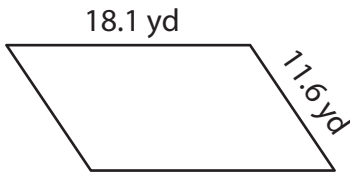
Name : _____

Perimeter of a Parallelogram

Sheet 4

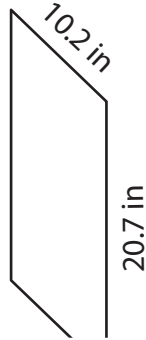
Find the perimeter of each parallelogram.

1)

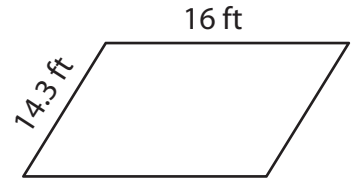


Perimeter = _____

2)

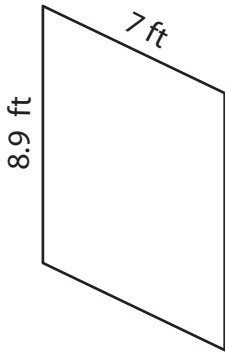


3)



Perimeter = _____

4)



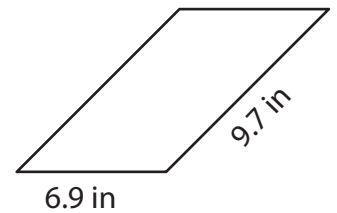
Perimeter = _____

PREVIEW
Gain complete access to the largest collection of worksheets in all subjects!

Members, please log in to download this worksheet.

Not a member? Please sign up to gain complete access.

www.mathworksheets4kids.com



Perimeter = _____

7) The lengths of the adjacent sides are 12 inches and 15 inches. What is the perimeter of the parallelogram?

8) Find the perimeter of the parallelogram, if the lengths of the adjacent sides are 17.8 yards and 23 yards.

Name : _____

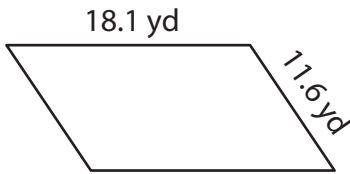
Answer key

Sheet 4

Perimeter of a Parallelogram

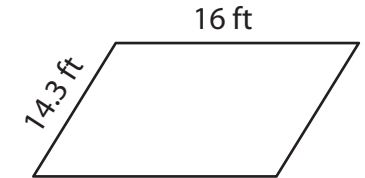
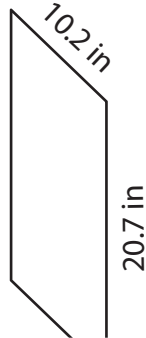
Find the perimeter of each parallelogram.

1)



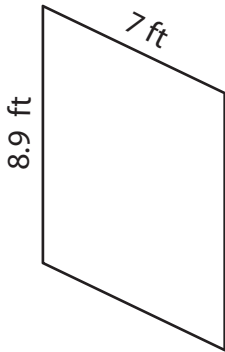
Perimeter = 59.4 yd

2)

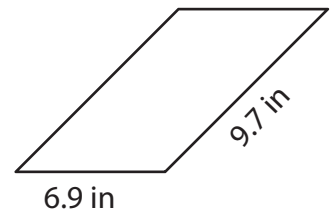


Perimeter = 60.6 ft

4)



Perimeter = 31.8 ft



Perimeter = 33.2 in

7) The lengths of the adjacent sides are 18 inches and 21 inches. What is the perimeter of the parallelogram?

Perimeter = 69 inches

8) Find the perimeter of the parallelogram, if the lengths of the adjacent sides are 17.8 yards and 23 yards.

Perimeter = 81.6 yards

PREVIEW

Gain complete access to the largest collection of worksheets in all subjects!

Members, please log in to download this worksheet.

Not a member? Please sign up to gain complete access.

www.mathworksheets4kids.com