

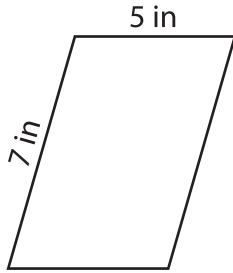
Name : _____

Perimeter of a Parallelogram

L1S1

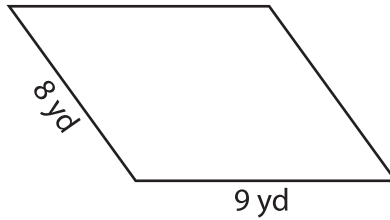
Find the perimeter of each parallelogram.

1)



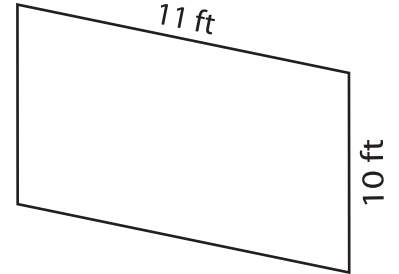
Perimeter = _____

2)



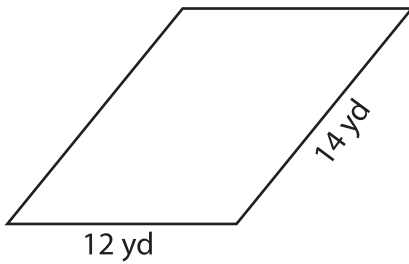
Perimeter = _____

3)



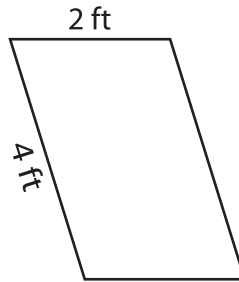
Perimeter = _____

4)



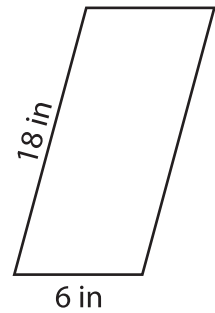
Perimeter = _____

5)



Perimeter = _____

6)



Perimeter = _____

7) The adjacent sides of a parallelogram measure 13 feet and 1 foot. Determine the perimeter of the parallelogram.

8) What is the perimeter of the parallelogram whose adjacent sides measure 15 yards and 17 yards?
