

Name : _____

L2S3

Perimeter of a Parallelogram


Find the perimeter of each parallelogram.

1)

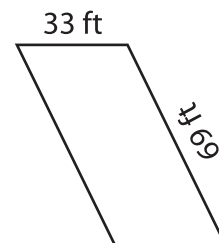


Perimeter = _____

2)

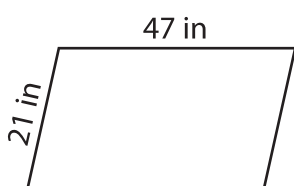


3)



Perimeter = _____

4)



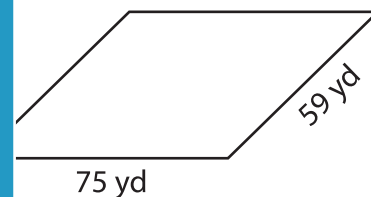
Perimeter = _____

PREVIEW
Gain complete access to the largest collection of worksheets in all subjects!

Members, please log in to download this worksheet.

Not a member? Please sign up to gain complete access.

www.mathworksheets4kids.com



Perimeter = _____

7) The adjacent sides of a parallelogram are 27 inches and 66 inches. Find the perimeter of the parallelogram.

Perimeter = _____

8) What is the perimeter of the parallelogram whose adjacent sides measure 27 inches and 66 inches?