

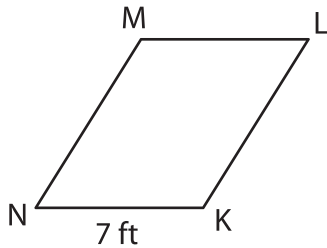
Name : _____

Perimeter of a Parallelogram

Sheet 4

Find the missing side length of each parallelogram from the given perimeter.

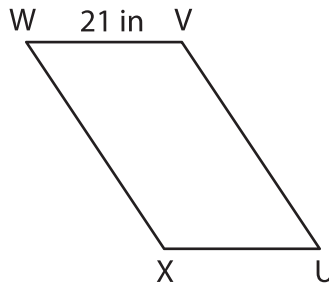
1)



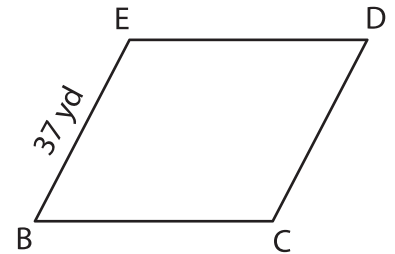
Perimeter = 36 ft

MN = _____

2)



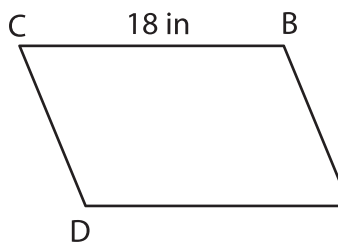
3)



Perimeter = 154 yd

BC = _____

4)



Perimeter = 68 in

CD = _____

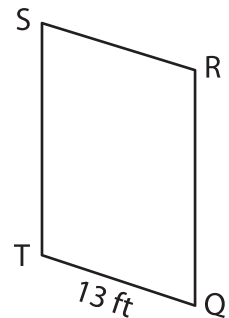
PREVIEW

Gain complete access to the largest collection of worksheets in all subjects!

Members, please log in to download this worksheet.

Not a member? Please sign up to gain complete access.

www.mathworksheets4kids.com



Perimeter = 80 ft

QR = _____

7) The length of one of the sides of the parallelogram is 58 feet, find the length of the adjacent side.

8) A parallelogram has a perimeter of 42 yards. If one of the sides of the parallelogram measures 9 yards, determine the length of its adjacent side.
