

Name : \_\_\_\_\_

## Perimeter of a Parallelogram

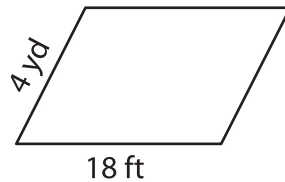
Find the perimeter of each parallelogram.

1)

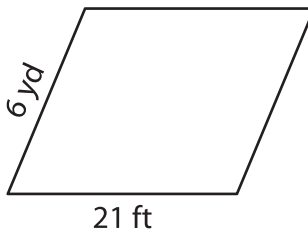


Perimeter = \_\_\_\_\_

2)



4)



Perimeter = \_\_\_\_\_

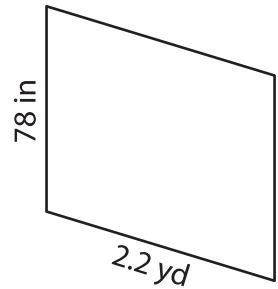
7) The lengths of the adjacent sides of the parallelogram are \_\_\_\_\_ yards and \_\_\_\_\_ yards. Determine the perimeter.

\_\_\_\_\_ yards

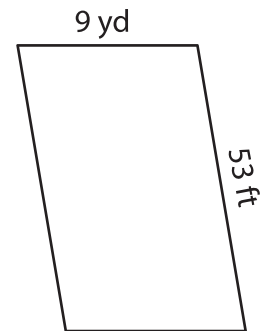
8) Find the perimeter of the parallelogram whose adjacent sides measure 97 inches and 2.4 yards.

\_\_\_\_\_ inches

3)



Perimeter = \_\_\_\_\_ in



Perimeter = \_\_\_\_\_ ft

# PREVIEW

Gain complete access to the largest collection of worksheets in all subjects!

Members, please log in to download this worksheet.

Not a member? Please sign up to gain complete access.

[www.mathworksheets4kids.com](http://www.mathworksheets4kids.com)