

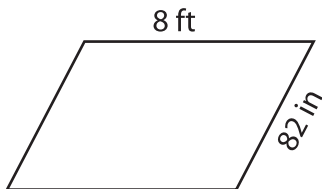
Name : _____

Perimeter of a Parallelogram

Sheet 4

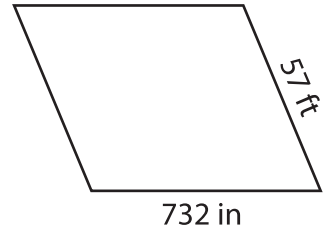
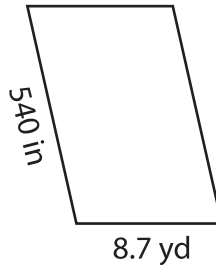
Find the perimeter of each parallelogram.

1)



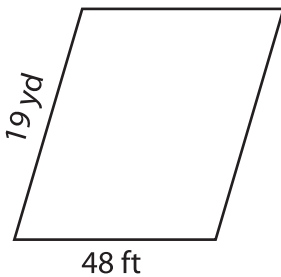
Perimeter = _____

2)



Perimeter = _____ ft

4)



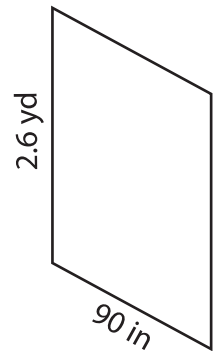
Perimeter = _____

PREVIEW
Gain complete access to the largest collection of worksheets in all subjects!

Members, please log in to download this worksheet.

Not a member? Please sign up to gain complete access.

www.mathworksheets4kids.com



Perimeter = _____ in

7) If the lengths of the adjacent sides are _____ feet

_____ feet, find the perimeter of the

8) What is the perimeter of the parallelogram, if the lengths of adjacent sides are 64 inches and 4 feet?

_____ inches