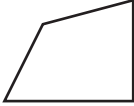
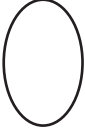

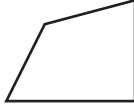
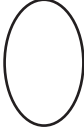


Identifying Shape Pattern

ES3

Complete the shape pattern.

1)

					
---	---	---	---	---	--

2)

					
---	---	---	---	---	--

3)

				
--	---	--	---	--


4)

				
---	---	--	---	--






5)

				
---	--	--	--	--

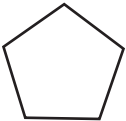

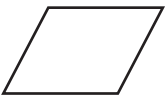
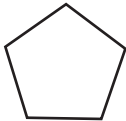

6)

				
---	--	--	--	--

7)

					
---	---	---	---	---	--

8)

					
---	---	---	---	---	--

PREVIEW

Gain complete access to the largest collection of worksheets in all subjects!

Members, please log in to download this worksheet.

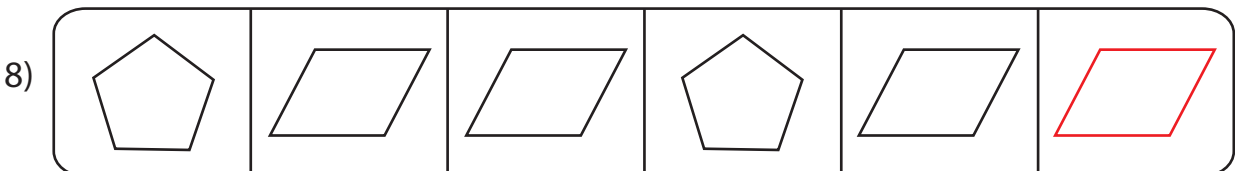
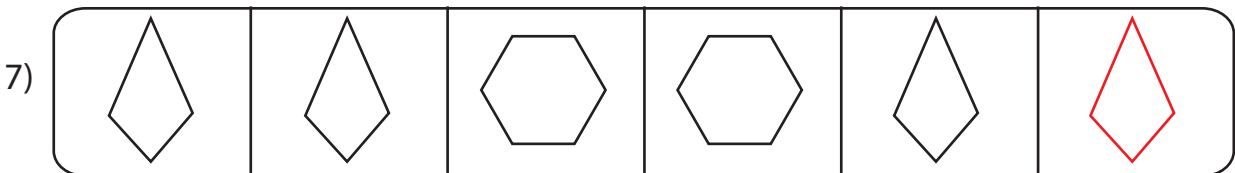

Not a member? Please sign up to gain complete access.

www.mathworksheets4kids.com

Identifying Shape Pattern

ES3

Complete the shape pattern.

**PREVIEW**

Gain complete access to the largest collection of worksheets in all subjects!

Members, please log in to download this worksheet.

Not a member? Please sign up to gain complete access.

www.mathworksheets4kids.com