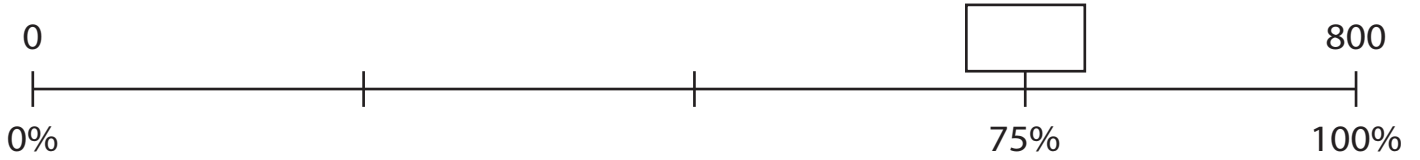


Name : _____

Percent on a Number Line

1) What is 75% of 800?



2) What percent of 700



3) 500 is 25% of a number



4) What is 60% of 500?



5) What is 80% of 650?



PREVIEW

Gain complete access to the largest collection of worksheets in all subjects!

Members, please log in to download this worksheet.

Not a member? Please sign up to gain complete access.

www.mathworksheets4kids.com

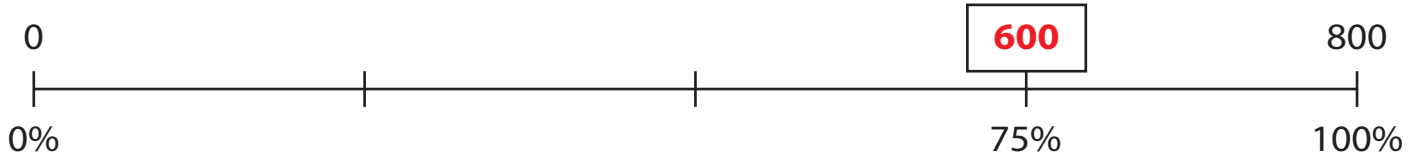
Name : _____

Answer key

Percent on a Number Line

Sheet 3

1) What is 75% of 800?



2) What percent of 700




3) 500 is 25% of a number



4) What is 60% of 500?



5) What is 80% of 650?



PREVIEW

Gain complete access to the largest collection of worksheets in all subjects!

Members, please log in to download this worksheet.

Not a member? Please sign up to gain complete access.

www.mathworksheets4kids.com