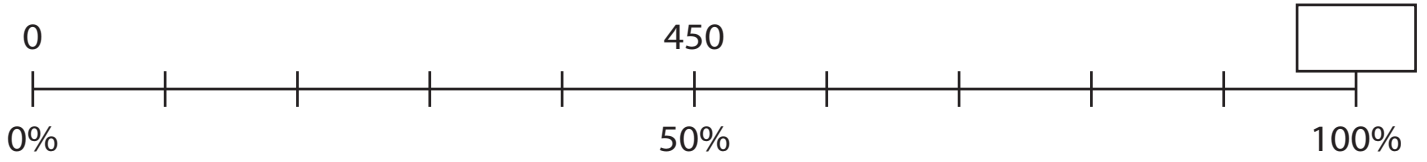


Name : \_\_\_\_\_

# Percent on a Number Line

1) 450 is 50% of a number. Find the number.



2) What is 75% of 620?



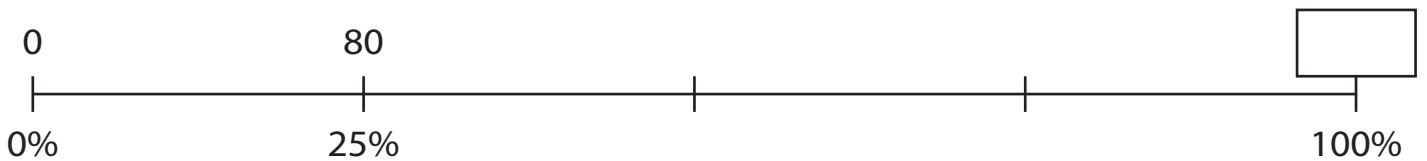
3) What percent of 1100



4) What percent of 860



5) 80 is 25% of a number. Find the number.



**PREVIEW**

Gain complete access to the largest collection of worksheets in all subjects!

Members, please log in to download this worksheet.

Not a member? Please sign up to gain complete access.

[www.mathworksheets4kids.com](http://www.mathworksheets4kids.com)

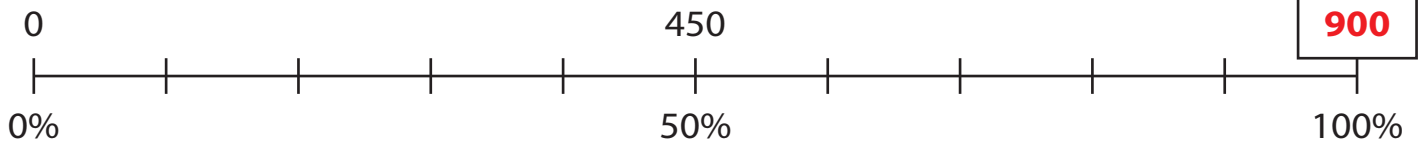
Name : \_\_\_\_\_

## Answer key

### Percent on a Number Line

Sheet 4

1) 450 is 50% of a number. Find the number.



2) What is 75% of 620?



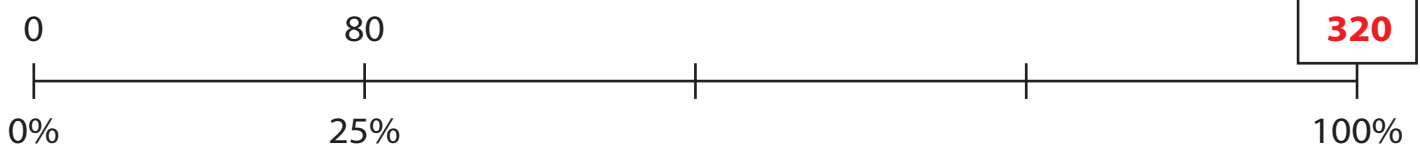
3) What percent of 1100



4) What percent of 860



5) 80 is 25% of a number. Find the number.



**PREVIEW**

Gain complete access to the largest collection of worksheets in all subjects!

Members, please log in to download this worksheet.

Not a member? Please sign up to gain complete access.

[www.mathworksheets4kids.com](http://www.mathworksheets4kids.com)