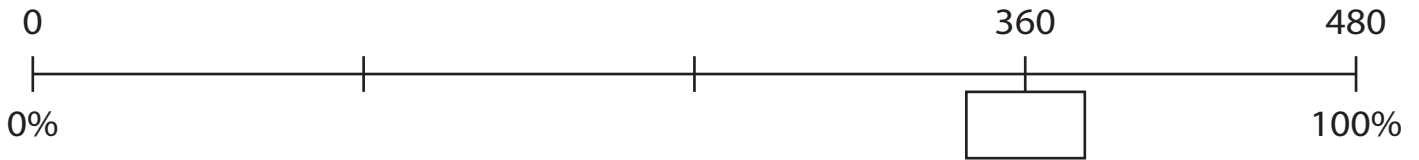


Name : _____

Percent on a Number Line

1) What percent of 480 amounts to 360?



2) 828 is 60% of a number




3) What percent of 1470



4) What is 50% of 782?



5) What is 20% of 560?



PREVIEW

Gain complete access to the largest collection of worksheets in all subjects!

Members, please log in to download this worksheet.

Not a member? Please sign up to gain complete access.

www.mathworksheets4kids.com

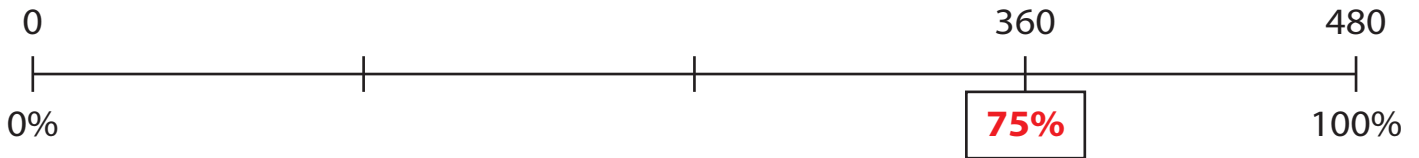
Name : _____

Answer key

Percent on a Number Line

Sheet 5

1) What percent of 480 amounts to 360?



2) 828 is 60% of a number




3) What percent of 1470



4) What is 50% of 782?



5) What is 20% of 560?



PREVIEW

Gain complete access to the largest collection of worksheets in all subjects!

Members, please log in to download this worksheet.

Not a member? Please sign up to gain complete access.

www.mathworksheets4kids.com