

Drawing Shapes



Draw any closed shape in each grid with the following perimeter.

- | | | |
|--------------------------------|--------------------------------|--------------------------------|
| <p>1) Perimeter = 22 units</p> | <p>2) Perimeter = 30 units</p> | <p>3) Perimeter = 14 units</p> |
| <p>4) Perimeter = 38 units</p> | <p>5) Perimeter = 12 units</p> | <p>6) Perimeter = 24 units</p> |
| <p>7) Perimeter = 18 units</p> | <p>8) Perimeter = 6 units</p> | <p>9) Perimeter = 10 units</p> |

Draw three different closed shapes with the perimeter 16 units.

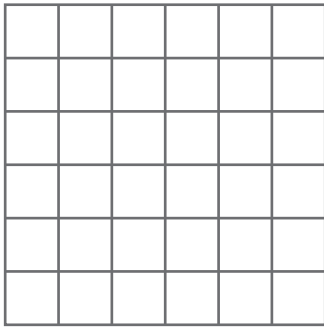
- | | | |
|-------------|-------------|-------------|
| <p>10) </p> | <p>11) </p> | <p>12) </p> |
|-------------|-------------|-------------|

Drawing Shapes




Draw any closed shape in each grid with the following perimeter.

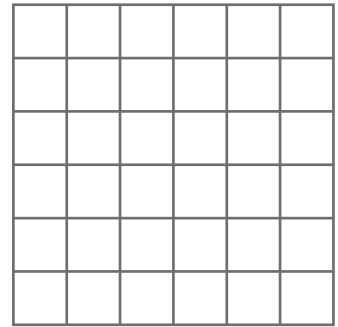
1) Perimeter = 10 units




2) Perimeter = 24 units



3) Perimeter = 18 units



4) Perimeter = 22 units



5)

PREVIEW

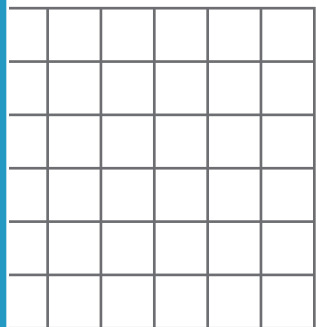
Access the largest collection of worksheets for just **\$19.95** per year!

Members, please log in to download this worksheet.


Not a member? Please sign up to gain complete access.

www.mathworksheets4kids.com


6) Perimeter = 34 units



7) Perimeter = 20 units




Perimeter = 16 units




Draw three different closed shapes


10)



11)



12)

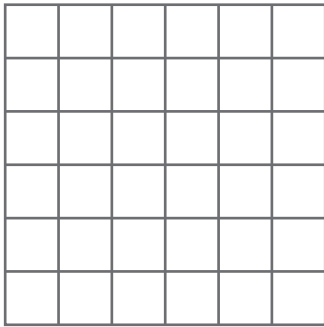


Drawing Shapes




Draw any closed shape in each grid with the following perimeter.

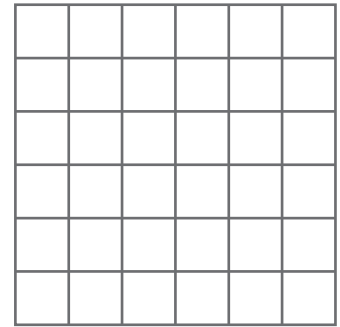
1) Perimeter = 12 units




2) Perimeter = 8 units



3) Perimeter = 22 units




4) Perimeter = 16 units




5)


6) Perimeter = 14 units



7) Perimeter = 24 units



Perimeter = 18 units



PREVIEW

Access the largest collection of
worksheets for just **\$19.95** per year!

Members, please
log in to
download this
worksheet.

Log in


Not a member?
Please sign up to
gain complete
access.

Sign up


www.mathworksheets4kids.com

Draw three different closed shapes in each grid.

10)



11)



12)

