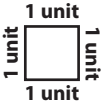


Name : _____

Drawing Shapes

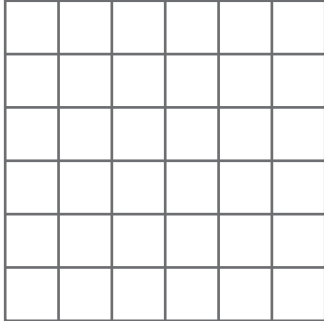
Sheet 1



Draw any shape in each grid with the following perimeter.


1)

Perimeter = 22 units



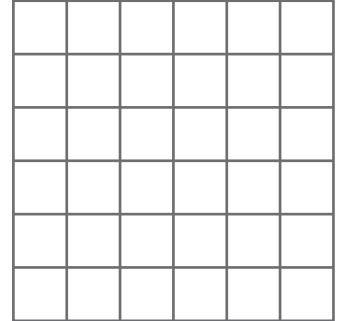
2)

Perimeter = 30 units




3)

Perimeter = 14 units




4)

Perimeter = 12 units




Perimeter = 24 units




7)

Perimeter = 18 units



Perimeter = 10 units



PREVIEW

Gain complete access to the largest collection of worksheets in all subjects!


Members, please log in to download this worksheet.

Not a member? Please sign up to gain complete access.


www.mathworksheets4kids.com

Draw three different shapes with the perimeter 16 units.

10)



11)



12)

