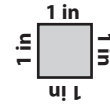



Perimeter

ES1




Calculate the perimeter of each shape.

1)




Perimeter = _____

2)



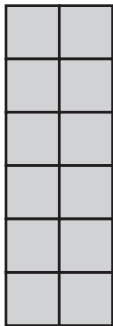
Perimeter = _____

3)



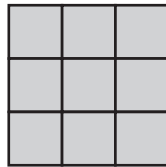
Perimeter = _____

4)




Perimeter = _____

5)




Perimeter = _____

6)




Perimeter = _____

7)



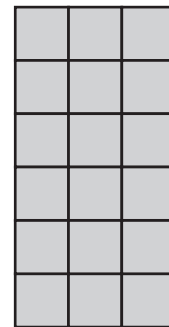
Perimeter = _____

8)




Perimeter = _____

9)




Perimeter = _____

10)




Perimeter = _____

11)



Perimeter = _____

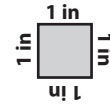
12)



Perimeter = _____


Perimeter

ES1




Calculate the perimeter of each shape.

1)



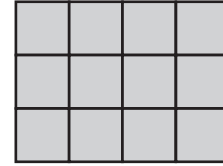
Perimeter = 22 in

2)



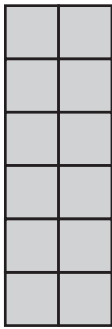
Perimeter = 20 in

3)




Perimeter = 14 in

4)




Perimeter = 16 in

5)




Perimeter = 12 in

6)



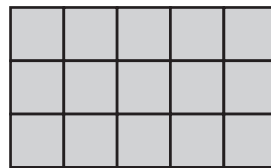
Perimeter = 20 in

7)



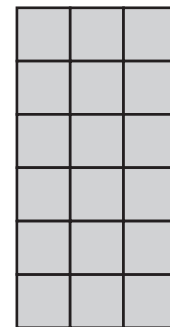
Perimeter = 18 in

8)




Perimeter = 16 in

9)



Perimeter = 18 in

10)




Perimeter = 24 in

11)



Perimeter = 14 in

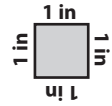
12)



Perimeter = 16 in


Perimeter

ES2




Calculate the perimeter of each shape.

1)



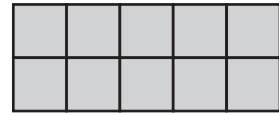
Perimeter = _____

2)



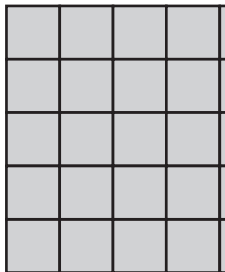
Perimeter = _____

3)

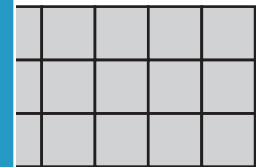


Perimeter = _____

4)

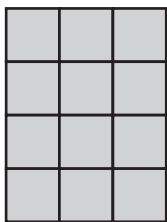


Perimeter = _____




Perimeter = _____

7)




Perimeter = _____




Perimeter = _____

10)




Perimeter = _____

11)



Perimeter = _____

12)



Perimeter = _____

PREVIEW

Access the largest collection of
worksheets for just **\$19.95** per year!

Members, please
log in to
download this
worksheet.

Log in

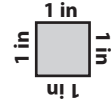
Not a member?
Please sign up to
gain complete
access.

Sign up

www.mathworksheets4kids.com


Perimeter

ES2




Calculate the perimeter of each shape.

1)



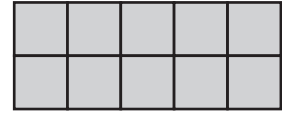
Perimeter = 18 in

2)




Perimeter = 24 in

3)

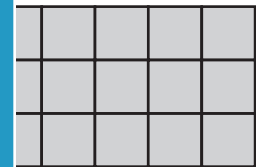


Perimeter = 14 in

4)




Perimeter = 20 in




Perimeter = 16 in

7)




Perimeter = 14 in




Perimeter = 16 in

10)




Perimeter = 12 in

11)



Perimeter = 14 in

12)



Perimeter = 18 in

PREVIEW

Access the largest collection of worksheets for just **\$19.95** per year!

Members, please log in to download this worksheet.

Log in

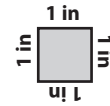
Not a member? Please sign up to gain complete access.

Sign up

www.mathworksheets4kids.com


Perimeter

ES3




Calculate the perimeter of each shape.

1)



Perimeter = _____

2)




Perimeter = _____

3)




Perimeter = _____

4)




Perimeter = _____




Perimeter = _____

7)

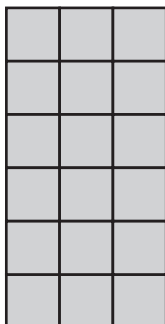


Perimeter = _____




Perimeter = _____

10)




Perimeter = _____

11)



Perimeter = _____

12)



Perimeter = _____

PREVIEW

Access the largest collection of
worksheets for just **\$19.95** per year!

Members, please
log in to
download this
worksheet.

Log in

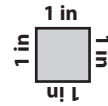
Not a member?
Please sign up to
gain complete
access.

Sign up

www.mathworksheets4kids.com


Perimeter

ES3




Calculate the perimeter of each shape.

1)



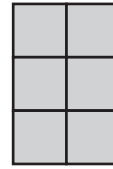
Perimeter = 22 in

2)



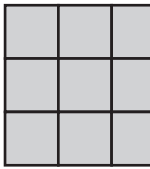
Perimeter = 16 in

3)




Perimeter = 10 in

4)




Perimeter = 12 in




Perimeter = 14 in

7)




Perimeter = 24 in




Perimeter = 20 in

10)




Perimeter = 18 in

11)



Perimeter = 16 in

12)



Perimeter = 22 in

PREVIEW

Access the largest collection of worksheets for just **\$19.95** per year!

Members, please log in to download this worksheet.

Log in

Not a member? Please sign up to gain complete access.

Sign up

www.mathworksheets4kids.com