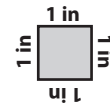



Perimeter

ES1




Calculate the perimeter of each shape.

1)



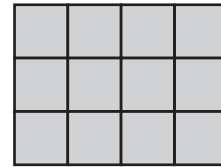
Perimeter = _____

2)



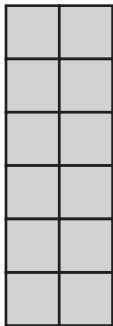
Perimeter = _____

3)



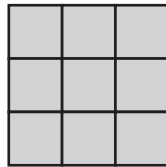
Perimeter = _____

4)




Perimeter = _____

5)




Perimeter = _____

6)




Perimeter = _____

7)



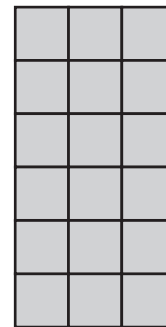
Perimeter = _____

8)




Perimeter = _____

9)




Perimeter = _____

10)




Perimeter = _____

11)



Perimeter = _____

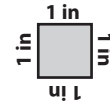
12)



Perimeter = _____


Perimeter

ES1




Calculate the perimeter of each shape.

1)



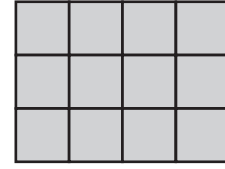
Perimeter = 22 in

2)



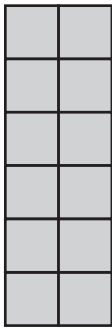
Perimeter = 20 in

3)




Perimeter = 14 in

4)




Perimeter = 16 in

5)




Perimeter = 12 in

6)



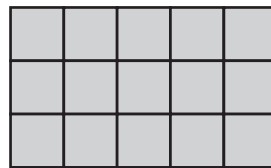
Perimeter = 20 in

7)



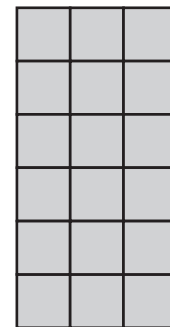
Perimeter = 18 in

8)




Perimeter = 16 in

9)




Perimeter = 18 in

10)




Perimeter = 24 in

11)



Perimeter = 14 in

12)



Perimeter = 16 in