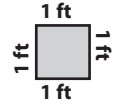
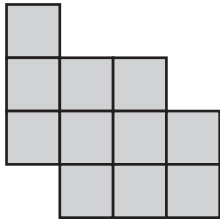


Perimeter

The side length of each square is 1ft. Calculate the perimeter of each shape.

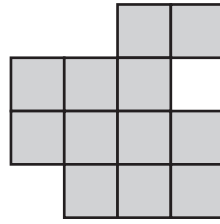


1)



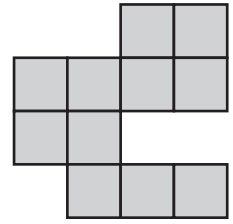
Perimeter = ft

2)



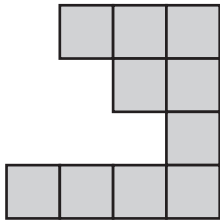
Perimeter = ft

3)



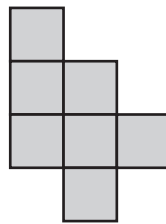
Perimeter = ft

4)



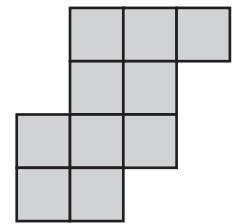
Perimeter = ft

5)



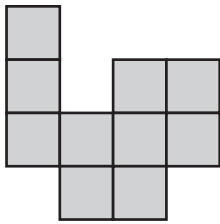
Perimeter = ft

6)



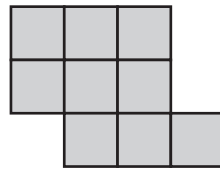
Perimeter = ft

7)



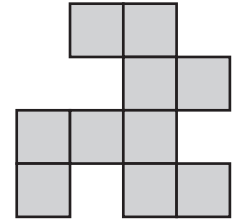
Perimeter = ft

8)



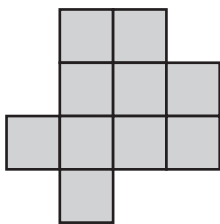
Perimeter = ft

9)



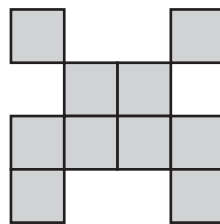
Perimeter = ft

10)



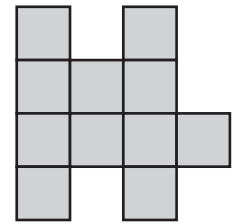
Perimeter = ft

11)



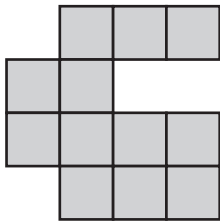
Perimeter = ft

12)



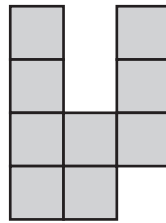
Perimeter = ft

13)



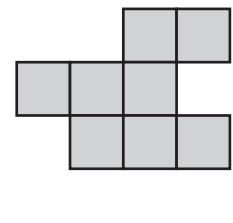
Perimeter = ft

14)



Perimeter = ft

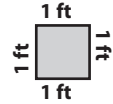
15)



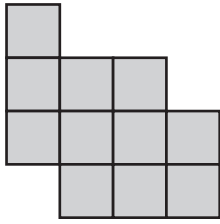
Perimeter = ft

Perimeter

The side length of each square is 1ft. Calculate the perimeter of each shape.

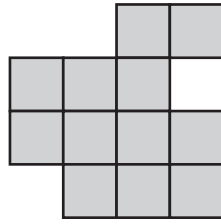


1)



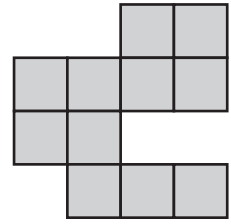
Perimeter = **16** ft

2)



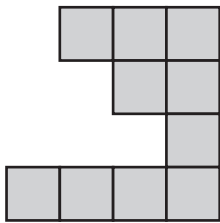
Perimeter = **18** ft

3)



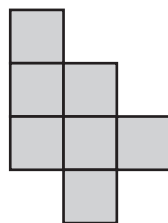
Perimeter = **20** ft

4)



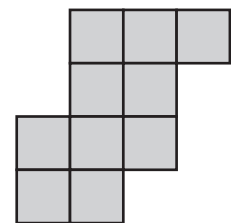
Perimeter = **20** ft

5)



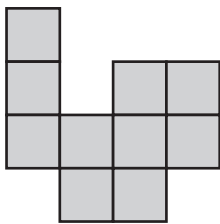
Perimeter = **14** ft

6)



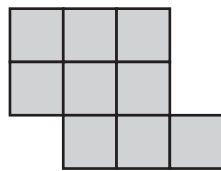
Perimeter = **16** ft

7)



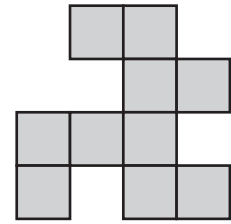
Perimeter = **18** ft

8)



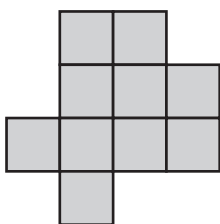
Perimeter = **14** ft

9)



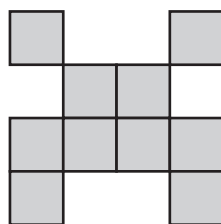
Perimeter = **22** ft

10)



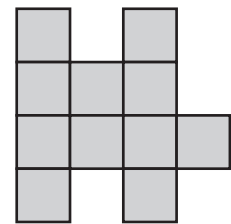
Perimeter = **16** ft

11)



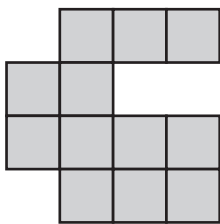
Perimeter = **24** ft

12)



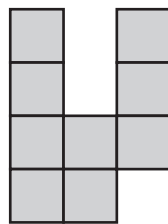
Perimeter = **20** ft

13)



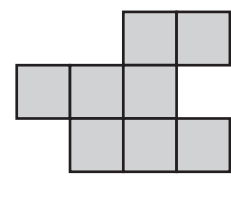
Perimeter = **20** ft

14)



Perimeter = **18** ft

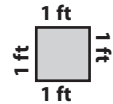
15)




Perimeter = **16** ft

Perimeter

The side length of each square is 1ft. Calculate the perimeter of each shape.

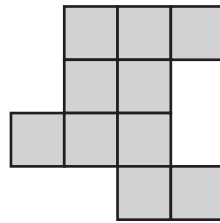


1)



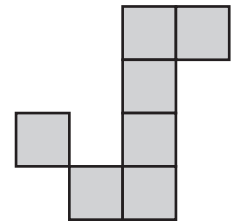
Perimeter = ft

2)



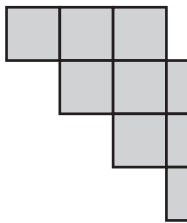
Perimeter = ft

3)



Perimeter = ft

4)



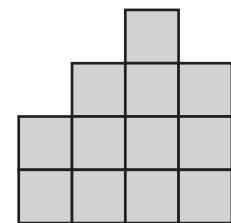
Perimeter = ft

5)



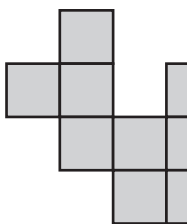
Perimeter = ft

6)



Perimeter = ft

7)



Perimeter = ft

PREVIEW

Access the largest collection of
worksheets for just **\$19.95** per year!

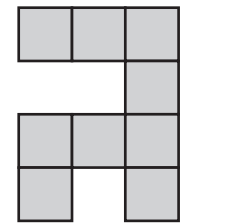
Members, please
log in to
download this
worksheet.

Log in

Not a member?
Please sign up to
gain complete
access.


Sign up

www.mathworksheets4kids.com

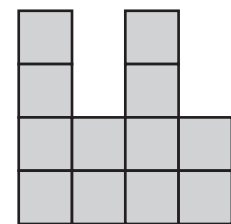


Perimeter = ft

10)

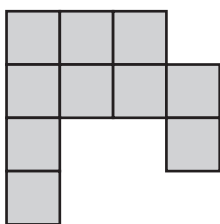


Perimeter = ft



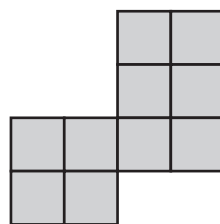
Perimeter = ft

13)



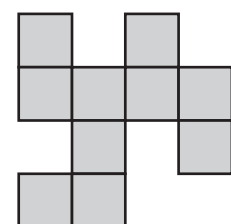
Perimeter = ft

14)



Perimeter = ft

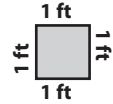
15)



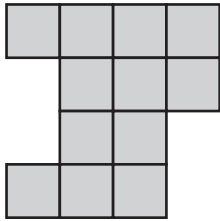
Perimeter = ft

Perimeter

The side length of each square is 1ft. Calculate the perimeter of each shape.

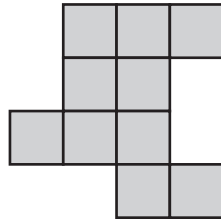


1)



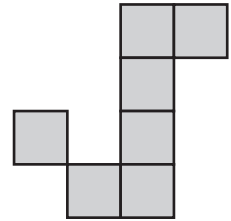
Perimeter = **18** ft

2)



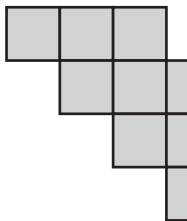
Perimeter = **18** ft

3)



Perimeter = **18** ft

4)

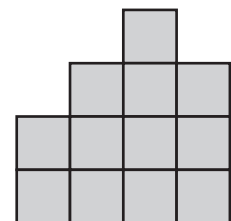


Perimeter = **16** ft

5)

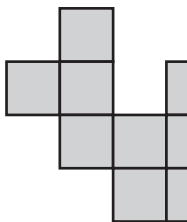


6)

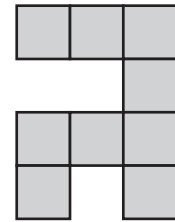


Perimeter = **16** ft

7)




Perimeter = **18** ft



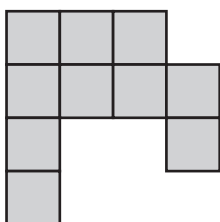
Perimeter = **20** ft

10)



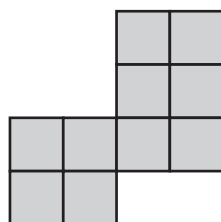
Perimeter = **16** ft

13)



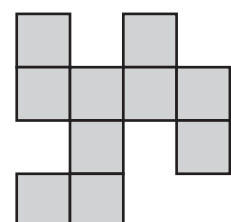
Perimeter = **18** ft

14)



Perimeter = **16** ft

15)



Perimeter = **22** ft

PREVIEW

Access the largest collection of
worksheets for just **\$19.95** per year!

Members, please
log in to
download this
worksheet.

Log in

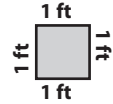
Not a member?
Please sign up to
gain complete
access.

Sign up

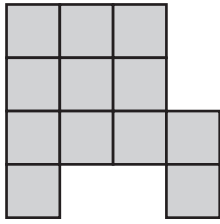
www.mathworksheets4kids.com

Perimeter

The side length of each square is 1ft. Calculate the perimeter of each shape.

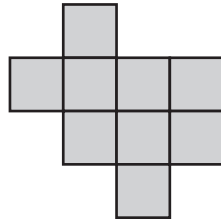


1)



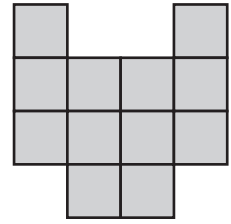
Perimeter = ft

2)



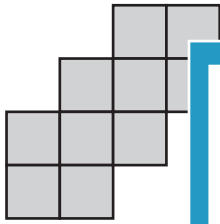
Perimeter = ft

3)



Perimeter = ft

4)



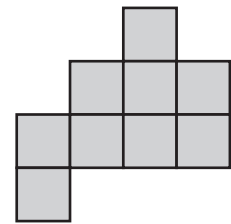
Perimeter = ft

5)



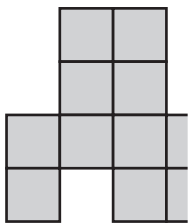
Perimeter = ft

6)



Perimeter = ft

7)



Perimeter = ft

PREVIEW

Access the largest collection of
worksheets for just **\$19.95** per year!

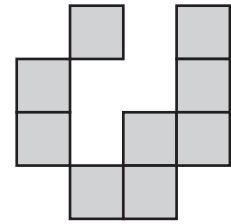
Members, please
log in to
download this
worksheet.

Log in

Not a member?
Please sign up to
gain complete
access.

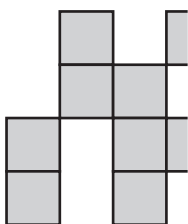
Sign up

www.mathworksheets4kids.com

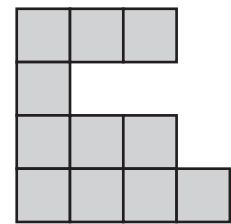


Perimeter = ft

10)

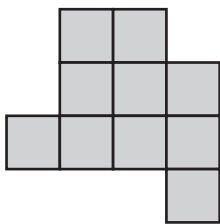


Perimeter = ft



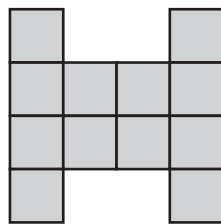
Perimeter = ft

13)



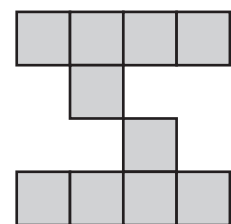
Perimeter = ft

14)



Perimeter = ft

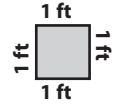
15)



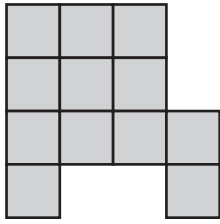
Perimeter = ft

Perimeter

The side length of each square is 1ft. Calculate the perimeter of each shape.

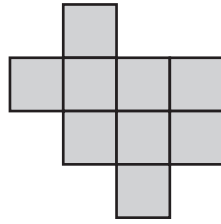


1)



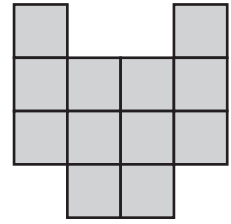
Perimeter = **18** ft

2)



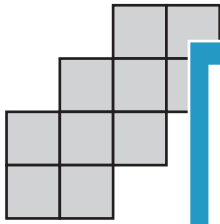
Perimeter = **16** ft

3)



Perimeter = **18** ft

4)

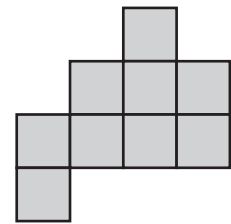


Perimeter = **16** ft

5)

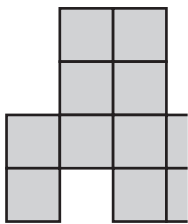


6)

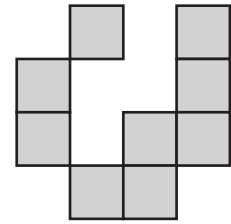


Perimeter = **16** ft

7)

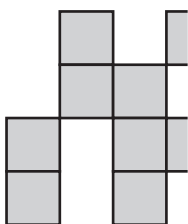


Perimeter = **18** ft



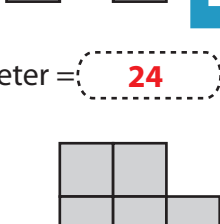
Perimeter = **24** ft

10)



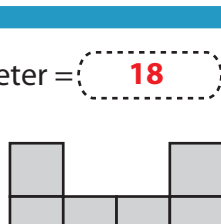
Perimeter = **24** ft

13)



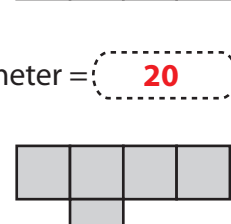
Perimeter = **16** ft

14)



Perimeter = **20** ft

15)



Perimeter = **24** ft

PREVIEW

Access the largest collection of worksheets for just **\$19.95** per year!

Members, please log in to download this worksheet.

Log in

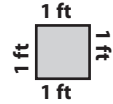
Not a member? Please sign up to gain complete access.

Sign up

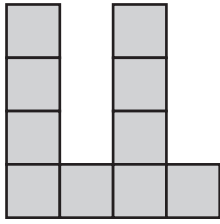
www.mathworksheets4kids.com

Perimeter

The side length of each square is 1ft. Calculate the perimeter of each shape.

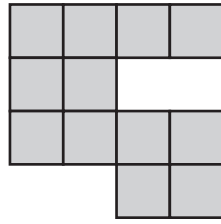


1)



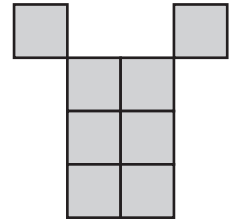
Perimeter = ft

2)



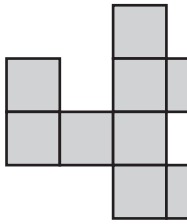
Perimeter = ft

3)



Perimeter = ft

4)



Perimeter = ft

5)



PREVIEW

Access the largest collection of
worksheets for just **\$19.95** per year!

Members, please
log in to
download this
worksheet.

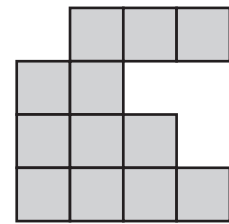
Log in

Not a member?
Please sign up to
gain complete
access.

Sign up


www.mathworksheets4kids.com

6)

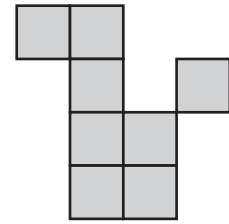


Perimeter = ft

7)

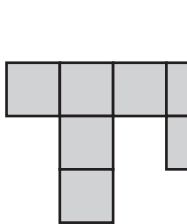


Perimeter = ft

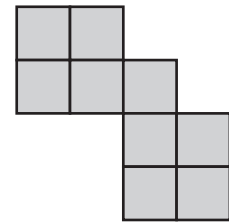


Perimeter = ft

10)

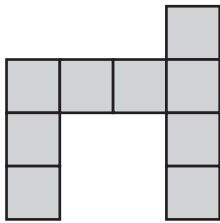


Perimeter = ft



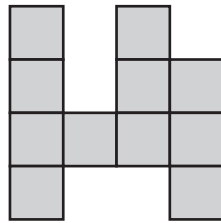
Perimeter = ft

13)



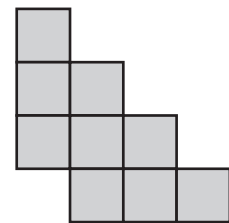
Perimeter = ft

14)



Perimeter = ft

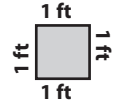
15)



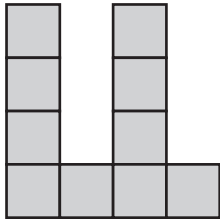
Perimeter = ft

Perimeter

The side length of each square is 1ft. Calculate the perimeter of each shape.

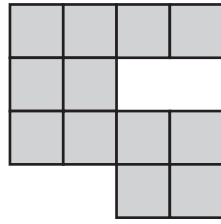


1)



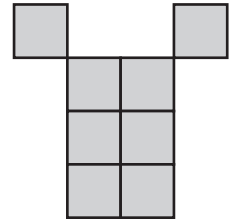
Perimeter = **22** ft

2)



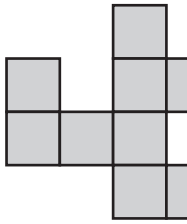
Perimeter = **20** ft

3)



Perimeter = **18** ft

4)

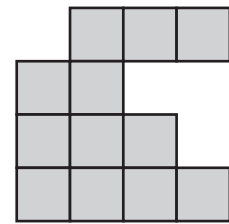


Perimeter = **20** ft

5)




6)

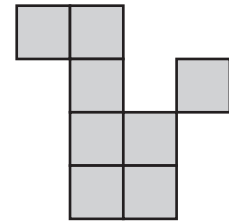


Perimeter = **20** ft

7)

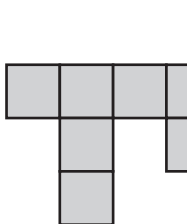


Perimeter = **22** ft



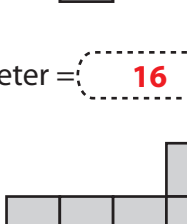
Perimeter = **18** ft

10)



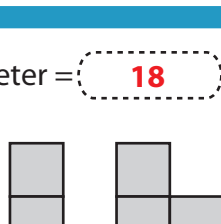
Perimeter = **16** ft

13)



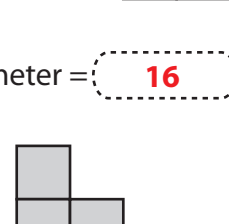
Perimeter = **20** ft

14)



Perimeter = **22** ft

15)



Perimeter = **16** ft

PREVIEW

Access the largest collection of
worksheets for just **\$19.95** per year!

Members, please
log in to
download this
worksheet.

Log in

Not a member?
Please sign up to
gain complete
access.

Sign up

www.mathworksheets4kids.com