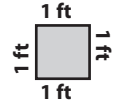
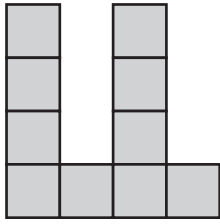


Perimeter

The side length of each square is 1ft. Calculate the perimeter of each shape.

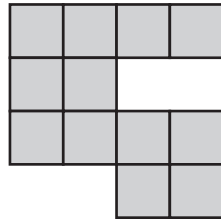


1)



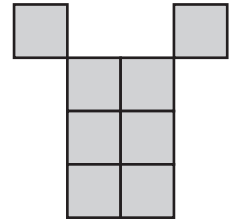
Perimeter = ft

2)



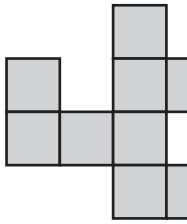
Perimeter = ft

3)



Perimeter = ft

4)



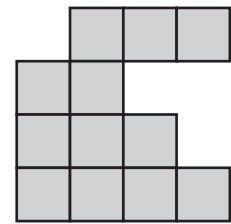
Perimeter = ft

5)




Perimeter = ft

6)

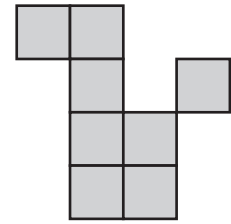


Perimeter = ft

7)

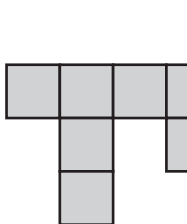


Perimeter = ft

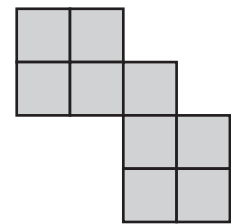


Perimeter = ft

10)

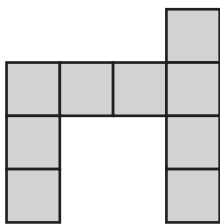


Perimeter = ft



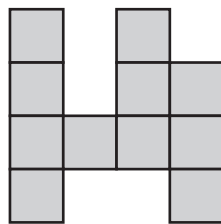
Perimeter = ft

13)



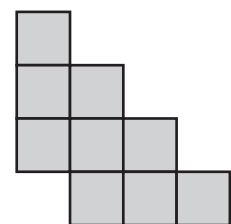
Perimeter = ft

14)



Perimeter = ft

15)



Perimeter = ft

PREVIEW

Access the largest collection of
worksheets for just **\$19.95** per year!

Members, please
log in to
download this
worksheet.

Log in

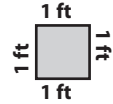
Not a member?
Please sign up to
gain complete
access.

Sign up

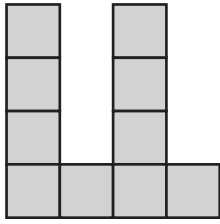
www.mathworksheets4kids.com

Perimeter

The side length of each square is 1ft. Calculate the perimeter of each shape.

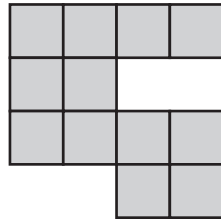


1)



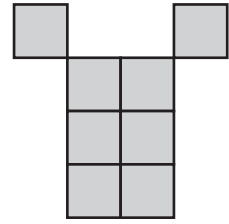
Perimeter = **22** ft

2)



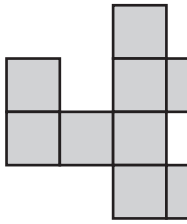
Perimeter = **20** ft

3)



Perimeter = **18** ft

4)

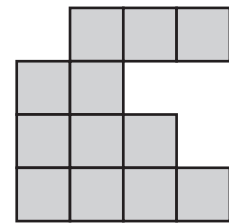


Perimeter = **20** ft

5)




6)

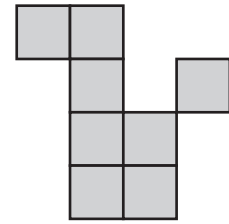


Perimeter = **20** ft

7)

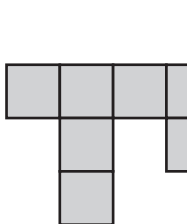


Perimeter = **22** ft



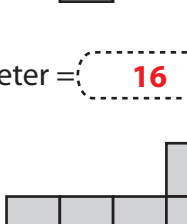
Perimeter = **18** ft

10)



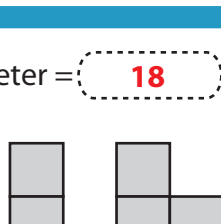
Perimeter = **16** ft

13)



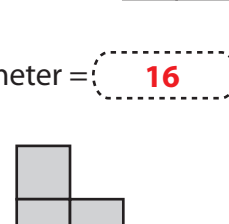
Perimeter = **20** ft

14)



Perimeter = **22** ft

15)



Perimeter = **16** ft

PREVIEW

Access the largest collection of
worksheets for just **\$19.95** per year!

Members, please
log in to
download this
worksheet.

Log in

Not a member?
Please sign up to
gain complete
access.

Sign up

www.mathworksheets4kids.com