
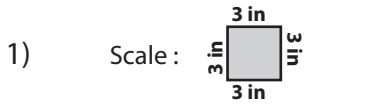



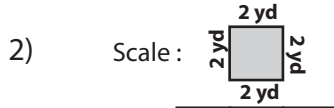
Perimeter

MS1


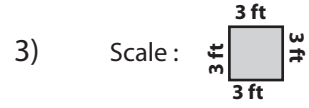
Calculate the perimeter of each shape.




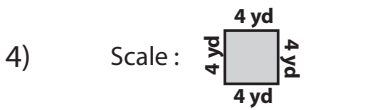
Perimeter = _____




Perimeter = _____



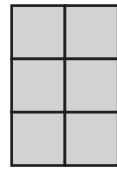
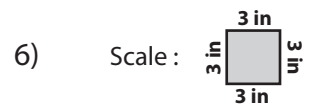
Perimeter = _____



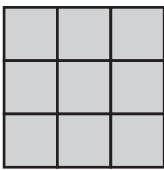
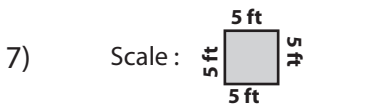
Perimeter = _____




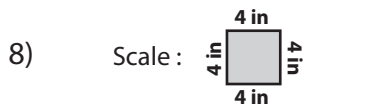
Perimeter = _____




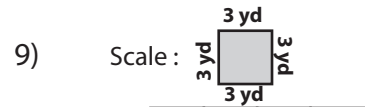
Perimeter = _____



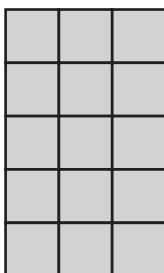
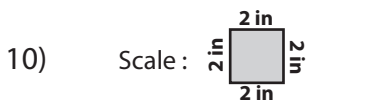
Perimeter = _____




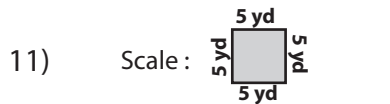
Perimeter = _____




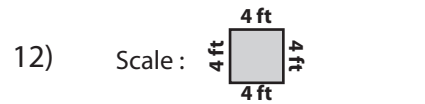
Perimeter = _____



Perimeter = _____



Perimeter = _____

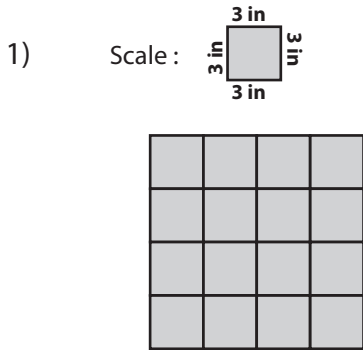


Perimeter = _____

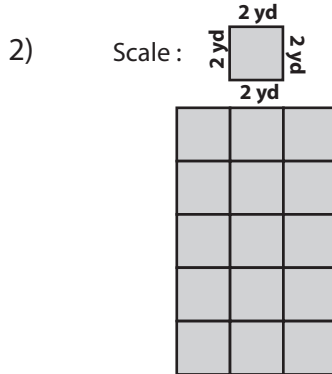
Perimeter

MS1

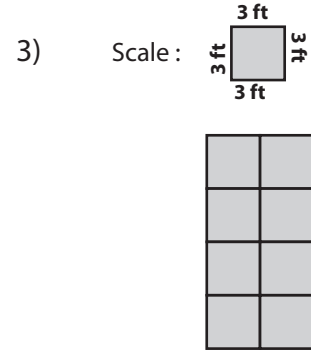
Calculate the perimeter of each shape.



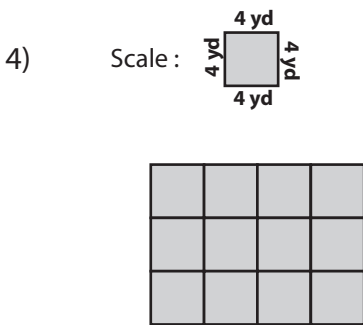
Perimeter = 48 in



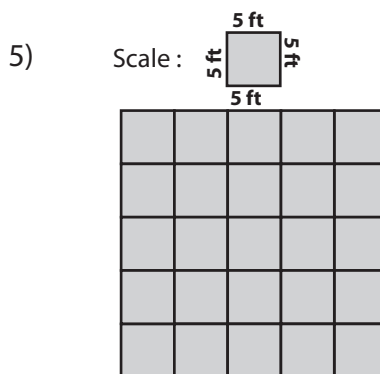
Perimeter = 32 yd



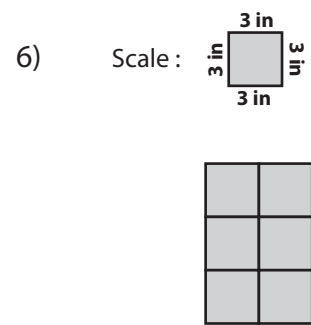
Perimeter = 36 ft



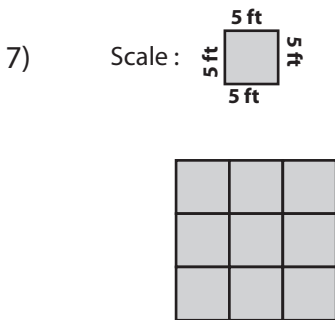
Perimeter = 56 yd



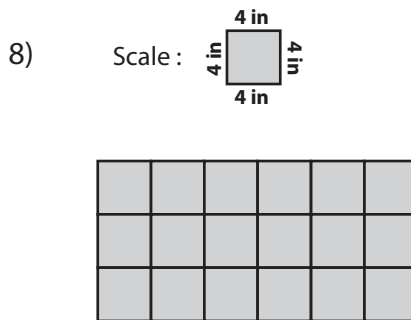
Perimeter = 100 ft



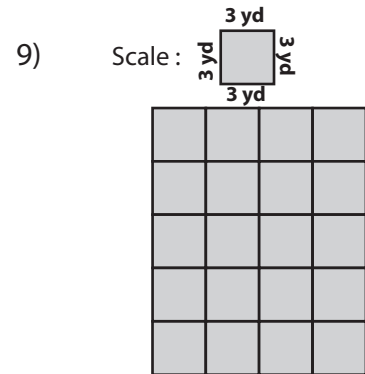
Perimeter = 30 in



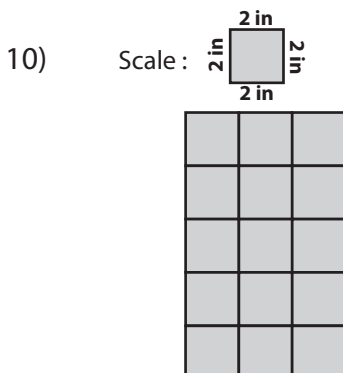
Perimeter = 60 ft



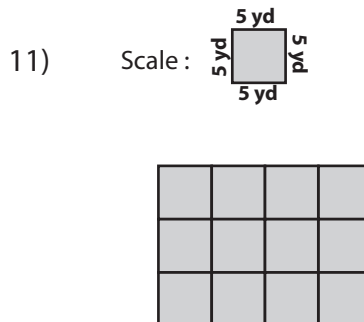
Perimeter = 72 in



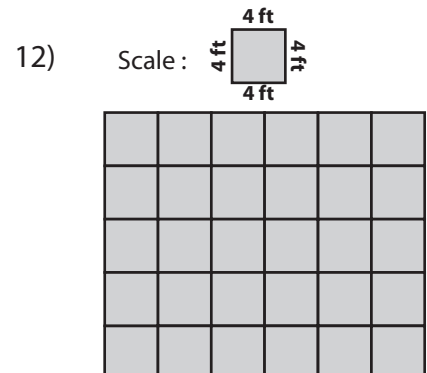
Perimeter = 54 yd



Perimeter = 32 in



Perimeter = 70 yd

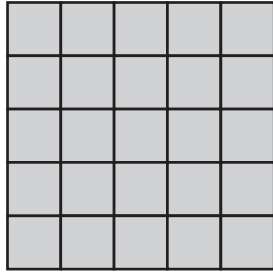
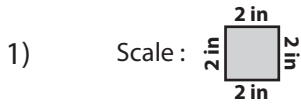


Perimeter = 88 ft


Perimeter

MS2

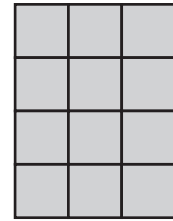
Calculate the perimeter of each shape.




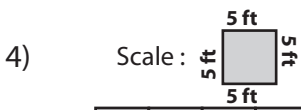
Perimeter = _____




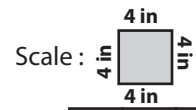
Perimeter = _____




Perimeter = _____




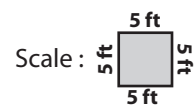
Perimeter = _____




Perimeter = _____




Perimeter = _____



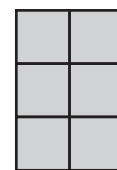
Perimeter = _____



Perimeter = _____



Perimeter = _____



Perimeter = _____

PREVIEW

Access the largest collection of
worksheets for just **\$19.95** per year!

Members, please
log in to
download this
worksheet.

Log in

Not a member?
Please sign up to
gain complete
access.

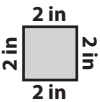
Sign up


www.mathworksheets4kids.com

Perimeter

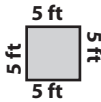
MS2


Calculate the perimeter of each shape.

1) Scale :  2 in

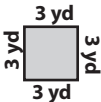


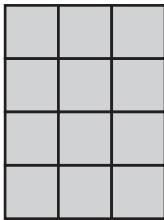
Perimeter = 40 in

2) Scale :  5 ft

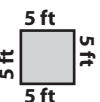



Perimeter = 90 ft

3) Scale :  3 yd

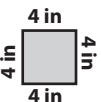


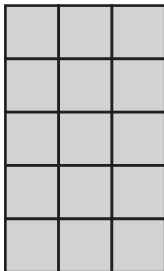
Perimeter = 42 yd

4) Scale :  5 ft

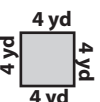



Perimeter = 11

Scale :  4 in

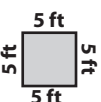



Perimeter = 64 in

7) Scale :  4 yd



Perimeter = 80

Scale :  5 ft



Perimeter = 80 ft

PREVIEW

Access the largest collection of worksheets for just **\$19.95** per year!

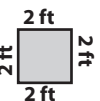
Members, please log in to download this worksheet.

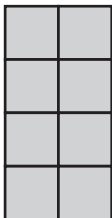
Log in

Not a member? Please sign up to gain complete access.

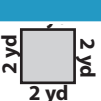
Sign up


www.mathworksheets4kids.com

10) Scale :  2 ft

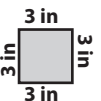


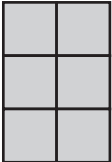
Perimeter = 24 ft

11) Scale :  2 yd



Perimeter = 36 yd

12) Scale :  3 in




Perimeter = 30 in


Perimeter

MS3


Calculate the perimeter of each shape.




Perimeter = _____




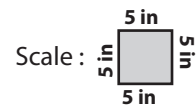
Perimeter = _____




Perimeter = _____



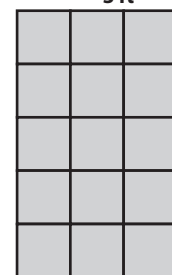
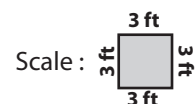
Perimeter = _____



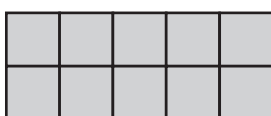
Perimeter = _____




Perimeter = _____




Perimeter = _____



Perimeter = _____



Perimeter = _____



Perimeter = _____

PREVIEW

Access the largest collection of
worksheets for just **\$19.95** per year!

Members, please
log in to
download this
worksheet.

Log in

Not a member?
Please sign up to
gain complete
access.


Sign up

www.mathworksheets4kids.com


Perimeter

MS3


Calculate the perimeter of each shape.




Perimeter = 60 ft




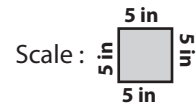
Perimeter = 32 in




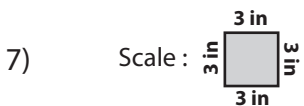
Perimeter = 66 yd



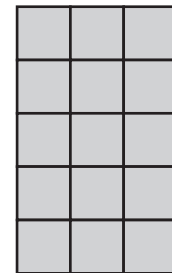
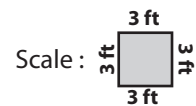
Perimeter = 28 yd



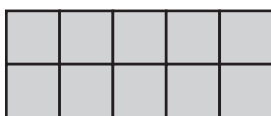
Perimeter = 90 in




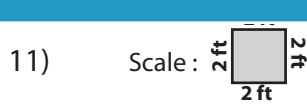
Perimeter = 54 in




Perimeter = 48 ft



Perimeter = 42 yd



Perimeter = 24 ft



Perimeter = 100 in

PREVIEW

Access the largest collection of worksheets for just **\$19.95** per year!

Members, please log in to download this worksheet.

Log in

Not a member? Please sign up to gain complete access.

Sign up

www.mathworksheets4kids.com