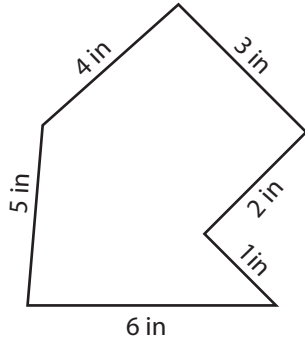


**Perimeter - Irregular Shapes**

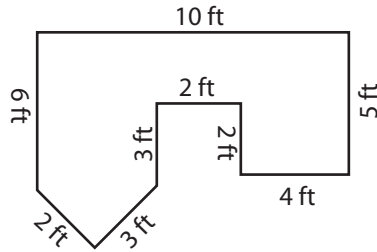
Find the perimeter of each shape.

1)



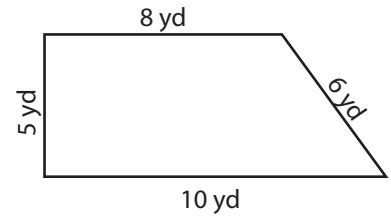
Perimeter =

2)



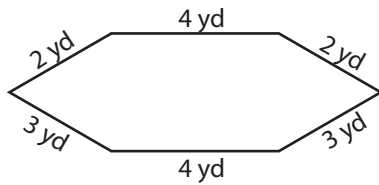
Perimeter =

3)



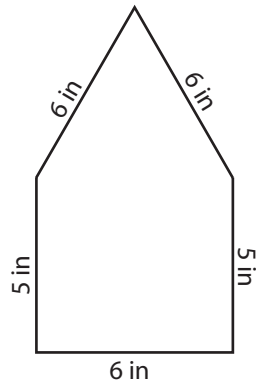
Perimeter =

4)



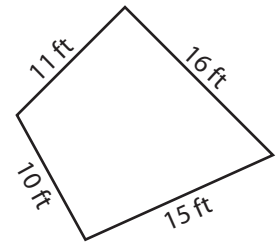
Perimeter =

5)



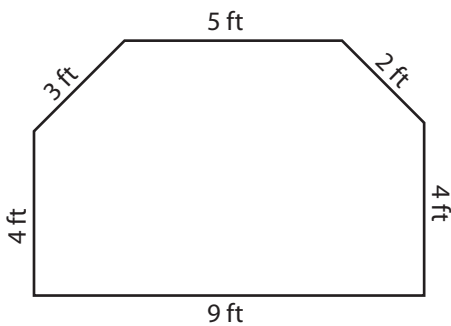
Perimeter =

6)



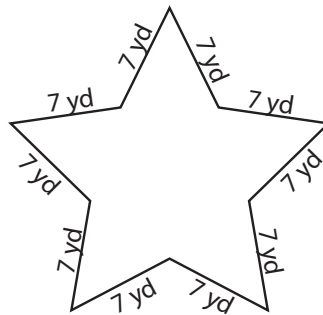
Perimeter =

7)



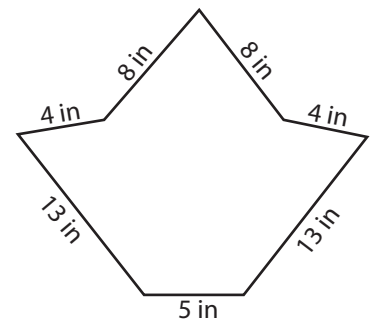
Perimeter =

8)



Perimeter =

9)



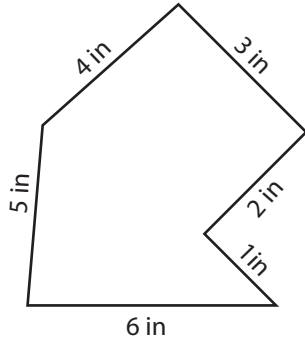
Perimeter =

**Answer key****Perimeter - Irregular Shapes**

Sheet 1

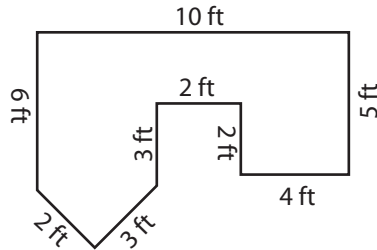
Find the perimeter of each shape.

1)



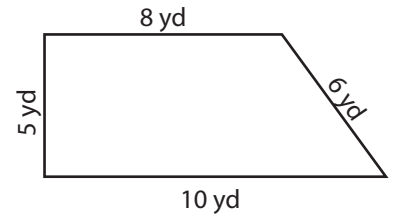
Perimeter = **21 in**

2)



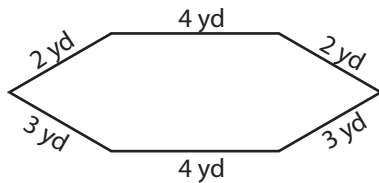
Perimeter = **37 ft**

3)



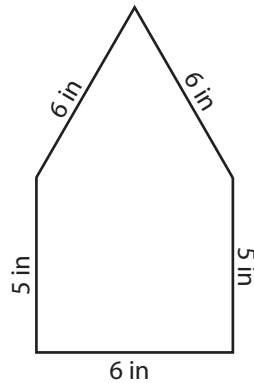
Perimeter = **29 yd**

4)



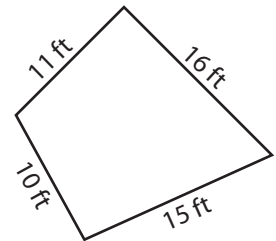
Perimeter = **18 yd**

5)



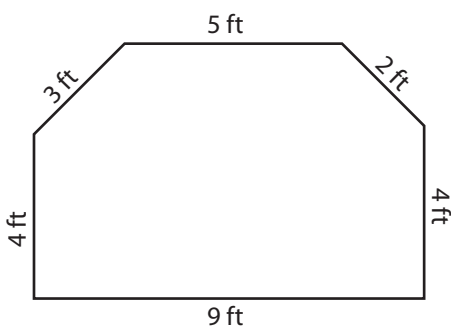
Perimeter = **28 in**

6)



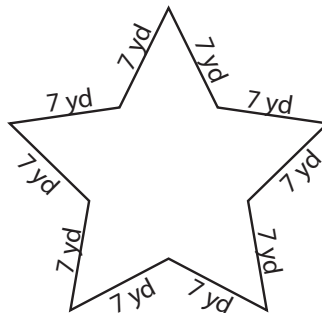
Perimeter = **52 ft**

7)



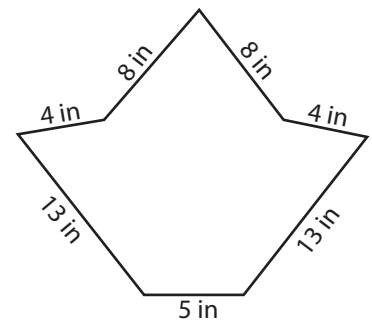
Perimeter = **27 ft**

8)



Perimeter = **70 yd**

9)

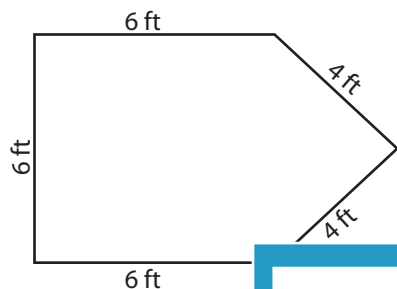


Perimeter = **55 in**

**Perimeter - Irregular Shapes**

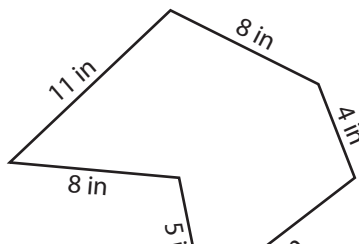
Find the perimeter of each shape.

1)

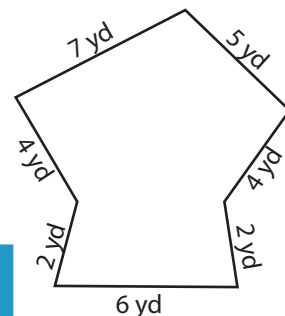


Perimeter =

2)

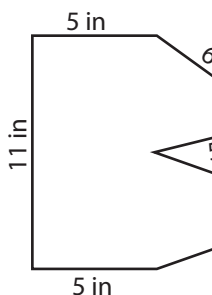


3)

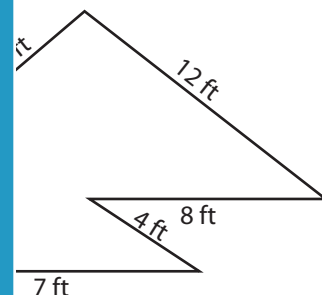


Perimeter =

4)

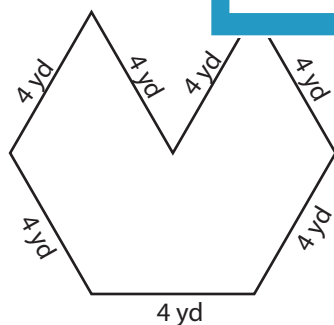


Perimeter =

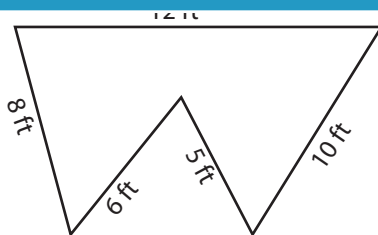


Perimeter =

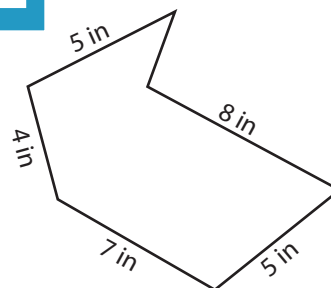
7)



Perimeter =



Perimeter =



Perimeter =

**PREVIEW**

Access the largest collection of worksheets for just **\$19.95** per year!

Members, please log in to download this worksheet.

**Log in**

Not a member? Please sign up to gain complete access.

**Sign up**

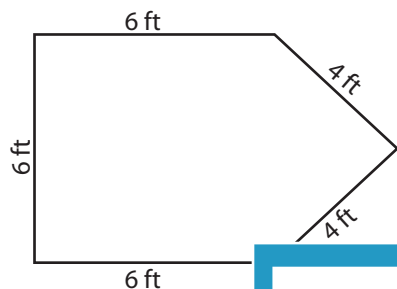
[www.mathworksheets4kids.com](http://www.mathworksheets4kids.com)

**Answer key**

**Perimeter - Irregular Shapes**

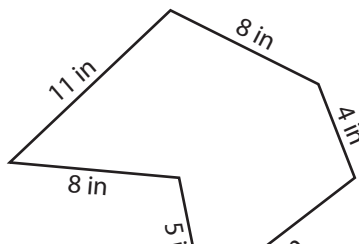
Find the perimeter of each shape.

1)



Perimeter = **26 ft**

2)



**PREVIEW**

Access the largest collection of worksheets for just **\$19.95** per year!

Members, please log in to download this worksheet.

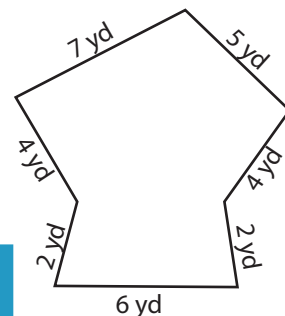
**Log in**

Not a member? Please sign up to gain complete access.

**Sign up**

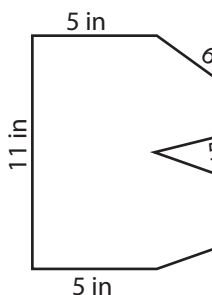
[www.mathworksheets4kids.com](http://www.mathworksheets4kids.com)

3)

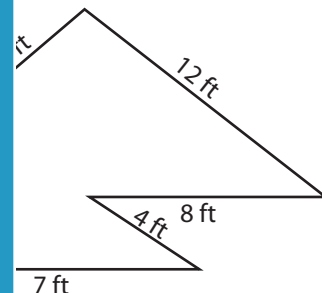


Perimeter = **30 yd**

4)

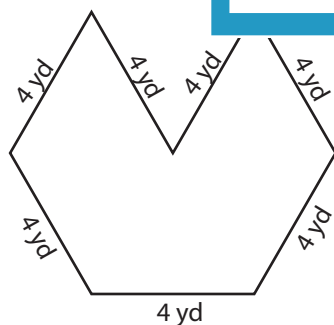


Perimeter = **46 in**

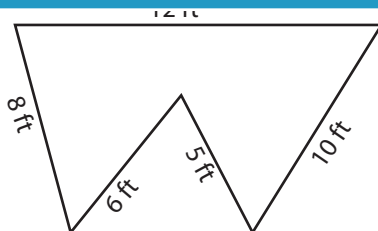


Perimeter = **41 ft**

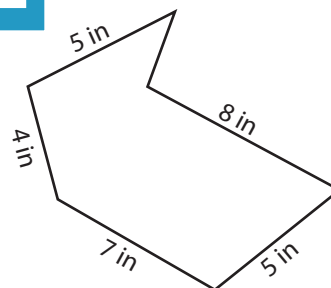
7)



Perimeter = **28 yd**



Perimeter = **41 ft**

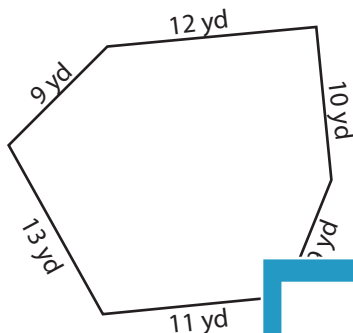


Perimeter = **29 in**

**Perimeter - Irregular Shapes**

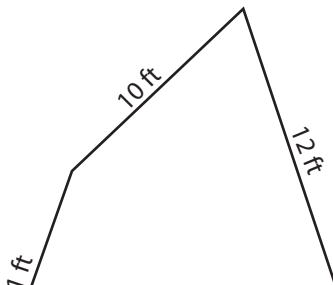
Find the perimeter of each shape.

1)

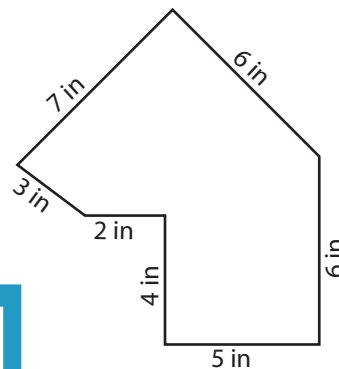


Perimeter =

2)

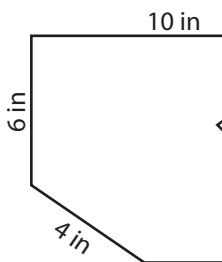


3)



Perimeter =

4)



Perimeter =

Access the largest collection of worksheets for just **\$19.95** per year!

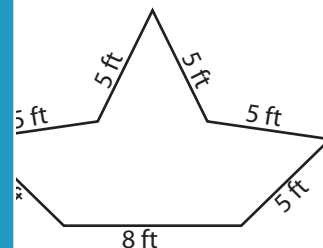
Members, please log in to download this worksheet.

**Log in**

Not a member? Please sign up to gain complete access.


**Sign up**

[www.mathworksheets4kids.com](http://www.mathworksheets4kids.com)

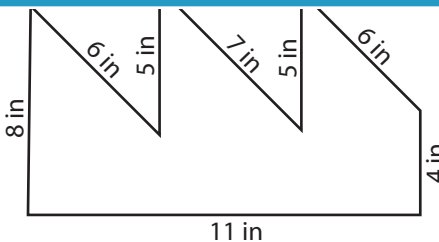


Perimeter =

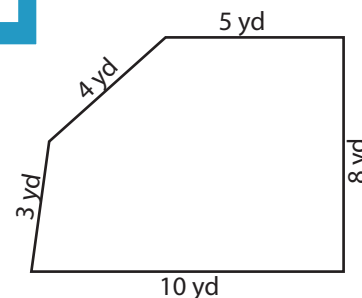
7)



Perimeter =



Perimeter =



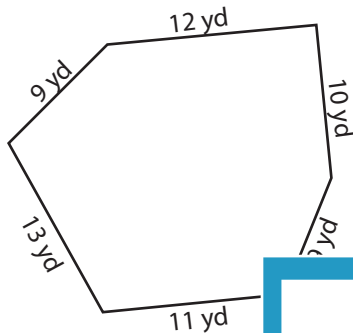
Perimeter =

**Answer key**

**Perimeter - Irregular Shapes**

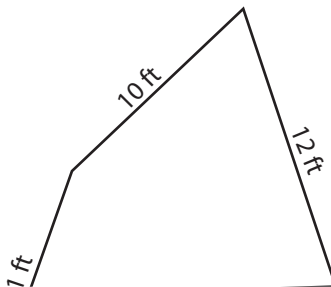
Find the perimeter of each shape.

1)

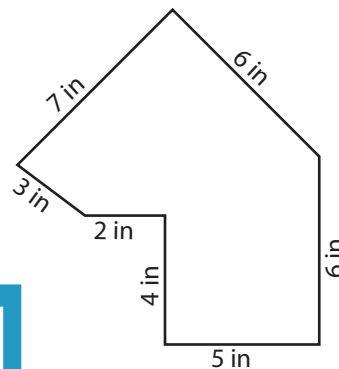


Perimeter = **64 yd**

2)

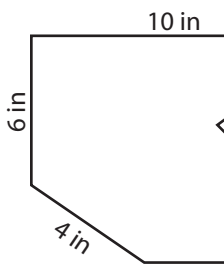


3)

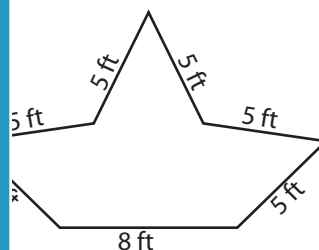


Perimeter = **33 in**

4)



Perimeter = **39 in**

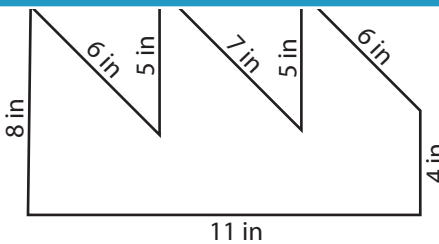


Perimeter = **38 ft**

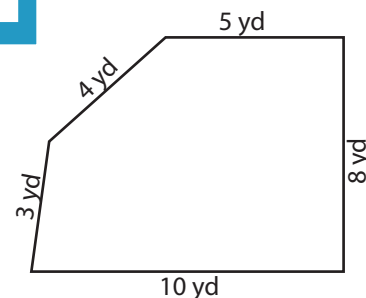
7)



Perimeter = **40 ft**



Perimeter = **52 in**



Perimeter = **30 yd**

**PREVIEW**

Access the largest collection of worksheets for just **\$19.95** per year!

Members, please log in to download this worksheet.

**Log in**

Not a member? Please sign up to gain complete access.

**Sign up**

[www.mathworksheets4kids.com](http://www.mathworksheets4kids.com)