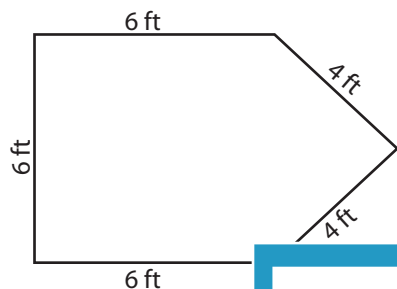


Perimeter - Irregular Shapes

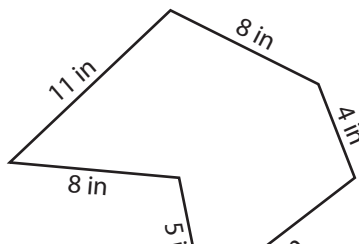
Find the perimeter of each shape.

1)

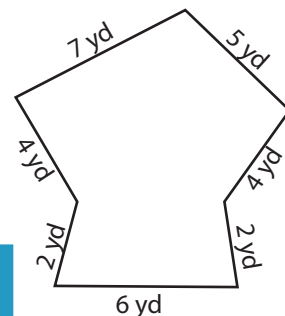


Perimeter =

2)

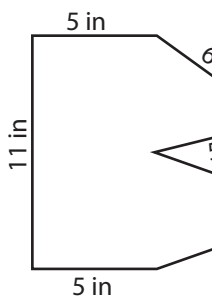


3)

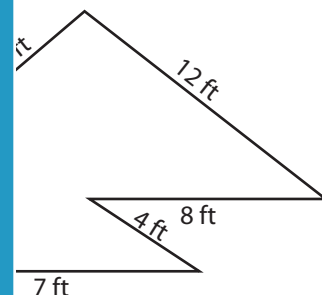


Perimeter =

4)

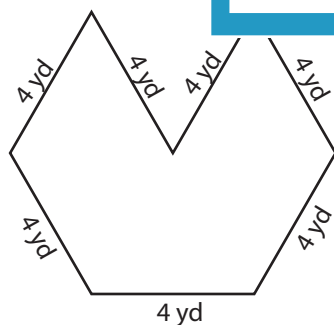


Perimeter =

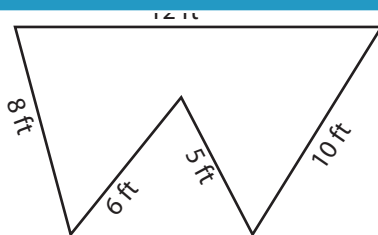


Perimeter =

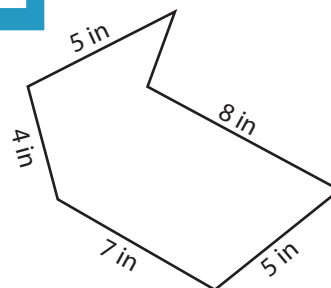
7)



Perimeter =



Perimeter =



Perimeter =

PREVIEW

Access the largest collection of worksheets for just **\$19.95** per year!

Members, please log in to download this worksheet.

Log in

Not a member? Please sign up to gain complete access.

Sign up

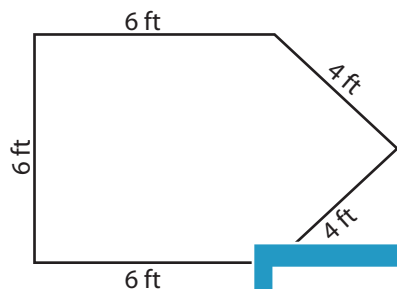
www.mathworksheets4kids.com

Answer key

Perimeter - Irregular Shapes

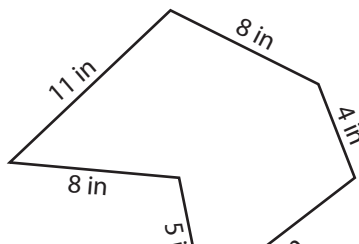
Find the perimeter of each shape.

1)

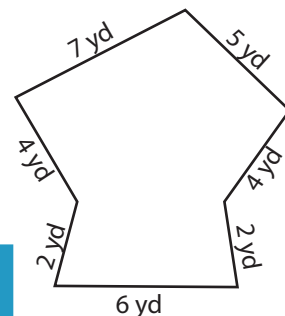


Perimeter = **26 ft**

2)

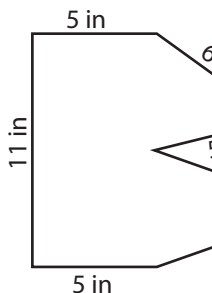


3)

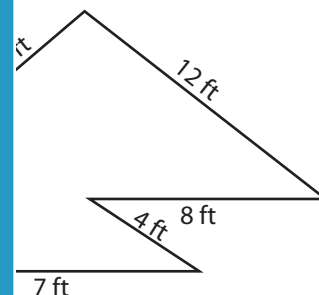


Perimeter = **30 yd**

4)

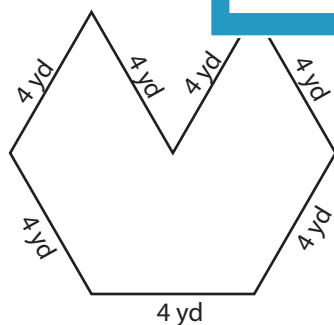


Perimeter = **46 in**

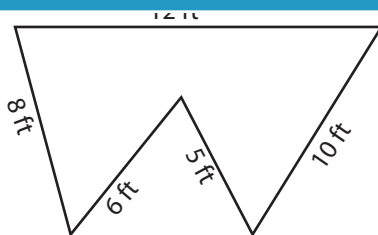


Perimeter = **41 ft**

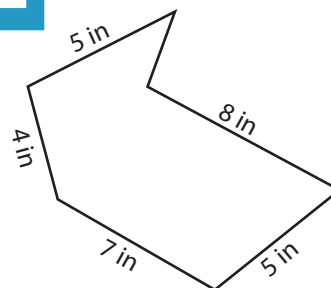
7)



Perimeter = **28 yd**



Perimeter = **41 ft**



Perimeter = **29 in**

PREVIEW

Access the largest collection of worksheets for just **\$19.95** per year!

Members, please log in to download this worksheet.

Log in

Not a member? Please sign up to gain complete access.

Sign up

www.mathworksheets4kids.com