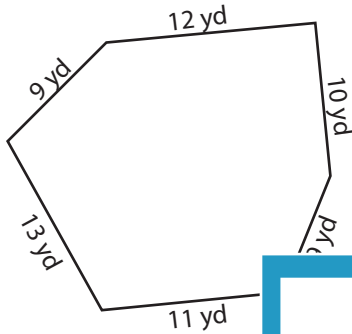


Perimeter - Irregular Shapes

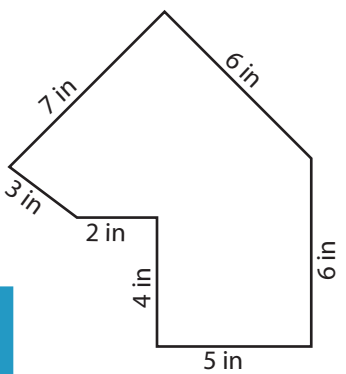
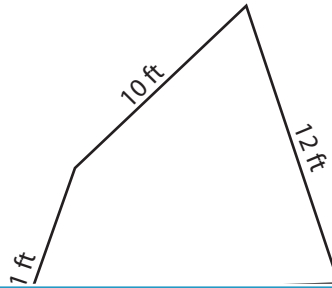
Find the perimeter of each shape.

1)



Perimeter =

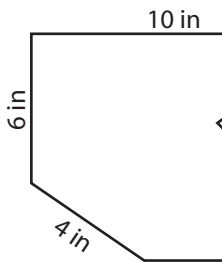
2)



3)

Perimeter =

4)



Perimeter =

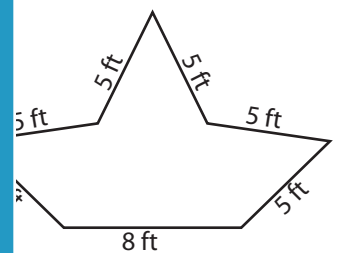
Access the largest collection of worksheets for just **\$19.95** per year!

Members, please log in to download this worksheet.

Log in


Not a member? Please sign up to gain complete access.

Sign up

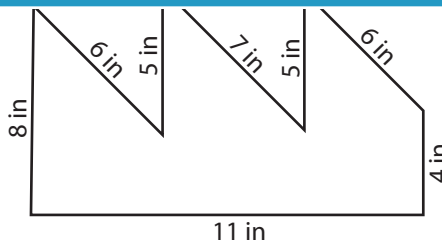


Perimeter =

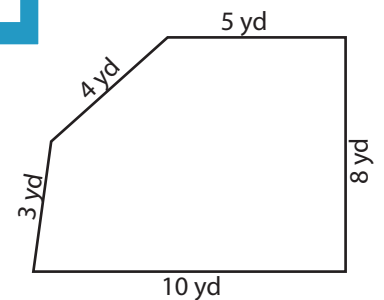
7)



Perimeter =



Perimeter =



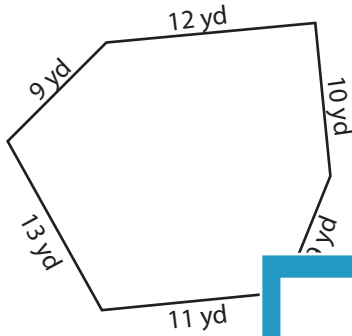
Perimeter =

Answer key

Perimeter - Irregular Shapes

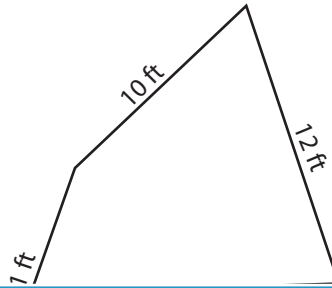
Find the perimeter of each shape.

1)

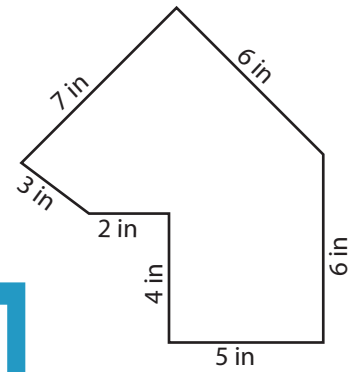


Perimeter = **64 yd**

2)

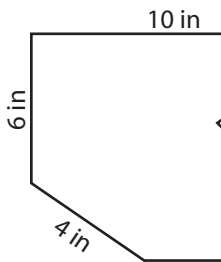


3)



Perimeter = **33 in**

4)



Perimeter = **39 in**

Access the largest collection of worksheets for just **\$19.95** per year!

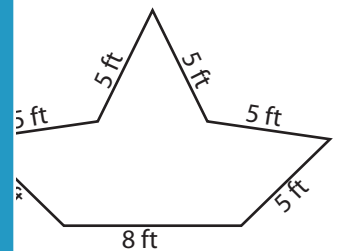
Members, please log in to download this worksheet.

Log in

Not a member? Please sign up to gain complete access.


Sign up

www.mathworksheets4kids.com

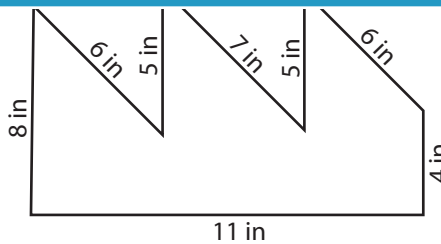


Perimeter = **38 ft**

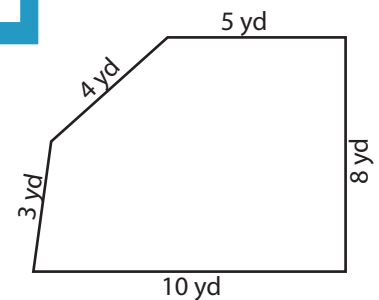
7)



Perimeter = **40 ft**



Perimeter = **52 in**



Perimeter = **30 yd**