

Name : _____

Pictograph - Grocery

Using the key, draw the pictograph to show the number of items in each kind.



PREVIEW

Gain complete access to the largest collection of worksheets in all subjects!


Members, please log in to download this worksheet.

Not a member? Please sign up to gain complete access.

www.mathworksheets4kids.com

Item	Items
	
	
	
	

Key

 = 3 Items

Name : _____

Answer Key

Sheet 1

Pictograph - Grocery

Using the key, draw the pictograph to show the number of items in each kind.









PREVIEW

Gain complete access to the largest collection of worksheets in all subjects!


Members, please log in to download this worksheet.

Not a member? Please sign up to gain complete access.

www.mathworksheets4kids.com

Item	Items
	
	
	
	

Key

 = 3 Items