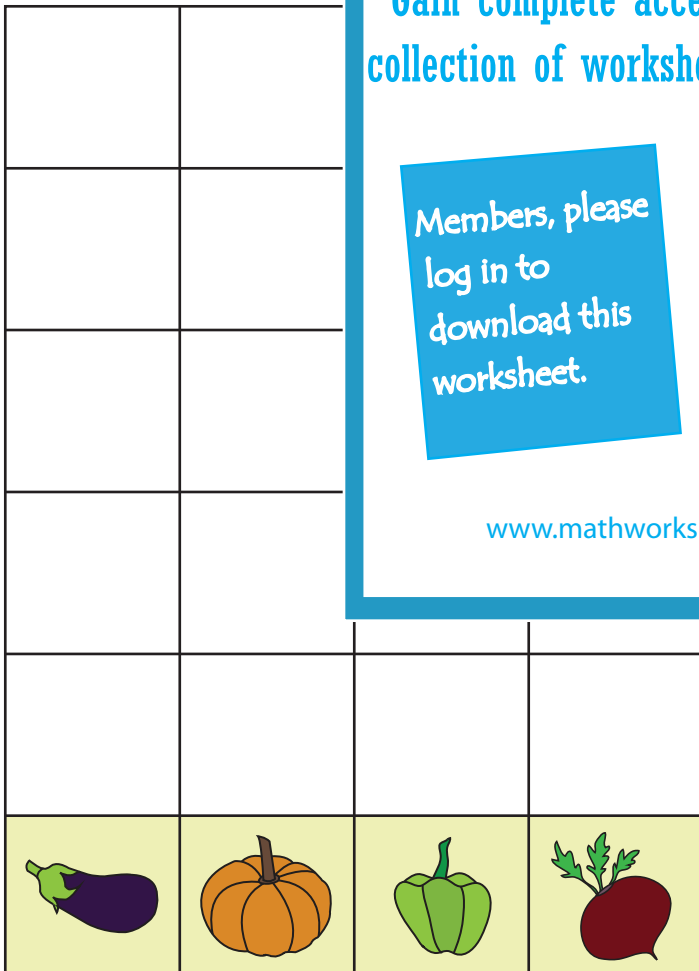


Name : \_\_\_\_\_

# Picture Graph - Vegetables

Sheet 2

Cut out each vegetable and paste it on the graph above the same kind.  
Based on the graph, answer the questions.



Gain complete access to the largest collection of worksheets in all subjects!

Members, please log in to download this worksheet.

Not a member? Please sign up to gain complete access.

[www.mathworksheets4kids.com](http://www.mathworksheets4kids.com)

able counts

?



he fewest?



3) How many  ,  ,  and  in all?

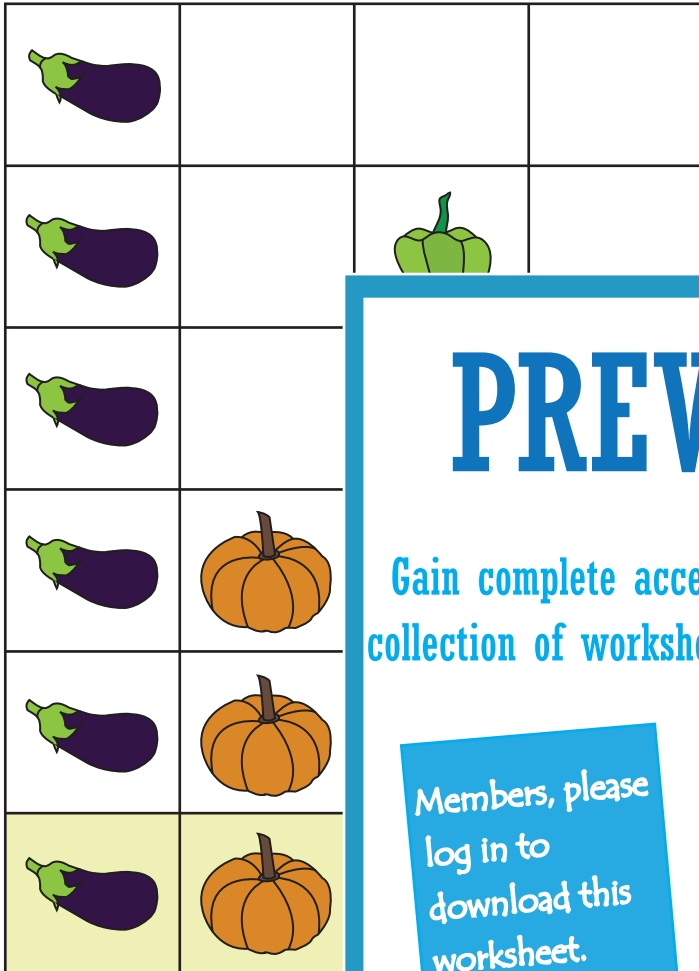
\_\_\_\_\_

Name : \_\_\_\_\_


**Answer Key**

# Picture Graph - Vegetables

Sheet 2



1) Which vegetable counts more than 4?



Which vegetable counts the fewest?



Which vegetable counts the most?  
\_\_\_\_\_, \_\_\_\_\_, \_\_\_\_\_ and \_\_\_\_\_

# PREVIEW

Gain complete access to the largest collection of worksheets in all subjects!

Members, please log in to download this worksheet.

Not a member? Please sign up to gain complete access.

[www.mathworksheets4kids.com](http://www.mathworksheets4kids.com)