



Name : _____

Pictograph - Doll Making



Sheet 3

Helen has a hobby of making dolls. The pictograph shows the number of dolls she made each week. Use the information from the graph to answer the questions.

Doll Making	
Week	Number of Dolls
Week 1	
Week 2	
Week 3	
Week 4	

PREVIEW

Gain complete access to the largest collection of worksheets in all subjects!

Members, please log in to download this worksheet.

Not a member? Please sign up to gain complete access.



www.mathworksheets4kids.com

- 1) How many dolls did she make in week 2? _____
- 2) In which week, Helen made 40 dolls? _____
- 3) In which week, Helen made fewest dolls? _____
- 4) How many fewer dolls did she make in week 4 than week 3? _____
- 5) How many dolls did she make altogether in four weeks? _____



Pictograph - Doll Making

Helen has a hobby of making dolls. The pictograph shows the number of dolls she made each week. Use the information from the graph to answer the questions.

Doll Making	
Week	Number of Dolls
Week 1	
Week 2	
Week 3	
Week 4	

PREVIEW

Gain complete access to the largest collection of worksheets in all subjects!

Members, please log in to download this worksheet.

Not a member? Please sign up to gain complete access.

www.mathworksheets4kids.com

- How many dolls did Helen make in week 3? 50
- In which week, Helen made 40 dolls? Week 4
- In which week, Helen made fewest dolls? Week 1
- How many fewer dolls did she make in week 4 than week 3? 30
- How many dolls did she make altogether in four weeks? 180