



Name : _____

Pictograph - Earnings



Sheet 2

Isaac, Perry, Sidney, Julian and Kent are friends. The pictograph shows the earnings of five friends in a month. Use the information from the graph to answer the questions.

Earnings of Five Friends	
Name	Earnings
Isaac	
Perry	
Sidney	
Julian	
Kent	

PREVIEW
Gain complete access to the largest
collection of worksheets in all subjects!

Members, please
log in to
download this
worksheet.

Not a member?
Please sign up to
gain complete
access.

www.mathworksheets4kids.com



- 1) How much money _____
- 2) Adding two of the friend's earnings, the sum is \$2800. Name the friends. _____
- 3) His earning is one-half of what Julian earns. Who is he? _____
- 4) How much more money did Isaac earn than Kent? _____
- 5) Steve is a friend of Perry. Steve earns \$1400 in a month. Draw a pictograph to show his meaning.



Pictograph - Earnings



Isaac, Perry, Sidney, Julian and Kent are friends. The pictograph shows the earnings of five friends in a month. Use the information from the graph to answer the questions.

Earnings of Five Friends	
Name	Earnings
Isaac	
Perry	
Sidney	
Julian	
Kent	

PREVIEW

Gain complete access to the largest collection of worksheets in all subjects!

Members, please log in to download this worksheet.

Not a member? Please sign up to gain complete access.

www.mathworksheets4kids.com

1) How much money _____ **\$1050**

2) Adding two of the friend's earnings, the sum is \$2800. Name the friends. _____ **Isaac and Sidney**

3) His earning is one-half of what Julian earns. Who is he? _____ **Kent**

4) How much more money did Isaac earn than Kent? _____ **\$175**

5) Steve is a friend of Perry. Steve earns \$1400 in a month. Draw a pictograph to show his meaning.

