




Name : _____

Pictograph - Pumpkin Harvest



Sheet 1

The pictograph shows the number of pumpkins harvested by five farmers in the fall season. Use the graph to answer the questions.

Pumpkin Harvest	
Name	Number of Pumpkins
Danny	
Jacob	
Ray	
Edwin	
Alex	

PREVIEW

Gain complete access to the largest collection of worksheets in all subjects!

Members, please log in to download this worksheet.

Not a member? Please sign up to gain complete access.




www.mathworksheets4kids.com

- 1) Who harvested the most? _____
- 2) How many pumpkins did Jacob harvest? _____
- 3) Who harvested 250 pumpkins? _____
- 4) Name the farmers who have harvested the same number of pumpkins? _____
- 5) Danny harvested more pumpkins than Ray. Is that true? _____

Pictograph - Pumpkin Harvest



The pictograph shows the number of pumpkins harvested by five farmers in the fall season. Use the graph to answer the questions.

Pumpkin Harvest	
Name	Number of Pumpkins
Danny	
Jacob	
Ray	
Edwin	
Alex	

PREVIEW

Gain complete access to the largest collection of worksheets in all subjects!

Members, please log in to download this worksheet.

Not a member? Please sign up to gain complete access.

www.mathworksheets4kids.com

- Who harvested the most? Edwin
- How many pumpkins did Jacob harvest? 125
- Who harvested 250 pumpkins? Ray
- Name the farmers who have harvested the same number of pumpkins? Danny and Alex
- Danny harvested more pumpkins than Ray. Is that true? No